

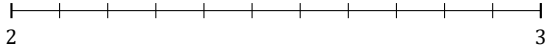
L'Arrondi de Nombres Mixtes (J)

Nom: _____

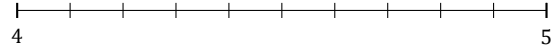
Date: _____

Arrondissez chaque nombre mixte au nombre entier le plus proche.
Arrondissez à l'entier supérieur en cas d'égalité.

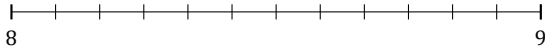
1. $2\frac{4}{11} \approx$



2. $4\frac{1}{10} \approx$



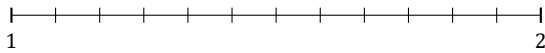
3. $8\frac{9}{12} \approx$



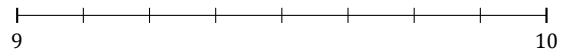
4. $9\frac{1}{3} \approx$



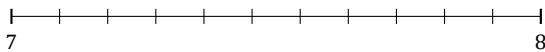
5. $1\frac{2}{12} \approx$



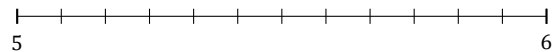
6. $9\frac{5}{8} \approx$



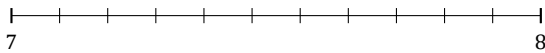
7. $7\frac{6}{11} \approx$



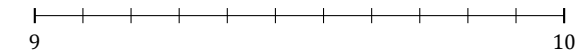
8. $5\frac{5}{12} \approx$



9. $7\frac{2}{11} \approx$



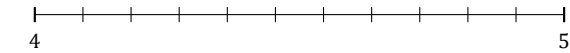
10. $9\frac{8}{11} \approx$



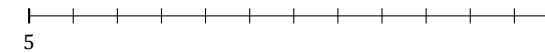
11. $1\frac{3}{5} \approx$



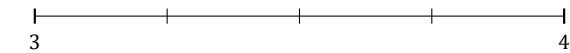
12. $4\frac{3}{11} \approx$



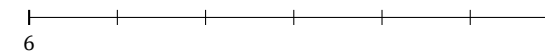
13. $5\frac{11}{12} \approx$



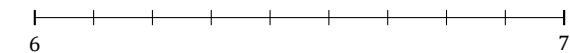
14. $3\frac{2}{4} \approx$



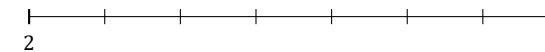
15. $6\frac{2}{6} \approx$



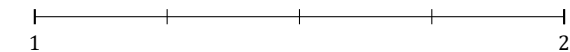
16. $6\frac{5}{9} \approx$



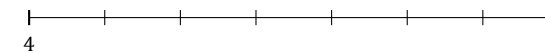
17. $2\frac{3}{7} \approx$



18. $1\frac{3}{4} \approx$



19. $4\frac{4}{7} \approx$



20. $3\frac{5}{11} \approx$

