

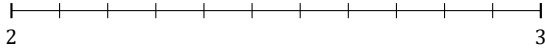
# L'Arrondi de Nombres Mixtes (J)

Nom: \_\_\_\_\_

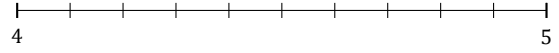
Date: \_\_\_\_\_

Arrondissez chaque nombre mixte au nombre entier le plus proche.  
Arrondissez à l'entier supérieur en cas d'égalité.

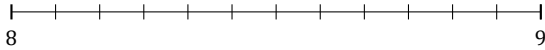
1.  $2\frac{4}{11} \approx$



2.  $4\frac{1}{10} \approx$



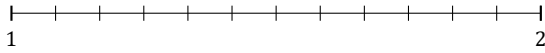
3.  $8\frac{9}{12} \approx$



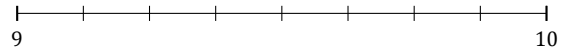
4.  $9\frac{1}{3} \approx$



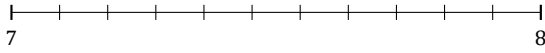
5.  $1\frac{2}{12} \approx$



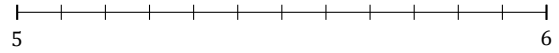
6.  $9\frac{5}{8} \approx$



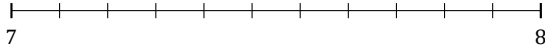
7.  $7\frac{6}{11} \approx$



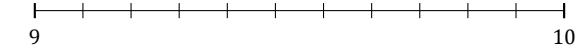
8.  $5\frac{5}{12} \approx$



9.  $7\frac{2}{11} \approx$



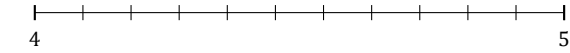
10.  $9\frac{8}{11} \approx$



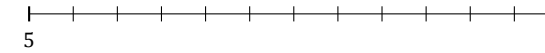
11.  $1\frac{3}{5} \approx$



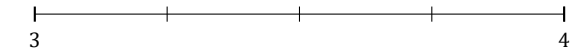
12.  $4\frac{3}{11} \approx$



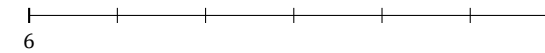
13.  $5\frac{11}{12} \approx$



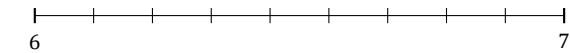
14.  $3\frac{2}{4} \approx$



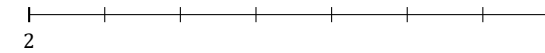
15.  $6\frac{2}{6} \approx$



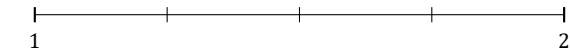
16.  $6\frac{5}{9} \approx$



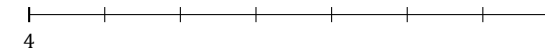
17.  $2\frac{3}{7} \approx$



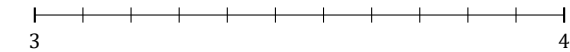
18.  $1\frac{3}{4} \approx$



19.  $4\frac{4}{7} \approx$



20.  $3\frac{5}{11} \approx$



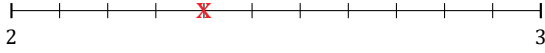
# L'Arrondi de Nombres Mixtes (J) Réponses

Nom: \_\_\_\_\_

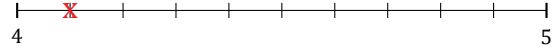
Date: \_\_\_\_\_

Arrondissez chaque nombre mixte au nombre entier le plus proche.  
Arrondissez à l'entier supérieur en cas d'égalité.

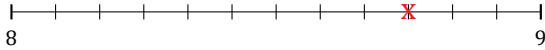
1.  $2\frac{4}{11} \simeq 2$



2.  $4\frac{1}{10} \simeq 4$



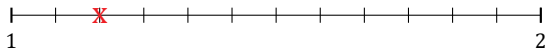
3.  $8\frac{9}{12} \simeq 9$



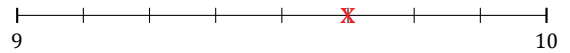
4.  $9\frac{1}{3} \simeq 9$



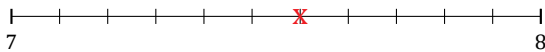
5.  $1\frac{2}{12} \simeq 1$



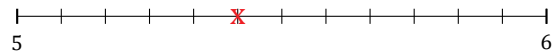
6.  $9\frac{5}{8} \simeq 10$



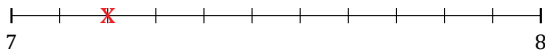
7.  $7\frac{6}{11} \simeq 8$



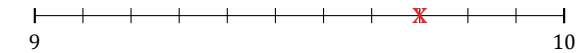
8.  $5\frac{5}{12} \simeq 5$



9.  $7\frac{2}{11} \simeq 7$



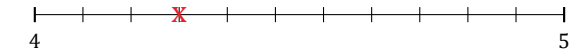
10.  $9\frac{8}{11} \simeq 10$



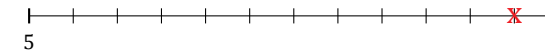
11.  $1\frac{3}{5} \simeq 2$



12.  $4\frac{3}{11} \simeq 4$



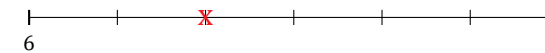
13.  $5\frac{11}{12} \simeq 6$



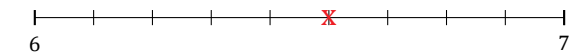
14.  $3\frac{2}{4} \simeq 4$



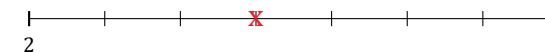
15.  $6\frac{2}{6} \simeq 6$



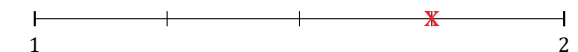
16.  $6\frac{5}{9} \simeq 7$



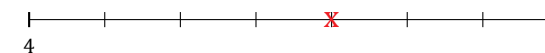
17.  $2\frac{3}{7} \simeq 2$



18.  $1\frac{3}{4} \simeq 2$



19.  $4\frac{4}{7} \simeq 5$



20.  $3\frac{5}{11} \simeq 3$

