

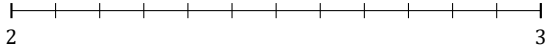
L'Arrondi de Nombres Mixtes (H)

Nom: _____

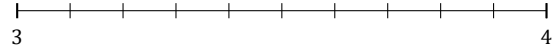
Date: _____

Arrondissez chaque nombre mixte au nombre entier le plus proche.
Arrondissez à l'entier supérieur en cas d'égalité.

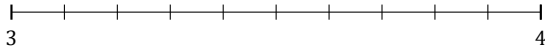
1. $2\frac{4}{12} \approx$



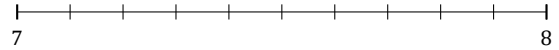
2. $3\frac{6}{10} \approx$



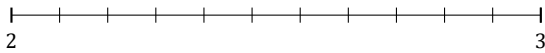
3. $3\frac{5}{10} \approx$



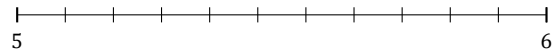
4. $7\frac{9}{10} \approx$



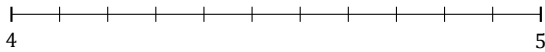
5. $2\frac{9}{11} \approx$



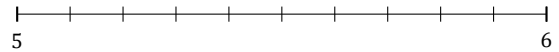
6. $5\frac{4}{11} \approx$



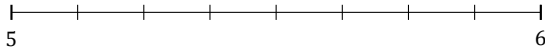
7. $4\frac{5}{11} \approx$



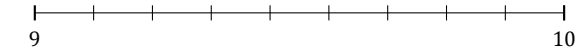
8. $5\frac{4}{10} \approx$



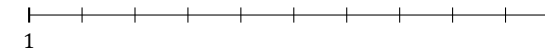
9. $5\frac{7}{8} \approx$



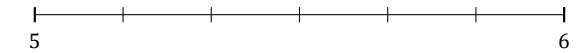
10. $9\frac{5}{9} \approx$



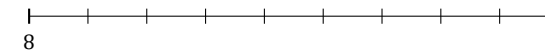
11. $1\frac{2}{10} \approx$



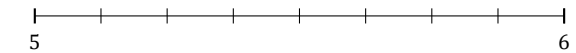
12. $5\frac{2}{6} \approx$



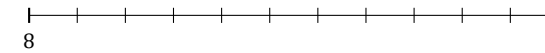
13. $8\frac{1}{9} \approx$



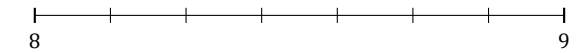
14. $5\frac{3}{8} \approx$



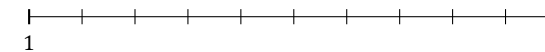
15. $8\frac{10}{11} \approx$



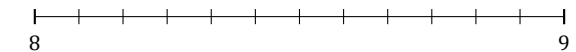
16. $8\frac{6}{7} \approx$



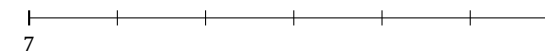
17. $1\frac{7}{10} \approx$



18. $8\frac{11}{12} \approx$



19. $7\frac{4}{6} \approx$



20. $8\frac{1}{5} \approx$

