

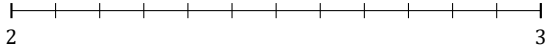
# L'Arrondi de Nombres Mixtes (H)

Nom: \_\_\_\_\_

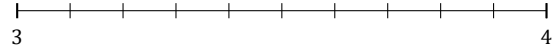
Date: \_\_\_\_\_

Arrondissez chaque nombre mixte au nombre entier le plus proche.  
Arrondissez à l'entier supérieur en cas d'égalité.

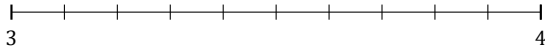
1.  $2\frac{4}{12} \approx$



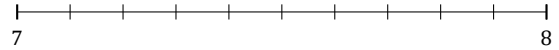
2.  $3\frac{6}{10} \approx$



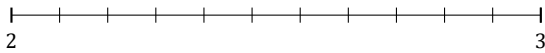
3.  $3\frac{5}{10} \approx$



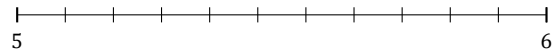
4.  $7\frac{9}{10} \approx$



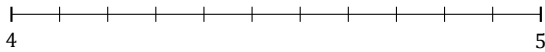
5.  $2\frac{9}{11} \approx$



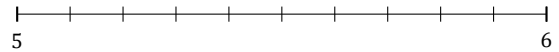
6.  $5\frac{4}{11} \approx$



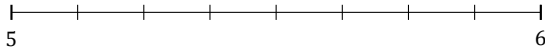
7.  $4\frac{5}{11} \approx$



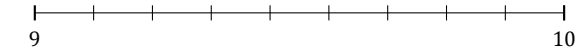
8.  $5\frac{4}{10} \approx$



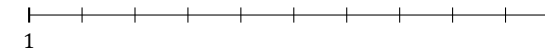
9.  $5\frac{7}{8} \approx$



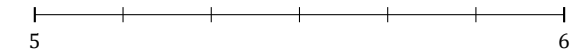
10.  $9\frac{5}{9} \approx$



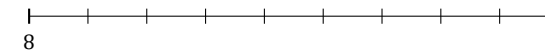
11.  $1\frac{2}{10} \approx$



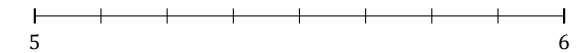
12.  $5\frac{2}{6} \approx$



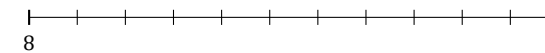
13.  $8\frac{1}{9} \approx$



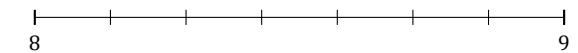
14.  $5\frac{3}{8} \approx$



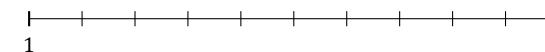
15.  $8\frac{10}{11} \approx$



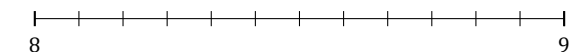
16.  $8\frac{6}{7} \approx$



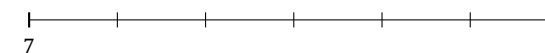
17.  $1\frac{7}{10} \approx$



18.  $8\frac{11}{12} \approx$



19.  $7\frac{4}{6} \approx$



20.  $8\frac{1}{5} \approx$



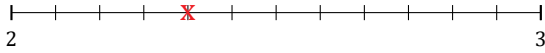
# L'Arrondi de Nombres Mixtes (H) Réponses

Nom: \_\_\_\_\_

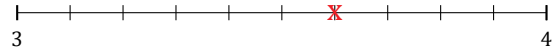
Date: \_\_\_\_\_

Arrondissez chaque nombre mixte au nombre entier le plus proche.  
Arrondissez à l'entier supérieur en cas d'égalité.


1.  $2\frac{4}{12} \simeq 2$



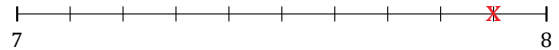
2.  $3\frac{6}{10} \simeq 4$



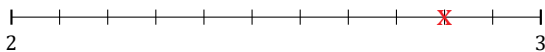
3.  $3\frac{5}{10} \simeq 4$



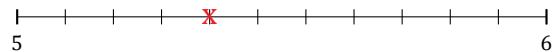
4.  $7\frac{9}{10} \simeq 8$




5.  $2\frac{9}{11} \simeq 3$



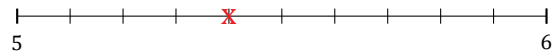
6.  $5\frac{4}{11} \simeq 5$



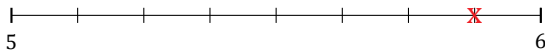
7.  $4\frac{5}{11} \simeq 4$



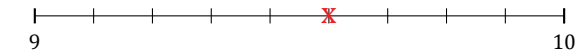
8.  $5\frac{4}{10} \simeq 5$



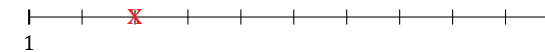
9.  $5\frac{7}{8} \simeq 6$



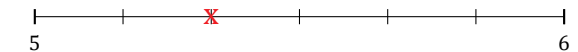
10.  $9\frac{5}{9} \simeq 10$



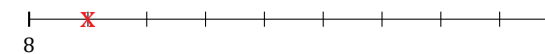
11.  $1\frac{2}{10} \simeq 1$



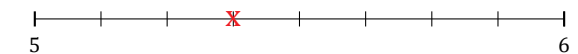
12.  $5\frac{2}{6} \simeq 5$



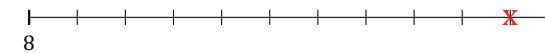
13.  $8\frac{1}{9} \simeq 8$



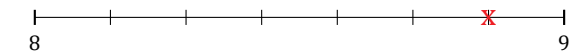
14.  $5\frac{3}{8} \simeq 5$



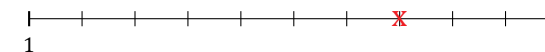
15.  $8\frac{10}{11} \simeq 9$



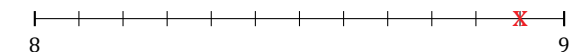
16.  $8\frac{6}{7} \simeq 9$



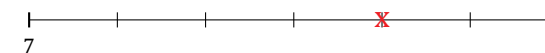
17.  $1\frac{7}{10} \simeq 2$



18.  $8\frac{11}{12} \simeq 9$



19.  $7\frac{4}{6} \simeq 8$



20.  $8\frac{1}{5} \simeq 8$

