

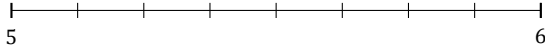
L'Arrondi de Nombres Mixtes (G)

Nom: _____

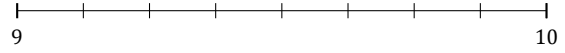
Date: _____

Arrondissez chaque nombre mixte au nombre entier le plus proche.
Arrondissez à l'entier supérieur en cas d'égalité.

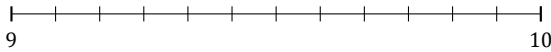
1. $5\frac{1}{8} \approx$



2. $9\frac{3}{8} \approx$



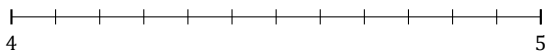
3. $9\frac{2}{12} \approx$



4. $8\frac{4}{5} \approx$




5. $4\frac{11}{12} \approx$



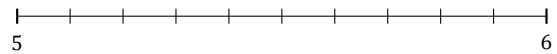
6. $3\frac{1}{3} \approx$



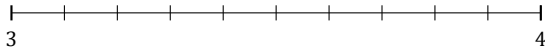
7. $8\frac{5}{7} \approx$



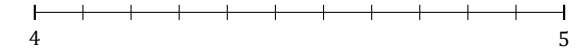
8. $5\frac{8}{10} \approx$



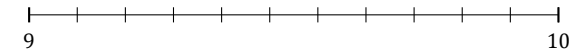
9. $3\frac{5}{10} \approx$



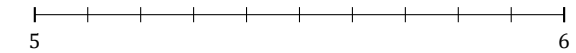
10. $4\frac{1}{11} \approx$



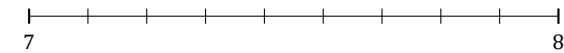
11. $9\frac{4}{11} \approx$



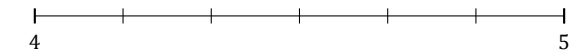
12. $5\frac{2}{10} \approx$



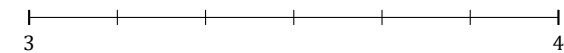
13. $7\frac{1}{9} \approx$



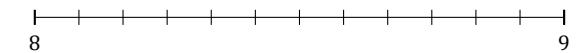
14. $4\frac{1}{6} \approx$



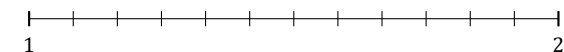
15. $3\frac{3}{6} \approx$



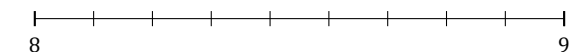
16. $8\frac{6}{12} \approx$



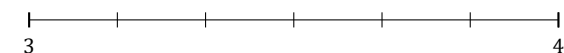
17. $1\frac{10}{12} \approx$



18. $8\frac{7}{9} \approx$



19. $3\frac{4}{6} \approx$



20. $1\frac{5}{6} \approx$

