

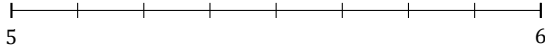
# L'Arrondi de Nombres Mixtes (G)

Nom: \_\_\_\_\_

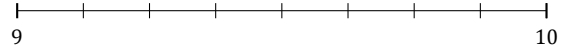
Date: \_\_\_\_\_

Arrondissez chaque nombre mixte au nombre entier le plus proche.  
Arrondissez à l'entier supérieur en cas d'égalité.

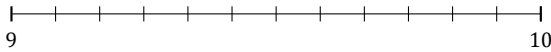
1.  $5\frac{1}{8} \approx$



2.  $9\frac{3}{8} \approx$



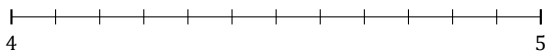
3.  $9\frac{2}{12} \approx$



4.  $8\frac{4}{5} \approx$




5.  $4\frac{11}{12} \approx$



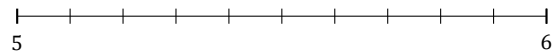
6.  $3\frac{1}{3} \approx$



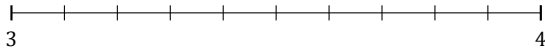
7.  $8\frac{5}{7} \approx$



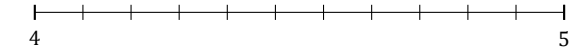
8.  $5\frac{8}{10} \approx$



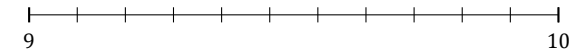
9.  $3\frac{5}{10} \approx$



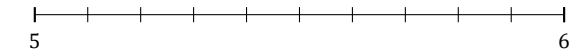
10.  $4\frac{1}{11} \approx$



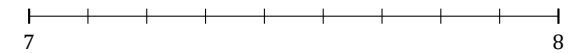
11.  $9\frac{4}{11} \approx$



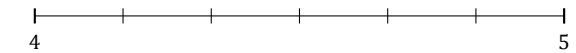
12.  $5\frac{2}{10} \approx$



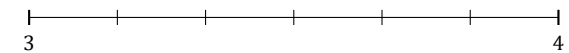
13.  $7\frac{1}{9} \approx$



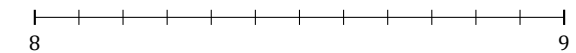
14.  $4\frac{1}{6} \approx$



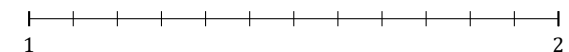
15.  $3\frac{3}{6} \approx$



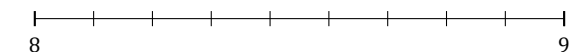
16.  $8\frac{6}{12} \approx$



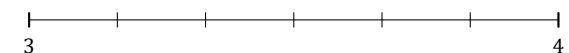
17.  $1\frac{10}{12} \approx$



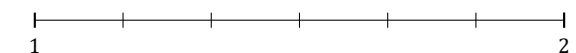
18.  $8\frac{7}{9} \approx$



19.  $3\frac{4}{6} \approx$



20.  $1\frac{5}{6} \approx$



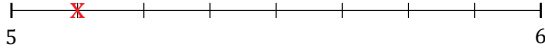
# L'Arrondi de Nombres Mixtes (G) Réponses

Nom: \_\_\_\_\_

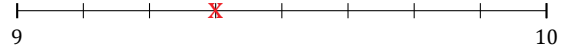
Date: \_\_\_\_\_

Arrondissez chaque nombre mixte au nombre entier le plus proche.  
Arrondissez à l'entier supérieur en cas d'égalité.

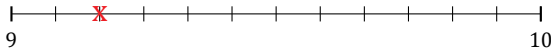
1.  $5\frac{1}{8} \simeq 5$



2.  $9\frac{3}{8} \simeq 9$



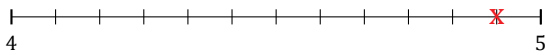
3.  $9\frac{2}{12} \simeq 9$



4.  $8\frac{4}{5} \simeq 9$




5.  $4\frac{11}{12} \simeq 5$



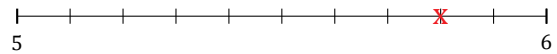
6.  $3\frac{1}{3} \simeq 3$



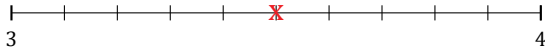
7.  $8\frac{5}{7} \simeq 9$



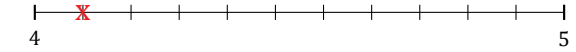
8.  $5\frac{8}{10} \simeq 6$



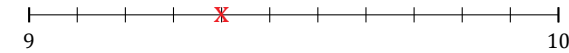
9.  $3\frac{5}{10} \simeq 4$



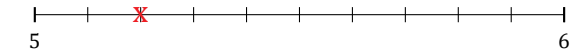
10.  $4\frac{1}{11} \simeq 4$



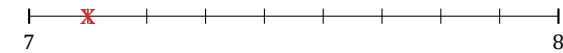
11.  $9\frac{4}{11} \simeq 9$



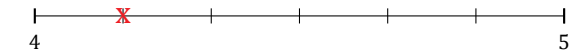
12.  $5\frac{2}{10} \simeq 5$



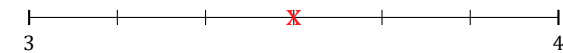
13.  $7\frac{1}{9} \simeq 7$



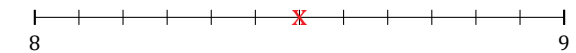
14.  $4\frac{1}{6} \simeq 4$



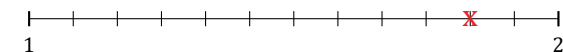
15.  $3\frac{3}{6} \simeq 4$



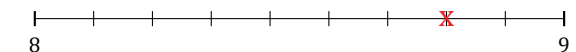
16.  $8\frac{6}{12} \simeq 9$



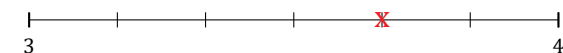
17.  $1\frac{10}{12} \simeq 2$



18.  $8\frac{7}{9} \simeq 9$



19.  $3\frac{4}{6} \simeq 4$



20.  $1\frac{5}{6} \simeq 2$

