

# L'Arrondi de Nombres Mixtes (F)

Nom: \_\_\_\_\_

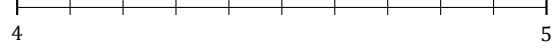
Date: \_\_\_\_\_

Arrondissez chaque nombre mixte au nombre entier le plus proche.  
Arrondissez à l'entier supérieur en cas d'égalité.

1.  $8\frac{1}{3} \approx$




2.  $4\frac{2}{10} \approx$



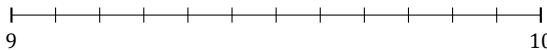
3.  $1\frac{5}{9} \approx$



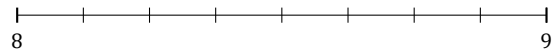
4.  $5\frac{2}{5} \approx$



5.  $9\frac{7}{12} \approx$




6.  $8\frac{4}{8} \approx$



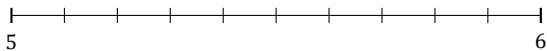
7.  $4\frac{1}{7} \approx$



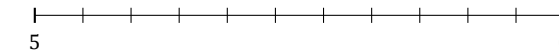
8.  $2\frac{1}{5} \approx$



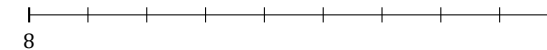
9.  $5\frac{8}{10} \approx$



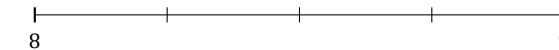
10.  $5\frac{4}{11} \approx$




11.  $8\frac{7}{9} \approx$



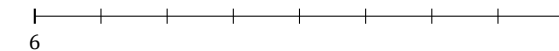
12.  $8\frac{2}{4} \approx$



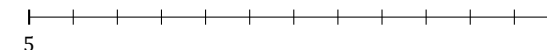
13.  $7\frac{4}{5} \approx$



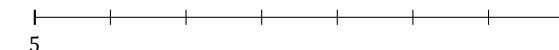
14.  $6\frac{6}{8} \approx$



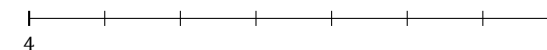
15.  $5\frac{8}{12} \approx$



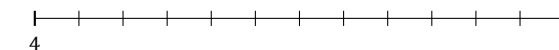
16.  $5\frac{5}{7} \approx$



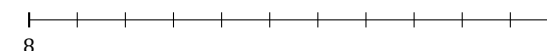
17.  $4\frac{2}{7} \approx$



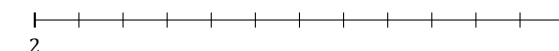
18.  $4\frac{10}{12} \approx$



19.  $8\frac{2}{11} \approx$



20.  $2\frac{5}{12} \approx$



# L'Arrondi de Nombres Mixtes (F) Réponses

Nom: \_\_\_\_\_

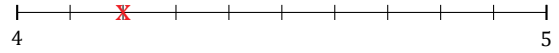
Date: \_\_\_\_\_

Arrondissez chaque nombre mixte au nombre entier le plus proche.  
Arrondissez à l'entier supérieur en cas d'égalité.

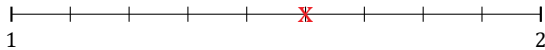
1.  $8\frac{1}{3} \simeq 8$



2.  $4\frac{2}{10} \simeq 4$



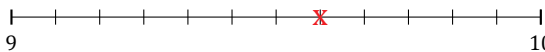
3.  $1\frac{5}{9} \simeq 2$



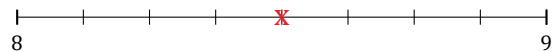
4.  $5\frac{2}{5} \simeq 5$



5.  $9\frac{7}{12} \simeq 10$




6.  $8\frac{4}{8} \simeq 9$



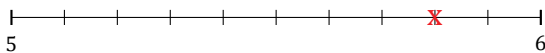
7.  $4\frac{1}{7} \simeq 4$



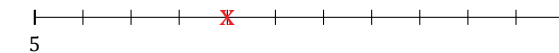
8.  $2\frac{1}{5} \simeq 2$



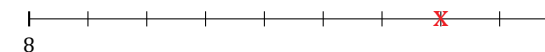
9.  $5\frac{8}{10} \simeq 6$



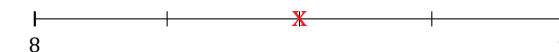
10.  $5\frac{4}{11} \simeq 5$



11.  $8\frac{7}{9} \simeq 9$



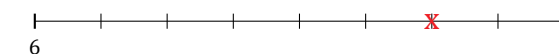
12.  $8\frac{2}{4} \simeq 9$



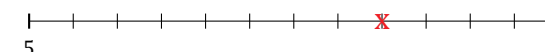
13.  $7\frac{4}{5} \simeq 8$



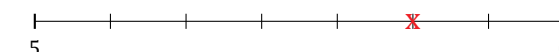
14.  $6\frac{6}{8} \simeq 7$



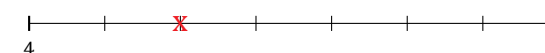
15.  $5\frac{8}{12} \simeq 6$



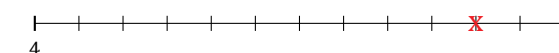
16.  $5\frac{5}{7} \simeq 6$



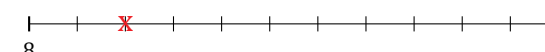
17.  $4\frac{2}{7} \simeq 4$



18.  $4\frac{10}{12} \simeq 5$



19.  $8\frac{2}{11} \simeq 8$



20.  $2\frac{5}{12} \simeq 2$

