

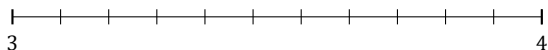
# L'Arrondi de Nombres Mixtes (E)

Nom: \_\_\_\_\_


Date: \_\_\_\_\_

Arrondissez chaque nombre mixte au nombre entier le plus proche.  
Arrondissez à l'entier supérieur en cas d'égalité.

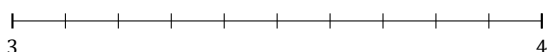
1.  $3\frac{5}{11} \approx$



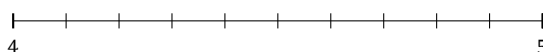
2.  $3\frac{6}{7} \approx$



3.  $3\frac{3}{10} \approx$



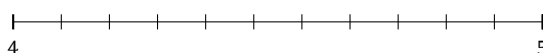
4.  $4\frac{5}{10} \approx$



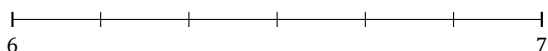
5.  $7\frac{4}{7} \approx$



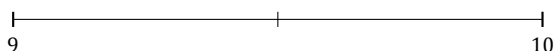
6.  $4\frac{9}{11} \approx$



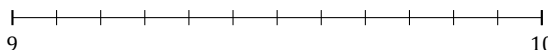
7.  $6\frac{3}{6} \approx$



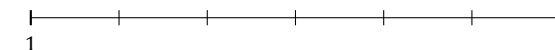
8.  $9\frac{1}{2} \approx$



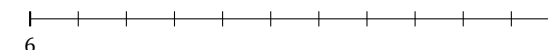
9.  $9\frac{3}{12} \approx$



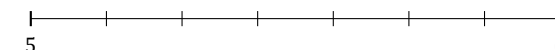
10.  $1\frac{4}{6} \approx$



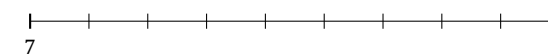
11.  $6\frac{4}{11} \approx$



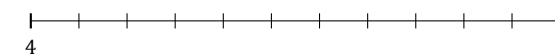
12.  $5\frac{3}{7} \approx$



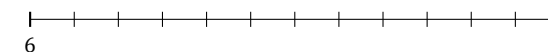
13.  $7\frac{8}{9} \approx$




14.  $4\frac{8}{11} \approx$



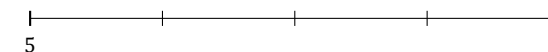
15.  $6\frac{4}{12} \approx$



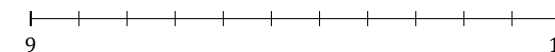
16.  $7\frac{3}{5} \approx$



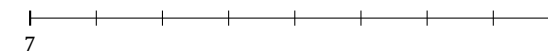
17.  $5\frac{3}{4} \approx$



18.  $9\frac{1}{11} \approx$



19.  $7\frac{5}{8} \approx$



20.  $3\frac{2}{12} \approx$

