

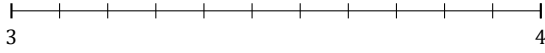
L'Arrondi de Nombres Mixtes (E)

Nom: _____


Date: _____

Arrondissez chaque nombre mixte au nombre entier le plus proche.
Arrondissez à l'entier supérieur en cas d'égalité.

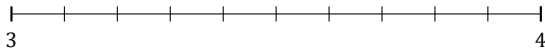
1. $3\frac{5}{11} \approx$



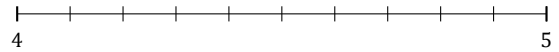
2. $3\frac{6}{7} \approx$



3. $3\frac{3}{10} \approx$



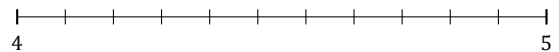
4. $4\frac{5}{10} \approx$



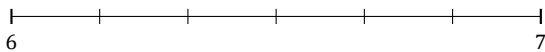
5. $7\frac{4}{7} \approx$



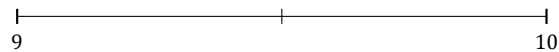
6. $4\frac{9}{11} \approx$



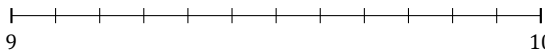
7. $6\frac{3}{6} \approx$



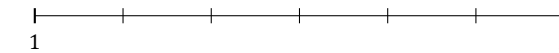
8. $9\frac{1}{2} \approx$



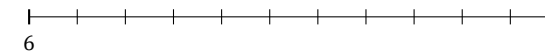
9. $9\frac{3}{12} \approx$



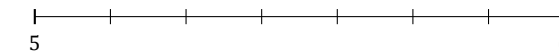
10. $1\frac{4}{6} \approx$



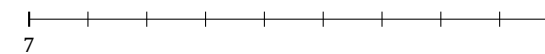
11. $6\frac{4}{11} \approx$



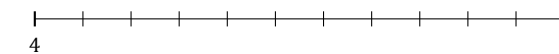
12. $5\frac{3}{7} \approx$



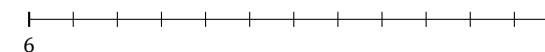
13. $7\frac{8}{9} \approx$




14. $4\frac{8}{11} \approx$



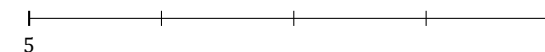
15. $6\frac{4}{12} \approx$



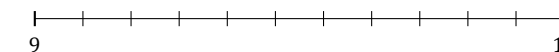
16. $7\frac{3}{5} \approx$



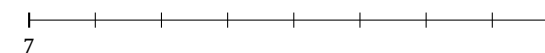
17. $5\frac{3}{4} \approx$



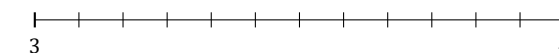
18. $9\frac{1}{11} \approx$



19. $7\frac{5}{8} \approx$



20. $3\frac{2}{12} \approx$



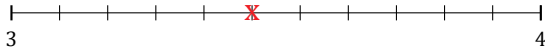
L'Arrondi de Nombres Mixtes (E) Réponses

Nom: _____


Date: _____

Arrondissez chaque nombre mixte au nombre entier le plus proche.
Arrondissez à l'entier supérieur en cas d'égalité.

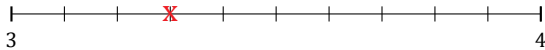
1. $3\frac{5}{11} \simeq 3$



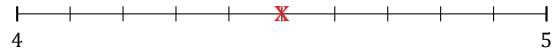
2. $3\frac{6}{7} \simeq 4$



3. $3\frac{3}{10} \simeq 3$



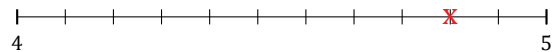
4. $4\frac{5}{10} \simeq 5$



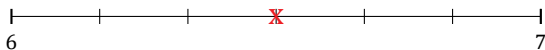
5. $7\frac{4}{7} \simeq 8$



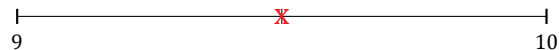
6. $4\frac{9}{11} \simeq 5$



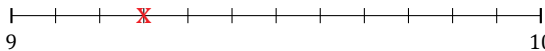
7. $6\frac{3}{6} \simeq 7$



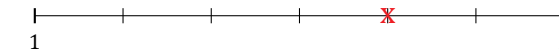
8. $9\frac{1}{2} \simeq 10$



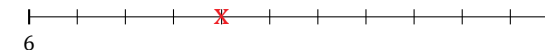
9. $9\frac{3}{12} \simeq 9$



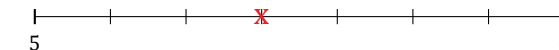
10. $1\frac{4}{6} \simeq 2$



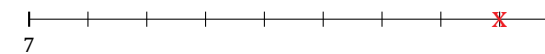
11. $6\frac{4}{11} \simeq 6$



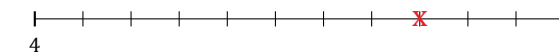
12. $5\frac{3}{7} \simeq 5$



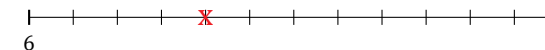
13. $7\frac{8}{9} \simeq 8$




14. $4\frac{8}{11} \simeq 5$



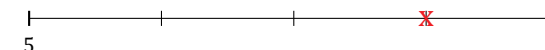
15. $6\frac{4}{12} \simeq 6$



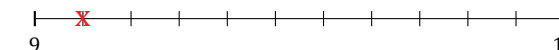
16. $7\frac{3}{5} \simeq 8$



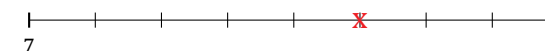
17. $5\frac{3}{4} \simeq 6$



18. $9\frac{1}{11} \simeq 9$



19. $7\frac{5}{8} \simeq 8$



20. $3\frac{2}{12} \simeq 3$

