

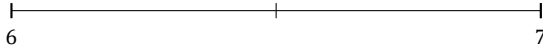
L'Arrondi de Nombres Mixtes (D)

Nom: _____

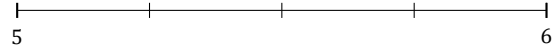
Date: _____

Arrondissez chaque nombre mixte au nombre entier le plus proche.
Arrondissez à l'entier supérieur en cas d'égalité.

1. $6\frac{1}{2} \approx$



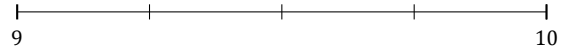
2. $5\frac{3}{4} \approx$



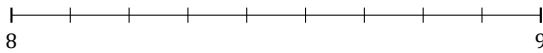
3. $9\frac{2}{5} \approx$



4. $9\frac{2}{4} \approx$




5. $8\frac{2}{9} \approx$



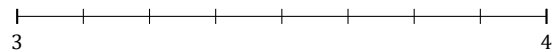
6. $2\frac{3}{5} \approx$



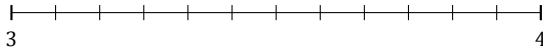
7. $9\frac{1}{5} \approx$



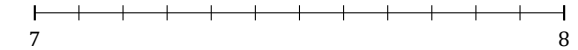
8. $3\frac{7}{8} \approx$



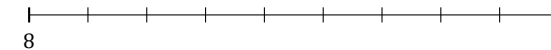
9. $3\frac{2}{12} \approx$



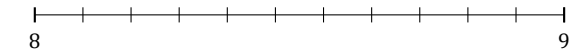
10. $7\frac{5}{12} \approx$



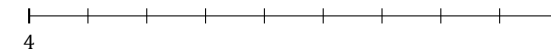
11. $8\frac{8}{9} \approx$



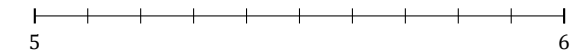
12. $8\frac{2}{11} \approx$



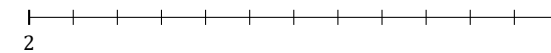
13. $4\frac{4}{9} \approx$



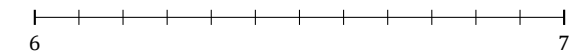
14. $5\frac{3}{10} \approx$




15. $2\frac{1}{12} \approx$



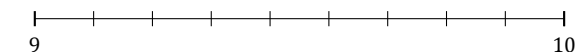
16. $6\frac{6}{12} \approx$



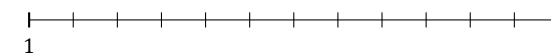
17. $1\frac{4}{5} \approx$



18. $9\frac{6}{9} \approx$



19. $1\frac{4}{12} \approx$



20. $1\frac{5}{8} \approx$

