

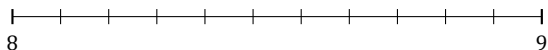
L'Arrondi de Nombres Mixtes (C)

Nom: _____

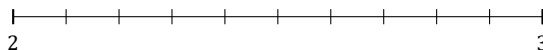
Date: _____

Arrondissez chaque nombre mixte au nombre entier le plus proche.
Arrondissez à l'entier supérieur en cas d'égalité.

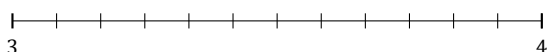
1. $8\frac{4}{11} \approx$



2. $2\frac{2}{10} \approx$



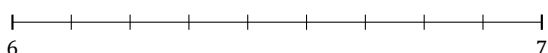
3. $3\frac{1}{12} \approx$



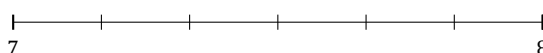
4. $3\frac{4}{5} \approx$



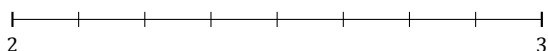
5. $6\frac{6}{9} \approx$



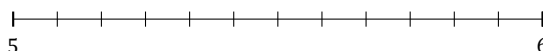
6. $7\frac{2}{6} \approx$




7. $2\frac{4}{8} \approx$



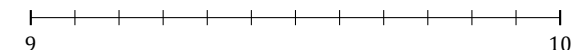
8. $5\frac{6}{12} \approx$



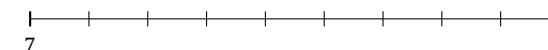
9. $4\frac{2}{3} \approx$




10. $9\frac{3}{12} \approx$



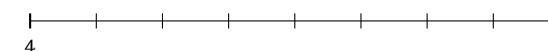
11. $7\frac{7}{9} \approx$



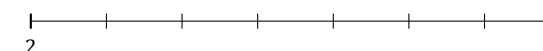
12. $5\frac{3}{5} \approx$



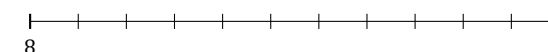
13. $4\frac{2}{8} \approx$



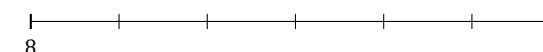
14. $2\frac{2}{7} \approx$



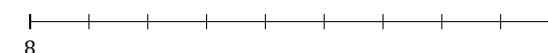
15. $8\frac{8}{11} \approx$



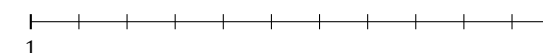
16. $8\frac{1}{6} \approx$



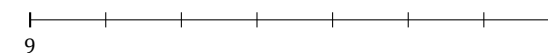
17. $8\frac{4}{9} \approx$



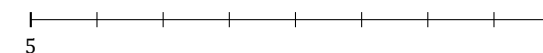
18. $1\frac{1}{11} \approx$



19. $9\frac{4}{7} \approx$



20. $5\frac{3}{8} \approx$



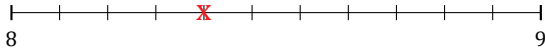
L'Arrondi de Nombres Mixtes (C) Réponses

Nom: _____

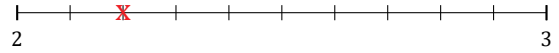
Date: _____

Arrondissez chaque nombre mixte au nombre entier le plus proche.
Arrondissez à l'entier supérieur en cas d'égalité.

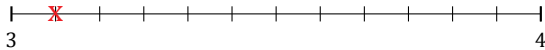
1. $8\frac{4}{11} \simeq 8$



2. $2\frac{2}{10} \simeq 2$




3. $3\frac{1}{12} \simeq 3$



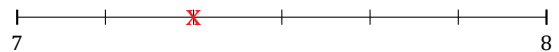
4. $3\frac{4}{5} \simeq 4$



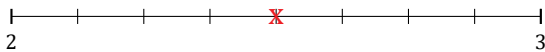
5. $6\frac{6}{9} \simeq 7$




6. $7\frac{2}{6} \simeq 7$




7. $2\frac{4}{8} \simeq 3$



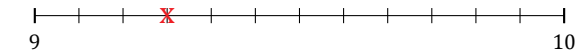
8. $5\frac{6}{12} \simeq 6$



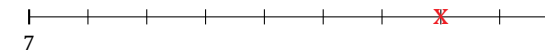
9. $4\frac{2}{3} \simeq 5$




10. $9\frac{3}{12} \simeq 9$



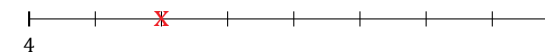
11. $7\frac{7}{9} \simeq 8$



12. $5\frac{3}{5} \simeq 6$



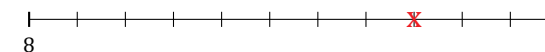
13. $4\frac{2}{8} \simeq 4$



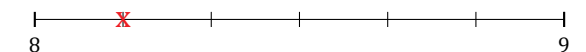
14. $2\frac{2}{7} \simeq 2$



15. $8\frac{8}{11} \simeq 9$



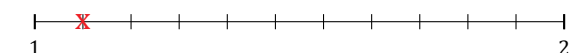
16. $8\frac{1}{6} \simeq 8$



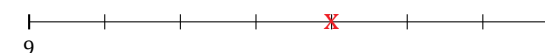
17. $8\frac{4}{9} \simeq 8$



18. $1\frac{1}{11} \simeq 1$



19. $9\frac{4}{7} \simeq 10$



20. $5\frac{3}{8} \simeq 5$

