

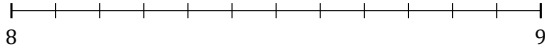
# L'Arrondi de Nombres Mixtes (B)

Nom: \_\_\_\_\_

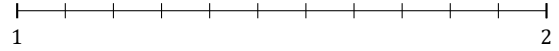
Date: \_\_\_\_\_

Arrondissez chaque nombre mixte au nombre entier le plus proche.  
Arrondissez à l'entier supérieur en cas d'égalité.

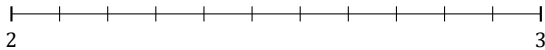
1.  $8\frac{8}{12} \approx$



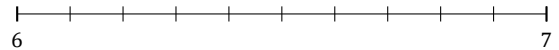
2.  $1\frac{3}{11} \approx$



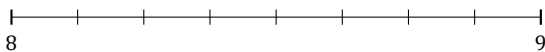
3.  $2\frac{8}{11} \approx$



4.  $6\frac{8}{10} \approx$



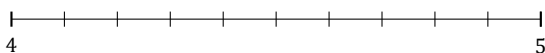
5.  $8\frac{7}{8} \approx$



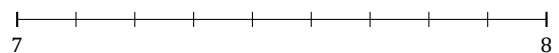
6.  $1\frac{6}{9} \approx$



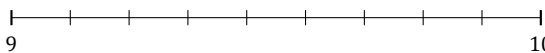
7.  $4\frac{4}{10} \approx$



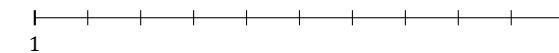
8.  $7\frac{4}{9} \approx$



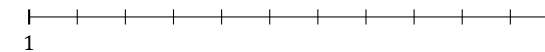
9.  $9\frac{1}{9} \approx$



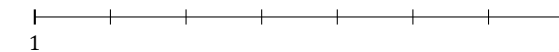
10.  $1\frac{1}{10} \approx$



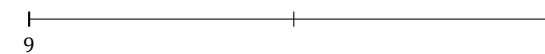
11.  $1\frac{10}{11} \approx$



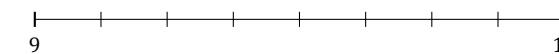
12.  $1\frac{3}{7} \approx$



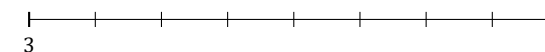
13.  $9\frac{1}{2} \approx$



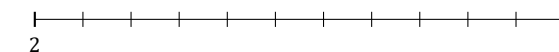
14.  $9\frac{5}{8} \approx$



15.  $3\frac{6}{8} \approx$



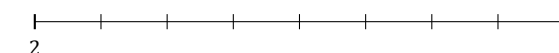
16.  $2\frac{6}{11} \approx$



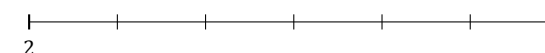
17.  $3\frac{2}{3} \approx$



18.  $2\frac{2}{8} \approx$



19.  $2\frac{1}{6} \approx$



20.  $5\frac{1}{4} \approx$

