

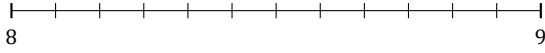
L'Arrondi de Nombres Mixtes (B)

Nom: _____

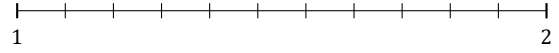
Date: _____

Arrondissez chaque nombre mixte au nombre entier le plus proche.
Arrondissez à l'entier supérieur en cas d'égalité.

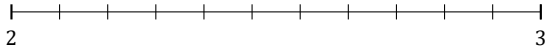
1. $8\frac{8}{12} \approx$



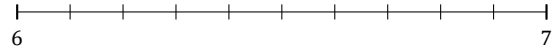
2. $1\frac{3}{11} \approx$



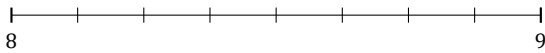
3. $2\frac{8}{11} \approx$



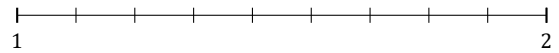
4. $6\frac{8}{10} \approx$



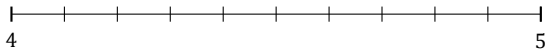
5. $8\frac{7}{8} \approx$




6. $1\frac{6}{9} \approx$



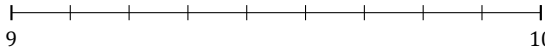
7. $4\frac{4}{10} \approx$



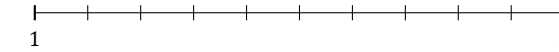
8. $7\frac{4}{9} \approx$



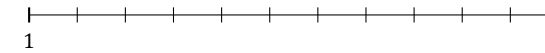
9. $9\frac{1}{9} \approx$



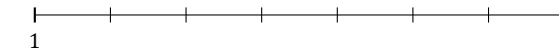
10. $1\frac{1}{10} \approx$



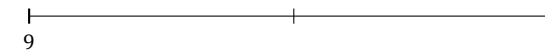
11. $1\frac{10}{11} \approx$



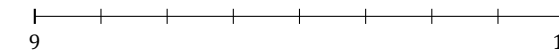
12. $1\frac{3}{7} \approx$



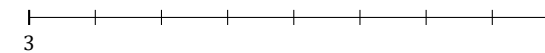
13. $9\frac{1}{2} \approx$



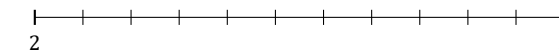
14. $9\frac{5}{8} \approx$




15. $3\frac{6}{8} \approx$



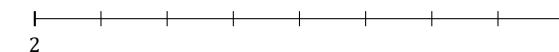
16. $2\frac{6}{11} \approx$



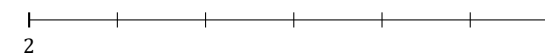
17. $3\frac{2}{3} \approx$



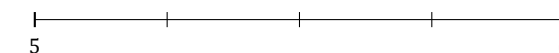
18. $2\frac{2}{8} \approx$



19. $2\frac{1}{6} \approx$



20. $5\frac{1}{4} \approx$



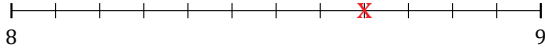
L'Arrondi de Nombres Mixtes (B) Réponses

Nom: _____

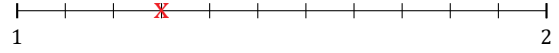
Date: _____

Arrondissez chaque nombre mixte au nombre entier le plus proche.
Arrondissez à l'entier supérieur en cas d'égalité.

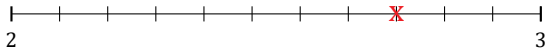
1. $8\frac{8}{12} \simeq 9$



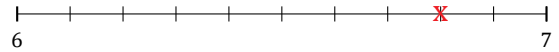
2. $1\frac{3}{11} \simeq 1$



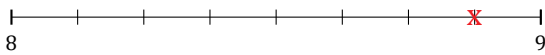
3. $2\frac{8}{11} \simeq 3$



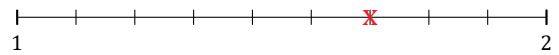
4. $6\frac{8}{10} \simeq 7$



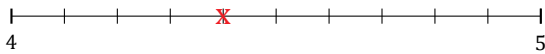
5. $8\frac{7}{8} \simeq 9$



6. $1\frac{6}{9} \simeq 2$



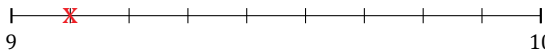
7. $4\frac{4}{10} \simeq 4$



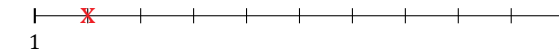
8. $7\frac{4}{9} \simeq 7$



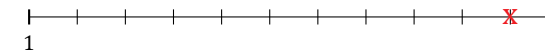
9. $9\frac{1}{9} \simeq 9$



10. $1\frac{1}{10} \simeq 1$



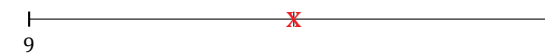
11. $1\frac{10}{11} \simeq 2$



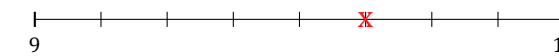
12. $1\frac{3}{7} \simeq 1$



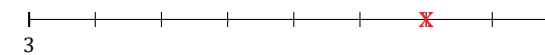
13. $9\frac{1}{2} \simeq 10$



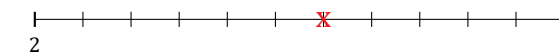
14. $9\frac{5}{8} \simeq 10$




15. $3\frac{6}{8} \simeq 4$



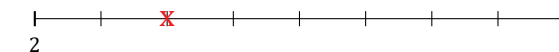
16. $2\frac{6}{11} \simeq 3$



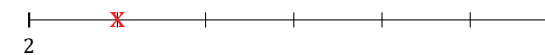
17. $3\frac{2}{3} \simeq 4$



18. $2\frac{2}{8} \simeq 2$



19. $2\frac{1}{6} \simeq 2$



20. $5\frac{1}{4} \simeq 5$

