

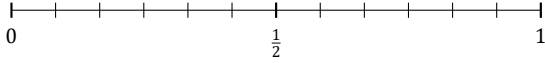
# L'Arrondi de Fractions (J)

Nom: \_\_\_\_\_

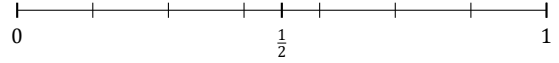
Date: \_\_\_\_\_

Arrondissez chaque fraction à la plus proche moitié. Arrondissez à l'entier supérieur en cas d'égalité.

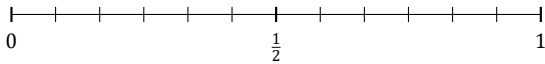
1.  $\frac{1}{12} \approx$



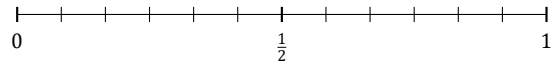
2.  $\frac{3}{7} \approx$



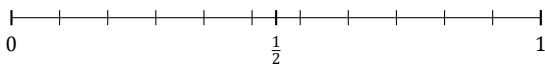
3.  $\frac{6}{12} \approx$



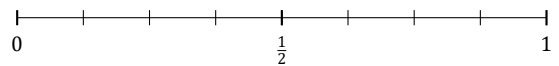
4.  $\frac{9}{12} \approx$



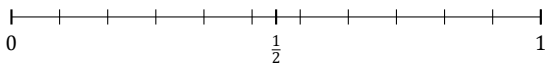
5.  $\frac{10}{11} \approx$



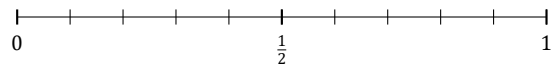
6.  $\frac{7}{8} \approx$



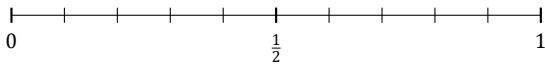
7.  $\frac{9}{11} \approx$



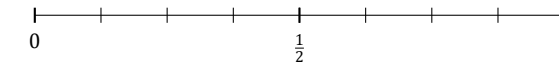
8.  $\frac{3}{10} \approx$



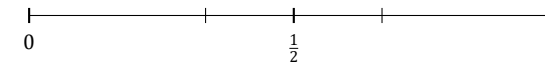
9.  $\frac{9}{10} \approx$



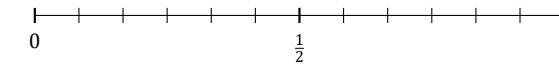
10.  $\frac{1}{8} \approx$



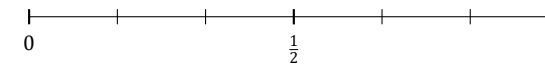
11.  $\frac{2}{3} \approx$



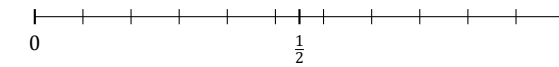
12.  $\frac{4}{12} \approx$



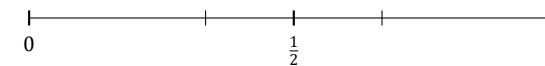
13.  $\frac{3}{6} \approx$



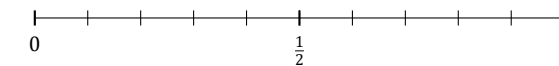
14.  $\frac{8}{11} \approx$



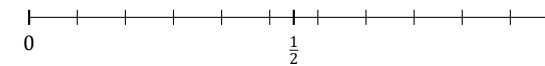
15.  $\frac{1}{3} \approx$



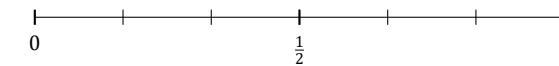
16.  $\frac{2}{10} \approx$



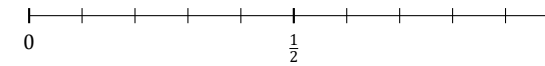
17.  $\frac{5}{11} \approx$



18.  $\frac{4}{6} \approx$



19.  $\frac{5}{10} \approx$



20.  $\frac{3}{11} \approx$

