

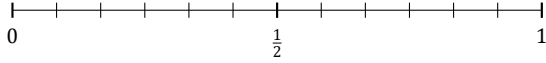
L'Arrondi de Fractions (G)

Nom: _____

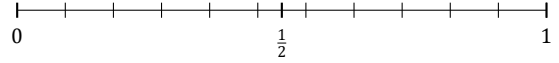
Date: _____

Arrondissez chaque fraction à la plus proche moitié. Arrondissez à l'entier supérieur en cas d'égalité.

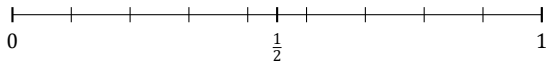
1. $\frac{7}{12} \approx$



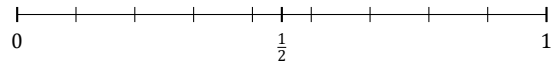
2. $\frac{4}{11} \approx$



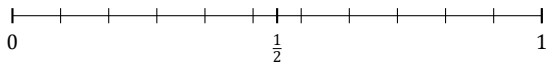
3. $\frac{5}{9} \approx$



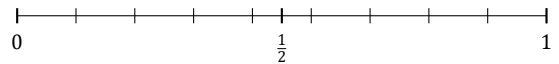
4. $\frac{3}{9} \approx$



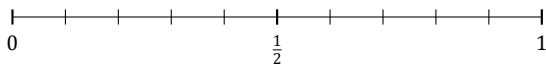
5. $\frac{9}{11} \approx$



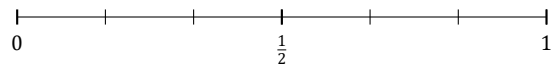
6. $\frac{2}{9} \approx$



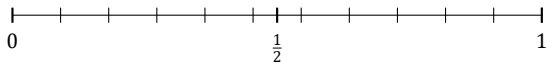
7. $\frac{7}{10} \approx$



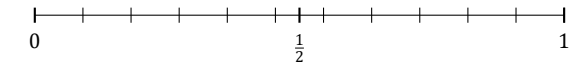
8. $\frac{4}{6} \approx$



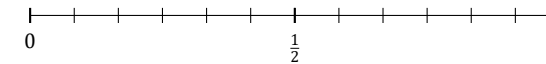
9. $\frac{8}{11} \approx$



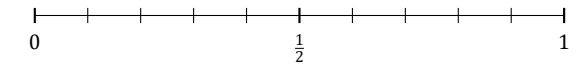
10. $\frac{1}{11} \approx$



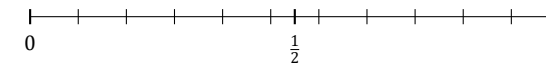
11. $\frac{10}{12} \approx$



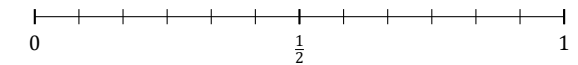
12. $\frac{9}{10} \approx$



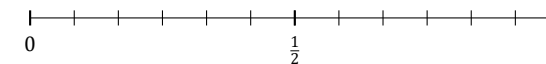
13. $\frac{10}{11} \approx$



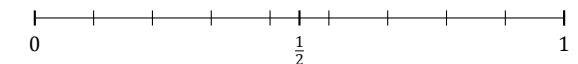
14. $\frac{4}{12} \approx$



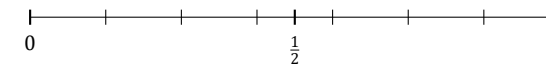
15. $\frac{9}{12} \approx$



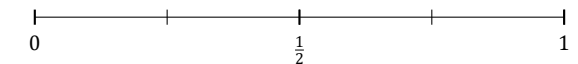
16. $\frac{4}{9} \approx$



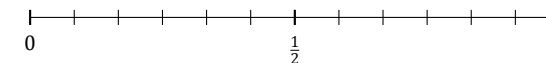
17. $\frac{3}{7} \approx$



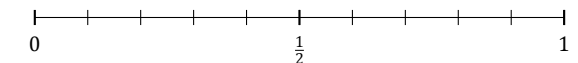
18. $\frac{1}{4} \approx$



19. $\frac{6}{12} \approx$



20. $\frac{2}{10} \approx$



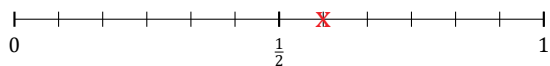
L'Arrondi de Fractions (G) Réponses

Nom: _____

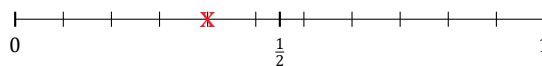
Date: _____

Arrondissez chaque fraction à la plus proche moitié. Arrondissez à l'entier supérieur en cas d'égalité.

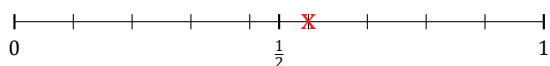
1. $\frac{7}{12} \simeq \frac{1}{2}$



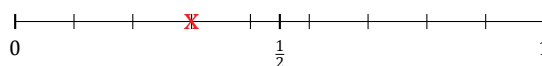
2. $\frac{4}{11} \simeq \frac{1}{2}$



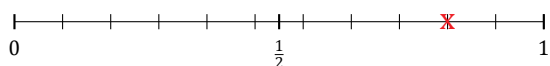
3. $\frac{5}{9} \simeq \frac{1}{2}$



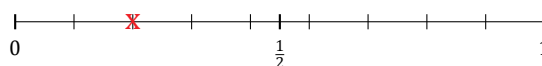
4. $\frac{3}{9} \simeq \frac{1}{2}$



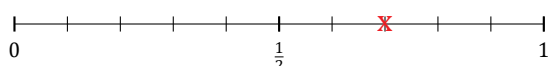
5. $\frac{9}{11} \simeq 1$



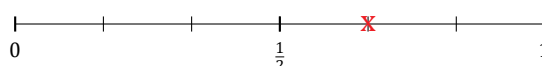
6. $\frac{2}{9} \simeq 0$



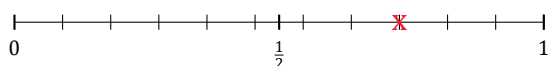
7. $\frac{7}{10} \simeq \frac{1}{2}$



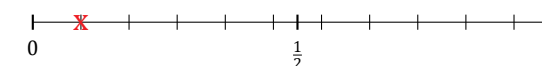
8. $\frac{4}{6} \simeq \frac{1}{2}$



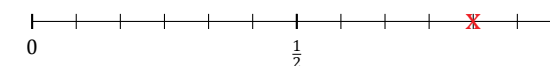
9. $\frac{8}{11} \simeq \frac{1}{2}$



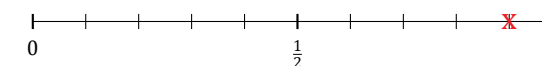
10. $\frac{1}{11} \simeq 0$



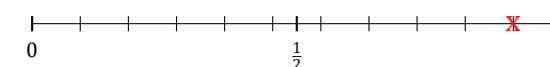
11. $\frac{10}{12} \simeq 1$



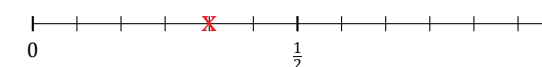
12. $\frac{9}{10} \simeq 1$



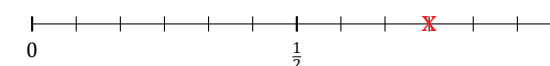
13. $\frac{10}{11} \simeq 1$



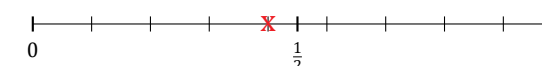
14. $\frac{4}{12} \simeq \frac{1}{2}$



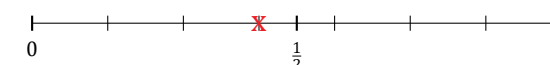
15. $\frac{9}{12} \simeq 1$



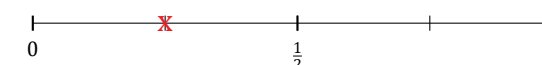
16. $\frac{4}{9} \simeq \frac{1}{2}$



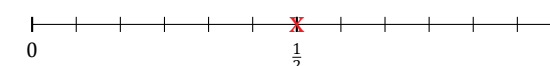
17. $\frac{3}{7} \simeq \frac{1}{2}$



18. $\frac{1}{4} \simeq \frac{1}{2}$



19. $\frac{6}{12} \simeq \frac{1}{2}$



20. $\frac{2}{10} \simeq 0$

