

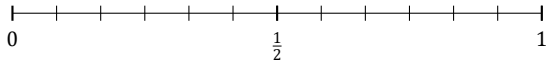
# L'Arrondi de Fractions (D)

Nom: \_\_\_\_\_

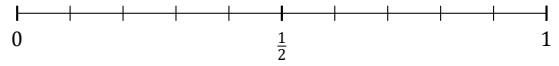
Date: \_\_\_\_\_

Arrondissez chaque fraction à la plus proche moitié. Arrondissez à l'entier supérieur en cas d'égalité.

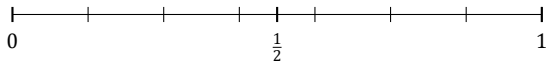
1.  $\frac{11}{12} \approx$



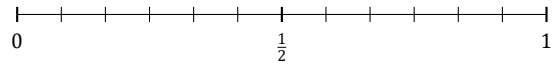
2.  $\frac{3}{10} \approx$



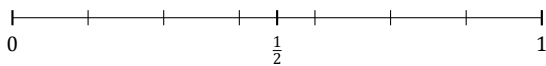
3.  $\frac{3}{7} \approx$



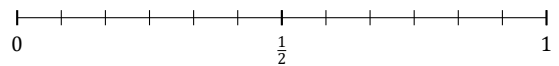
4.  $\frac{6}{12} \approx$



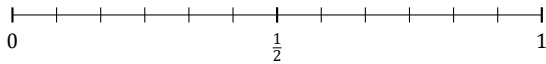
5.  $\frac{2}{7} \approx$



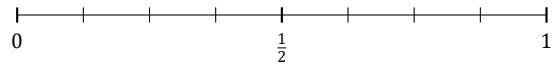
6.  $\frac{9}{12} \approx$



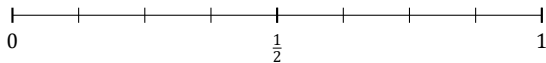
7.  $\frac{2}{12} \approx$



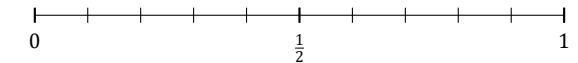
8.  $\frac{6}{8} \approx$



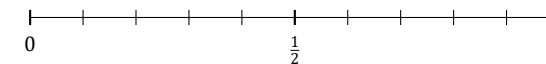
9.  $\frac{3}{8} \approx$



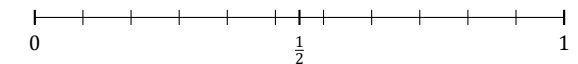
10.  $\frac{1}{10} \approx$



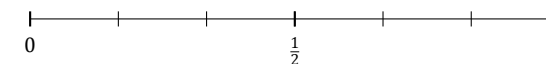
11.  $\frac{9}{10} \approx$



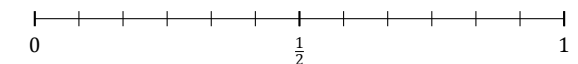
12.  $\frac{8}{11} \approx$



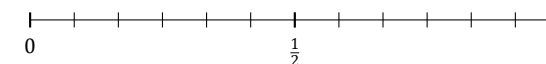
13.  $\frac{5}{6} \approx$



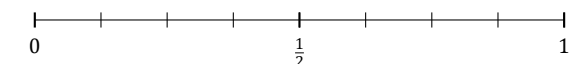
14.  $\frac{3}{12} \approx$



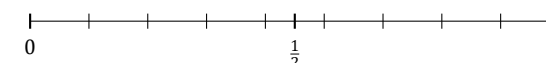
15.  $\frac{10}{12} \approx$



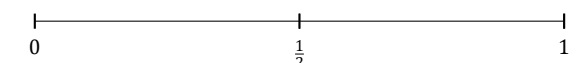
16.  $\frac{2}{8} \approx$



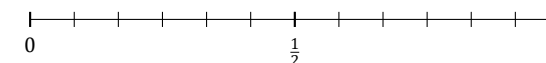
17.  $\frac{7}{9} \approx$



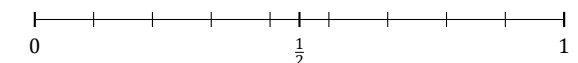
18.  $\frac{1}{2} \approx$



19.  $\frac{1}{12} \approx$



20.  $\frac{3}{9} \approx$



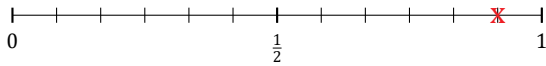
# L'Arrondi de Fractions (D) Réponses

Nom: \_\_\_\_\_

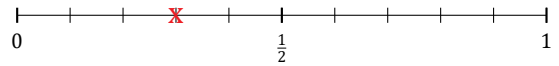
Date: \_\_\_\_\_

Arrondissez chaque fraction à la plus proche moitié. Arrondissez à l'entier supérieur en cas d'égalité.

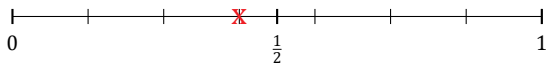
1.  $\frac{11}{12} \simeq 1$



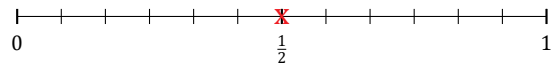
2.  $\frac{3}{10} \simeq \frac{1}{2}$



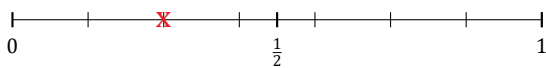
3.  $\frac{3}{7} \simeq \frac{1}{2}$



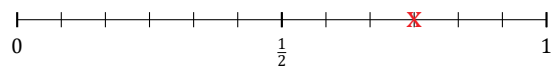
4.  $\frac{6}{12} \simeq \frac{1}{2}$



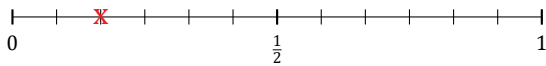
5.  $\frac{2}{7} \simeq \frac{1}{2}$



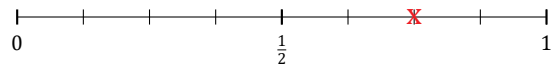
6.  $\frac{9}{12} \simeq 1$



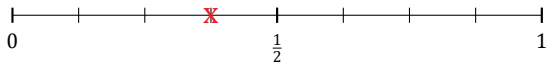
7.  $\frac{2}{12} \simeq 0$



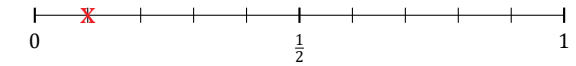
8.  $\frac{6}{8} \simeq 1$



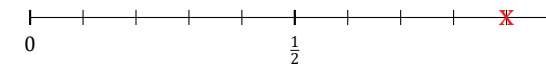
9.  $\frac{3}{8} \simeq \frac{1}{2}$



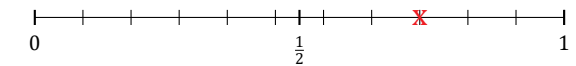
10.  $\frac{1}{10} \simeq 0$



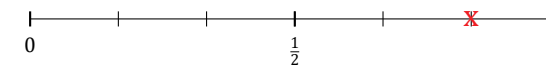
11.  $\frac{9}{10} \simeq 1$



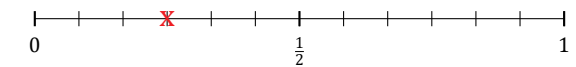
12.  $\frac{8}{11} \simeq \frac{1}{2}$



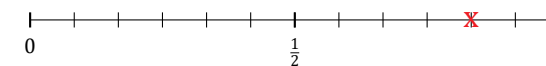
13.  $\frac{5}{6} \simeq 1$



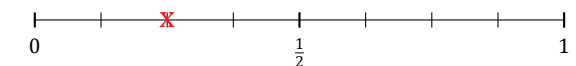
14.  $\frac{3}{12} \simeq \frac{1}{2}$



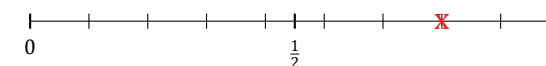
15.  $\frac{10}{12} \simeq 1$



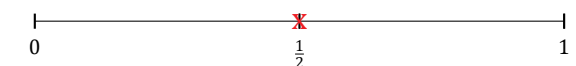
16.  $\frac{2}{8} \simeq \frac{1}{2}$



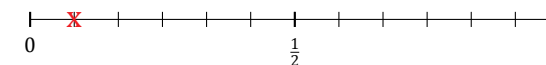
17.  $\frac{7}{9} \simeq 1$



18.  $\frac{1}{2} \simeq \frac{1}{2}$



19.  $\frac{1}{12} \simeq 0$



20.  $\frac{3}{9} \simeq \frac{1}{2}$

