

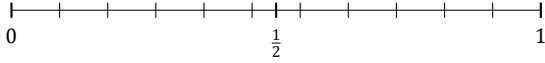
# L'Arrondi de Fractions (C)

Nom: \_\_\_\_\_

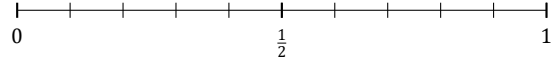
Date: \_\_\_\_\_

Arrondissez chaque fraction à la plus proche moitié. Arrondissez à l'entier supérieur en cas d'égalité.

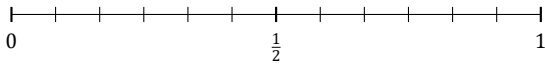
1.  $\frac{7}{11} \approx$



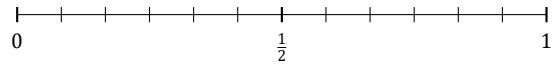
2.  $\frac{2}{10} \approx$



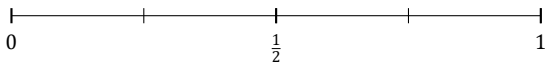
3.  $\frac{7}{12} \approx$



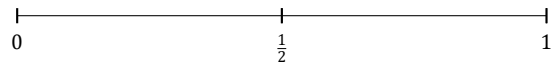
4.  $\frac{5}{12} \approx$



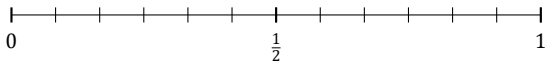
5.  $\frac{1}{4} \approx$



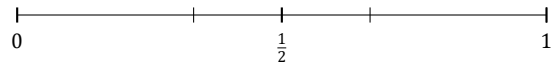
6.  $\frac{1}{2} \approx$



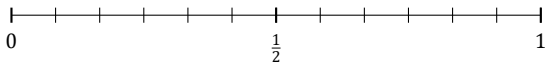
7.  $\frac{4}{12} \approx$



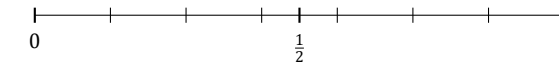
8.  $\frac{2}{3} \approx$



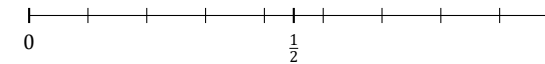
9.  $\frac{11}{12} \approx$



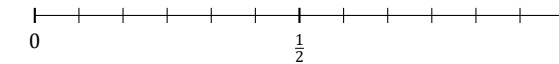
10.  $\frac{1}{7} \approx$



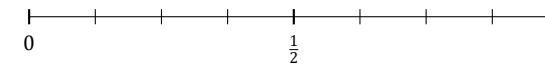
11.  $\frac{8}{9} \approx$



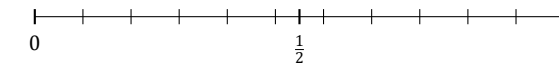
12.  $\frac{6}{12} \approx$



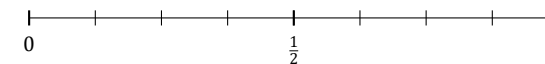
13.  $\frac{1}{8} \approx$



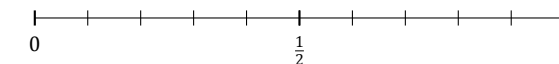
14.  $\frac{8}{11} \approx$



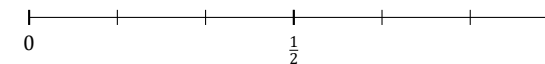
15.  $\frac{7}{8} \approx$



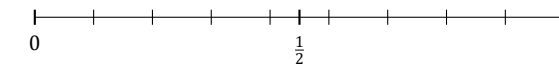
16.  $\frac{6}{10} \approx$



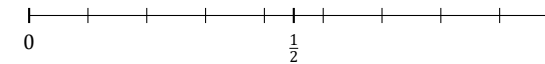
17.  $\frac{5}{6} \approx$



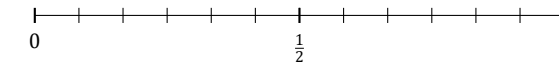
18.  $\frac{1}{9} \approx$



19.  $\frac{2}{9} \approx$



20.  $\frac{1}{12} \approx$



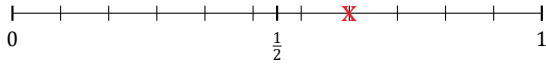
# L'Arrondi de Fractions (C) Réponses

Nom: \_\_\_\_\_

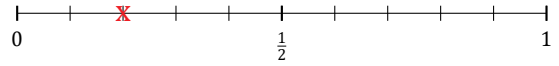
Date: \_\_\_\_\_

Arrondissez chaque fraction à la plus proche moitié. Arrondissez à l'entier supérieur en cas d'égalité.

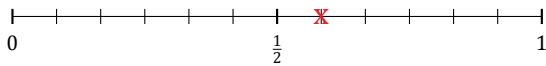
1.  $\frac{7}{11} \simeq \frac{1}{2}$



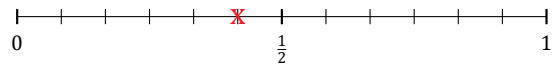
2.  $\frac{2}{10} \simeq 0$



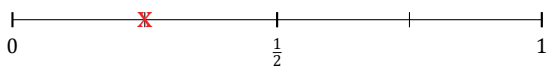
3.  $\frac{7}{12} \simeq \frac{1}{2}$



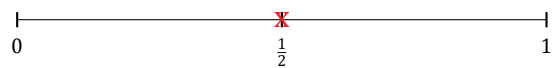
4.  $\frac{5}{12} \simeq \frac{1}{2}$



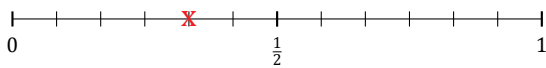
5.  $\frac{1}{4} \simeq \frac{1}{2}$



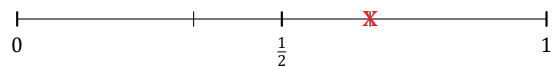
6.  $\frac{1}{2} \simeq \frac{1}{2}$



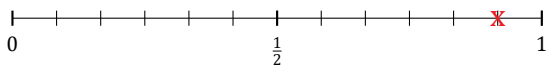
7.  $\frac{4}{12} \simeq \frac{1}{2}$



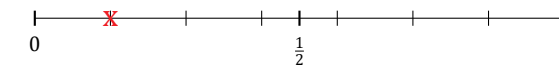
8.  $\frac{2}{3} \simeq \frac{1}{2}$



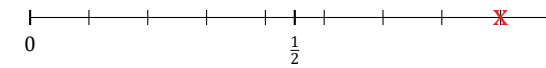
9.  $\frac{11}{12} \simeq 1$



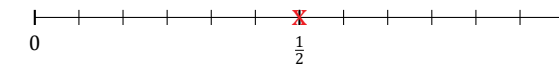
10.  $\frac{1}{7} \simeq 0$



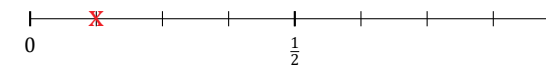
11.  $\frac{8}{9} \simeq 1$



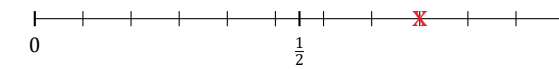
12.  $\frac{6}{12} \simeq \frac{1}{2}$



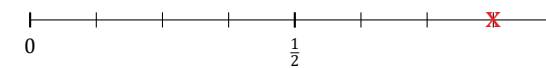
13.  $\frac{1}{8} \simeq 0$



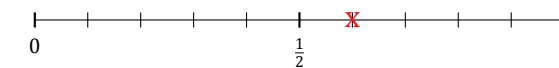
14.  $\frac{8}{11} \simeq \frac{1}{2}$



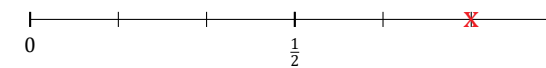
15.  $\frac{7}{8} \simeq 1$



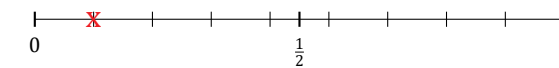
16.  $\frac{6}{10} \simeq \frac{1}{2}$



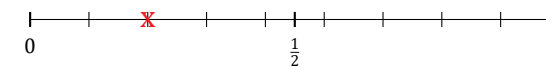
17.  $\frac{5}{6} \simeq 1$



18.  $\frac{1}{9} \simeq 0$



19.  $\frac{2}{9} \simeq 0$



20.  $\frac{1}{12} \simeq 0$

