

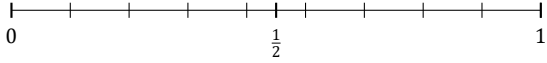
L'Arrondi de Fractions (B)

Nom: _____

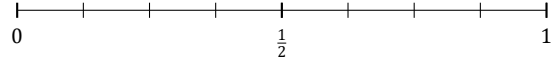
Date: _____

Arrondissez chaque fraction à la plus proche moitié. Arrondissez à l'entier supérieur en cas d'égalité.

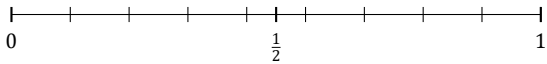
1. $\frac{3}{9} \approx$



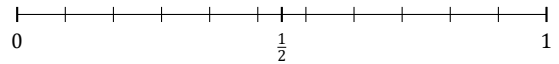
2. $\frac{6}{8} \approx$



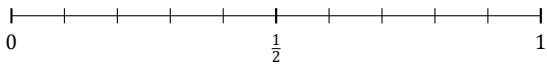
3. $\frac{2}{9} \approx$



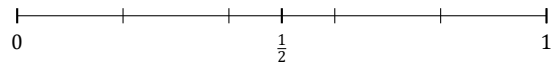
4. $\frac{10}{11} \approx$



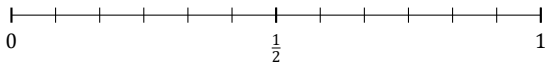
5. $\frac{3}{10} \approx$



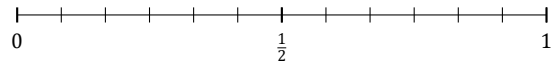
6. $\frac{3}{5} \approx$



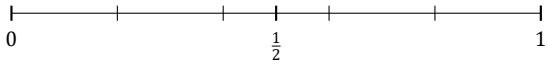
7. $\frac{5}{12} \approx$



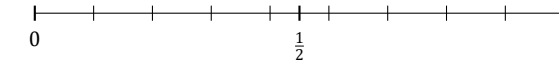
8. $\frac{7}{12} \approx$



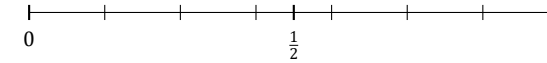
9. $\frac{4}{5} \approx$



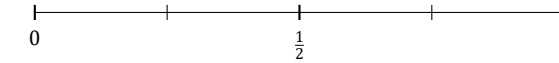
10. $\frac{7}{9} \approx$



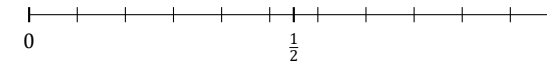
11. $\frac{1}{7} \approx$



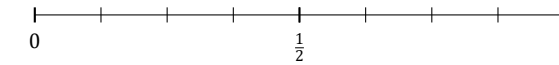
12. $\frac{1}{4} \approx$



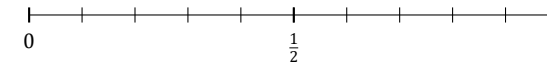
13. $\frac{3}{11} \approx$



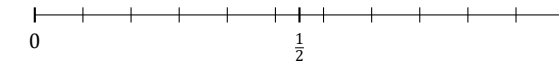
14. $\frac{5}{8} \approx$



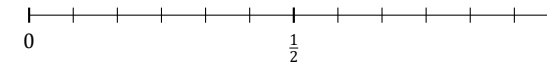
15. $\frac{7}{10} \approx$



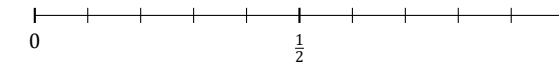
16. $\frac{8}{11} \approx$



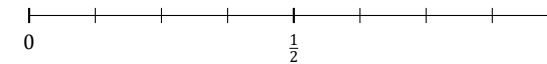
17. $\frac{9}{12} \approx$



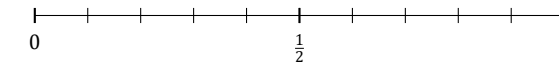
18. $\frac{5}{10} \approx$



19. $\frac{3}{8} \approx$



20. $\frac{9}{10} \approx$



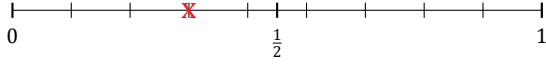
L'Arrondi de Fractions (B) Réponses

Nom: _____

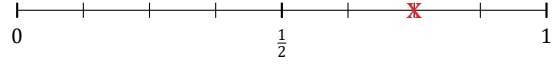
Date: _____

Arrondissez chaque fraction à la plus proche moitié. Arrondissez à l'entier supérieur en cas d'égalité.

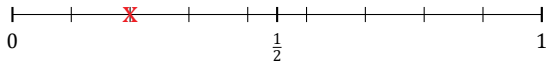
1. $\frac{3}{9} \simeq \frac{1}{2}$



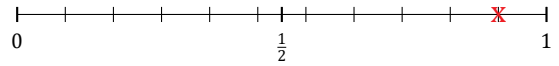
2. $\frac{6}{8} \simeq 1$



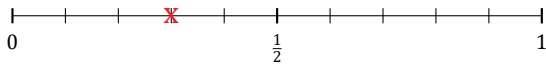
3. $\frac{2}{9} \simeq 0$



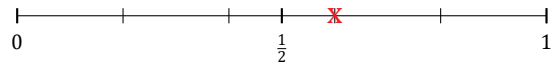
4. $\frac{10}{11} \simeq 1$



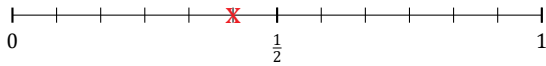
5. $\frac{3}{10} \simeq \frac{1}{2}$



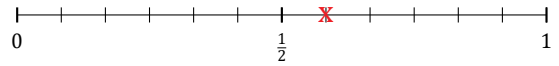
6. $\frac{3}{5} \simeq \frac{1}{2}$



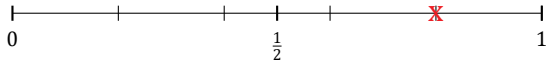
7. $\frac{5}{12} \simeq \frac{1}{2}$



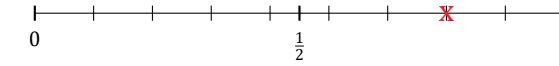
8. $\frac{7}{12} \simeq \frac{1}{2}$



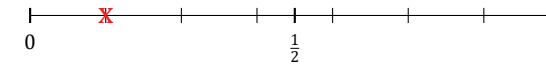
9. $\frac{4}{5} \simeq 1$



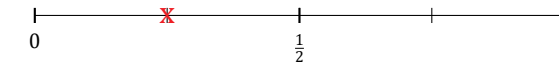
10. $\frac{7}{9} \simeq 1$



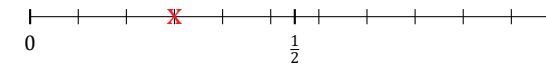
11. $\frac{1}{7} \simeq 0$



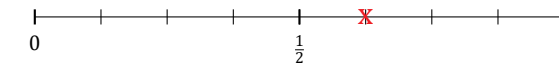
12. $\frac{1}{4} \simeq \frac{1}{2}$



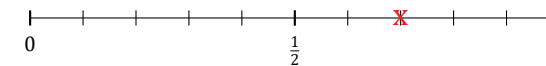
13. $\frac{3}{11} \simeq \frac{1}{2}$



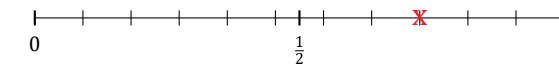
14. $\frac{5}{8} \simeq \frac{1}{2}$



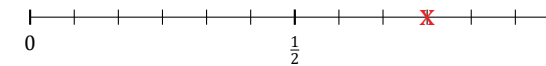
15. $\frac{7}{10} \simeq \frac{1}{2}$



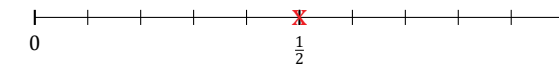
16. $\frac{8}{11} \simeq \frac{1}{2}$



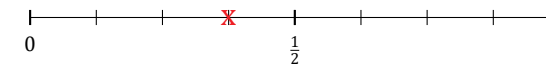
17. $\frac{9}{12} \simeq 1$



18. $\frac{5}{10} \simeq \frac{1}{2}$



19. $\frac{3}{8} \simeq \frac{1}{2}$



20. $\frac{9}{10} \simeq 1$

