

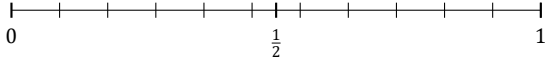
L'Arrondi de Fractions (A)

Nom: _____

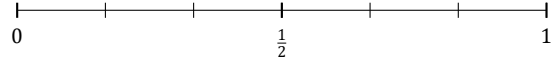
Date: _____

Arrondissez chaque fraction à la plus proche moitié. Arrondissez à l'entier supérieur en cas d'égalité.

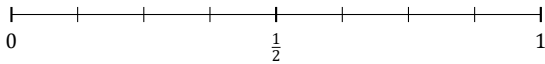
1. $\frac{1}{11} \approx$



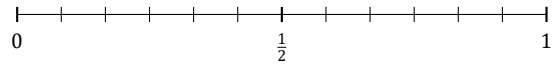
2. $\frac{1}{6} \approx$



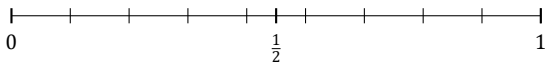
3. $\frac{6}{8} \approx$



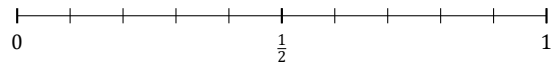
4. $\frac{8}{12} \approx$



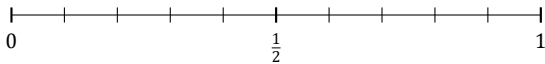
5. $\frac{6}{9} \approx$



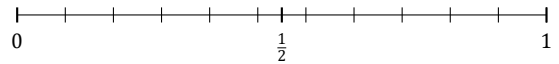
6. $\frac{2}{10} \approx$



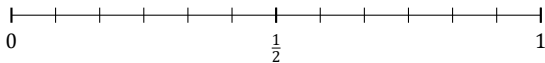
7. $\frac{7}{10} \approx$



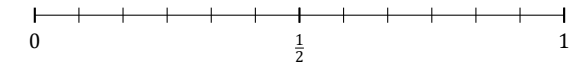
8. $\frac{4}{11} \approx$



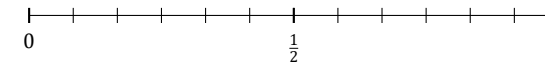
9. $\frac{1}{12} \approx$



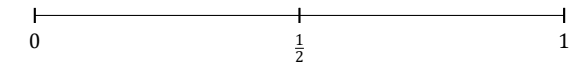
10. $\frac{6}{12} \approx$



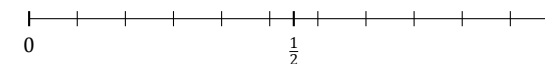
11. $\frac{7}{12} \approx$



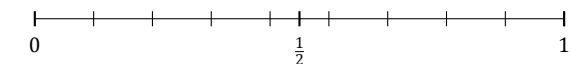
12. $\frac{1}{2} \approx$



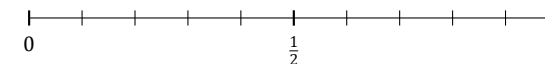
13. $\frac{9}{11} \approx$



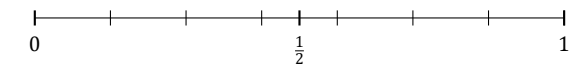
14. $\frac{8}{9} \approx$



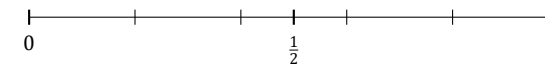
15. $\frac{3}{10} \approx$



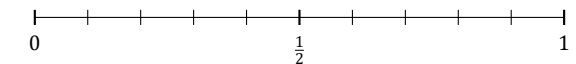
16. $\frac{1}{7} \approx$



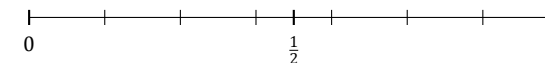
17. $\frac{4}{5} \approx$



18. $\frac{5}{10} \approx$



19. $\frac{4}{7} \approx$



20. $\frac{2}{3} \approx$

