

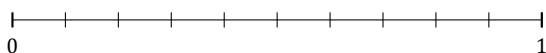
L'Arrondi de Fractions (J)

Nom: _____

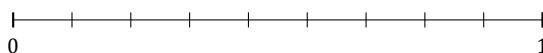
Date: _____

Arrondissez chaque fraction au nombre entier le plus proche. Arrondissez à l'entier supérieur en cas d'égalité.

1. $\frac{2}{10} \approx$



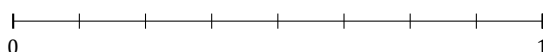
2. $\frac{6}{9} \approx$




3. $\frac{3}{8} \approx$



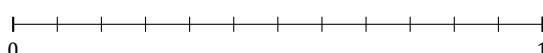
4. $\frac{4}{8} \approx$



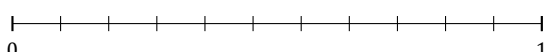
5. $\frac{2}{5} \approx$



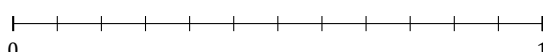
6. $\frac{4}{12} \approx$



7. $\frac{6}{11} \approx$



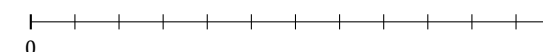
8. $\frac{10}{12} \approx$



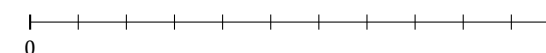
9. $\frac{3}{6} \approx$



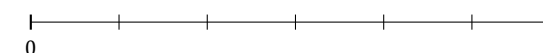
10. $\frac{8}{12} \approx$



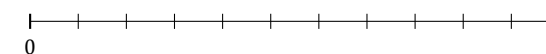
11. $\frac{10}{11} \approx$



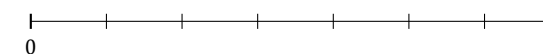
12. $\frac{4}{6} \approx$



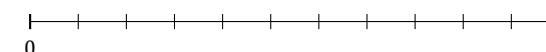
13. $\frac{3}{11} \approx$



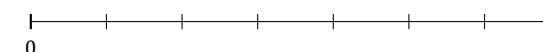
14. $\frac{4}{7} \approx$



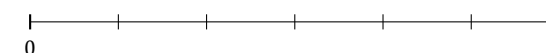
15. $\frac{1}{11} \approx$



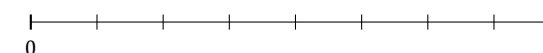
16. $\frac{2}{7} \approx$



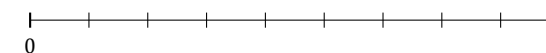
17. $\frac{1}{6} \approx$



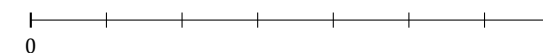
18. $\frac{5}{8} \approx$



19. $\frac{2}{9} \approx$



20. $\frac{3}{7} \approx$



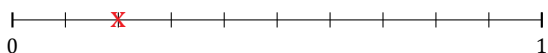
L'Arrondi de Fractions (J) Réponses

Nom: _____

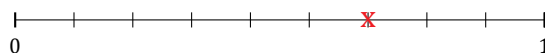
Date: _____

Arrondissez chaque fraction au nombre entier le plus proche. Arrondissez à l'entier supérieur en cas d'égalité.

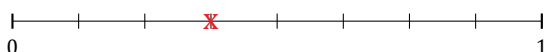
1. $\frac{2}{10} \simeq 0$



2. $\frac{6}{9} \simeq 1$



3. $\frac{3}{8} \simeq 0$



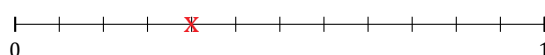
4. $\frac{4}{8} \simeq 1$



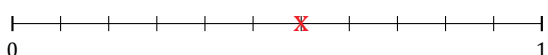
5. $\frac{2}{5} \simeq 0$



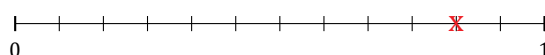
6. $\frac{4}{12} \simeq 0$



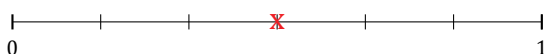
7. $\frac{6}{11} \simeq 1$



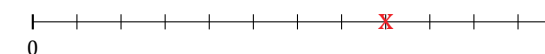
8. $\frac{10}{12} \simeq 1$



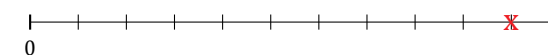
9. $\frac{3}{6} \simeq 1$



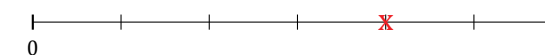
10. $\frac{8}{12} \simeq 1$



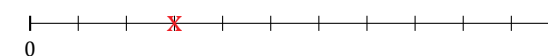
11. $\frac{10}{11} \simeq 1$



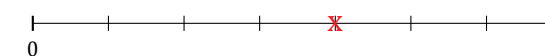
12. $\frac{4}{6} \simeq 1$



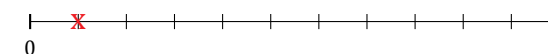
13. $\frac{3}{11} \simeq 0$



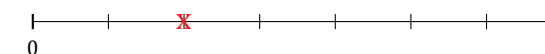
14. $\frac{4}{7} \simeq 1$



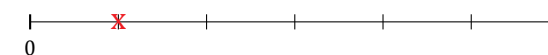
15. $\frac{1}{11} \simeq 0$



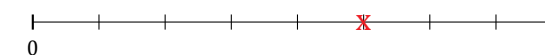
16. $\frac{2}{7} \simeq 0$



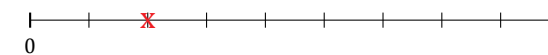
17. $\frac{1}{6} \simeq 0$



18. $\frac{5}{8} \simeq 1$



19. $\frac{2}{9} \simeq 0$



20. $\frac{3}{7} \simeq 0$

