

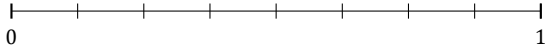
# L'Arrondi de Fractions (H)

Nom: \_\_\_\_\_

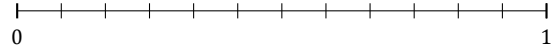
Date: \_\_\_\_\_

Arrondissez chaque fraction au nombre entier le plus proche. Arrondissez à l'entier supérieur en cas d'égalité.

1.  $\frac{5}{8} \approx$



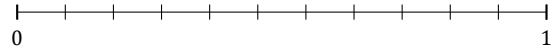
2.  $\frac{3}{12} \approx$



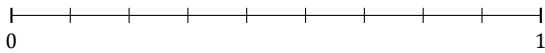
3.  $\frac{3}{5} \approx$



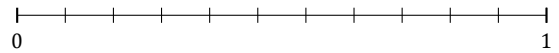
4.  $\frac{1}{11} \approx$



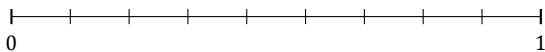
5.  $\frac{8}{9} \approx$




6.  $\frac{7}{11} \approx$



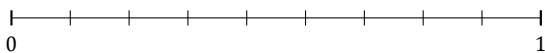
7.  $\frac{7}{9} \approx$



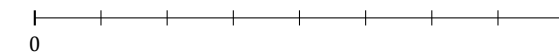
8.  $\frac{3}{7} \approx$



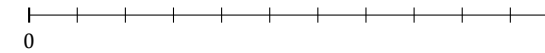
9.  $\frac{3}{9} \approx$



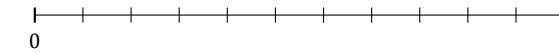
10.  $\frac{2}{8} \approx$



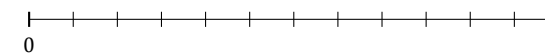
11.  $\frac{6}{11} \approx$



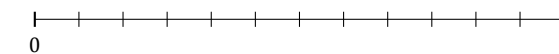
12.  $\frac{3}{11} \approx$



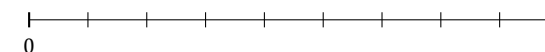
13.  $\frac{2}{12} \approx$



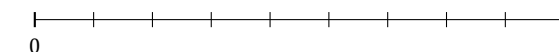
14.  $\frac{4}{12} \approx$



15.  $\frac{5}{9} \approx$



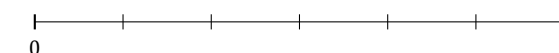
16.  $\frac{2}{9} \approx$



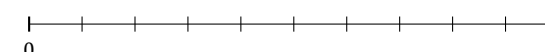
17.  $\frac{1}{5} \approx$



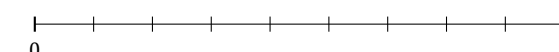
18.  $\frac{3}{6} \approx$



19.  $\frac{4}{10} \approx$



20.  $\frac{6}{9} \approx$



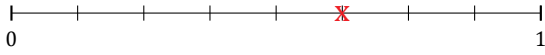
# L'Arrondi de Fractions (H) Réponses

Nom: \_\_\_\_\_

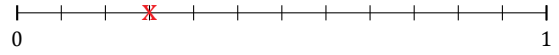
Date: \_\_\_\_\_

Arrondissez chaque fraction au nombre entier le plus proche. Arrondissez à l'entier supérieur en cas d'égalité.

1.  $\frac{5}{8} \approx 1$



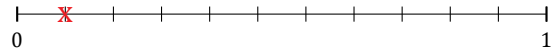
2.  $\frac{3}{12} \approx 0$



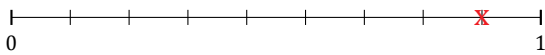
3.  $\frac{3}{5} \approx 1$



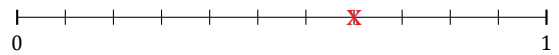
4.  $\frac{1}{11} \approx 0$



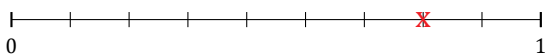
5.  $\frac{8}{9} \approx 1$




6.  $\frac{7}{11} \approx 1$



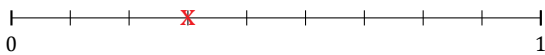
7.  $\frac{7}{9} \approx 1$



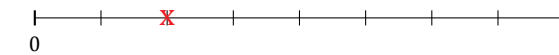
8.  $\frac{3}{7} \approx 0$



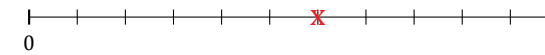
9.  $\frac{3}{9} \approx 0$



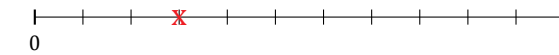
10.  $\frac{2}{8} \approx 0$



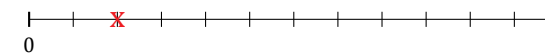
11.  $\frac{6}{11} \approx 1$



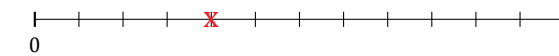
12.  $\frac{3}{11} \approx 0$



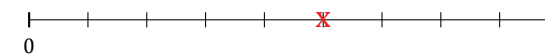
13.  $\frac{2}{12} \approx 0$



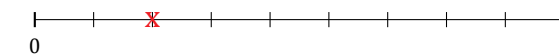
14.  $\frac{4}{12} \approx 0$



15.  $\frac{5}{9} \approx 1$



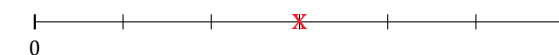
16.  $\frac{2}{9} \approx 0$



17.  $\frac{1}{5} \approx 0$



18.  $\frac{3}{6} \approx 1$



19.  $\frac{4}{10} \approx 0$



20.  $\frac{6}{9} \approx 1$

