

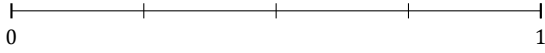
L'Arrondi de Fractions (F)

Nom: _____

Date: _____

Arrondissez chaque fraction au nombre entier le plus proche. Arrondissez à l'entier supérieur en cas d'égalité.

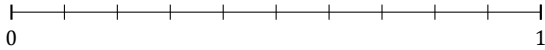
1. $\frac{3}{4} \approx$



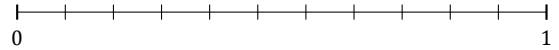
2. $\frac{2}{3} \approx$



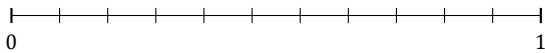
3. $\frac{8}{10} \approx$



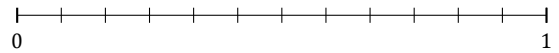
4. $\frac{10}{11} \approx$



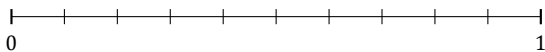
5. $\frac{5}{11} \approx$



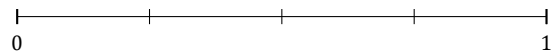
6. $\frac{7}{12} \approx$



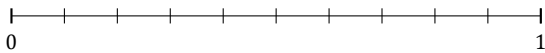
7. $\frac{9}{10} \approx$



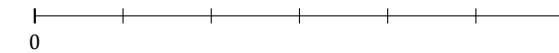
8. $\frac{2}{4} \approx$



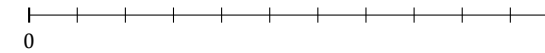
9. $\frac{6}{10} \approx$



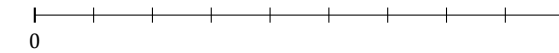
10. $\frac{4}{6} \approx$



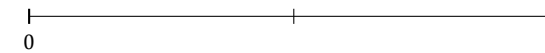
11. $\frac{6}{11} \approx$



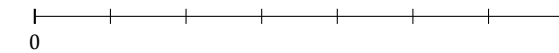
12. $\frac{4}{9} \approx$



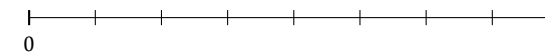
13. $\frac{1}{2} \approx$



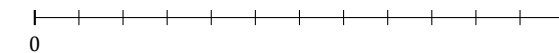
14. $\frac{2}{7} \approx$



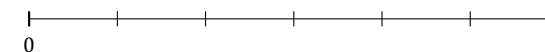
15. $\frac{3}{8} \approx$



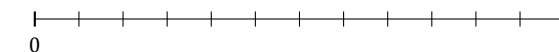
16. $\frac{2}{12} \approx$



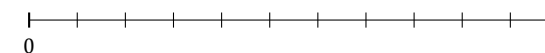
17. $\frac{2}{6} \approx$



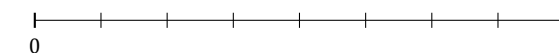
18. $\frac{5}{12} \approx$



19. $\frac{1}{11} \approx$



20. $\frac{5}{8} \approx$



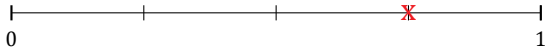
L'Arrondi de Fractions (F) Réponses

Nom: _____

Date: _____

Arrondissez chaque fraction au nombre entier le plus proche. Arrondissez à l'entier supérieur en cas d'égalité.

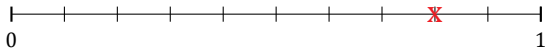
1. $\frac{3}{4} \approx 1$



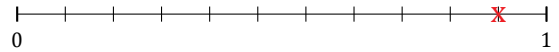
2. $\frac{2}{3} \approx 1$



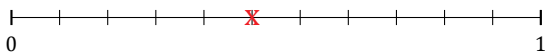
3. $\frac{8}{10} \approx 1$



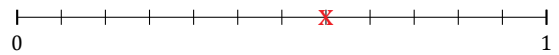
4. $\frac{10}{11} \approx 1$



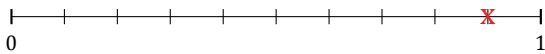
5. $\frac{5}{11} \approx 0$



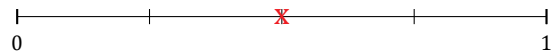
6. $\frac{7}{12} \approx 1$



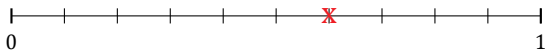
7. $\frac{9}{10} \approx 1$



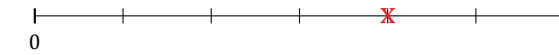
8. $\frac{2}{4} \approx 1$



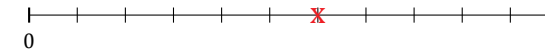
9. $\frac{6}{10} \approx 1$



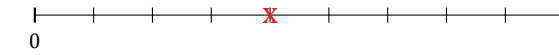
10. $\frac{4}{6} \approx 1$



11. $\frac{6}{11} \approx 1$



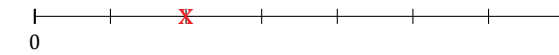
12. $\frac{4}{9} \approx 0$



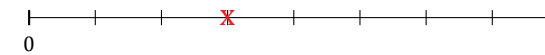
13. $\frac{1}{2} \approx 1$



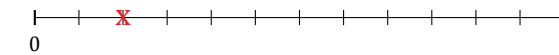
14. $\frac{2}{7} \approx 0$



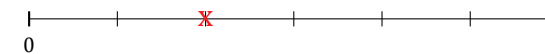
15. $\frac{3}{8} \approx 0$



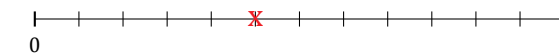
16. $\frac{2}{12} \approx 0$



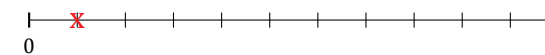
17. $\frac{2}{6} \approx 0$



18. $\frac{5}{12} \approx 0$



19. $\frac{1}{11} \approx 0$



20. $\frac{5}{8} \approx 1$

