

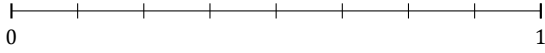
# L'Arrondi de Fractions (E)

Nom: \_\_\_\_\_

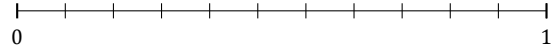
Date: \_\_\_\_\_

Arrondissez chaque fraction au nombre entier le plus proche. Arrondissez à l'entier supérieur en cas d'égalité.

1.  $\frac{2}{8} \approx$



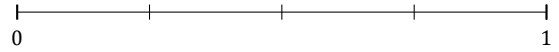
2.  $\frac{2}{11} \approx$



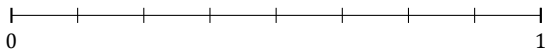
3.  $\frac{1}{5} \approx$



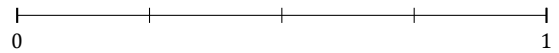
4.  $\frac{1}{4} \approx$



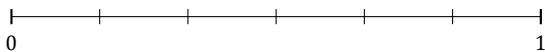
5.  $\frac{4}{8} \approx$



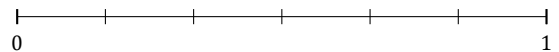
6.  $\frac{2}{4} \approx$



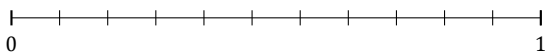
7.  $\frac{1}{6} \approx$



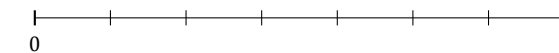
8.  $\frac{3}{6} \approx$



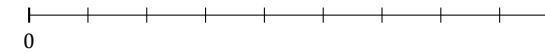
9.  $\frac{10}{11} \approx$




10.  $\frac{2}{7} \approx$



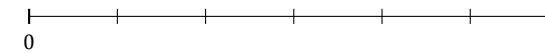
11.  $\frac{2}{9} \approx$



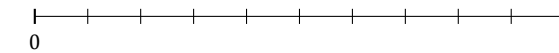
12.  $\frac{1}{3} \approx$



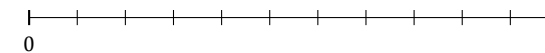
13.  $\frac{2}{6} \approx$



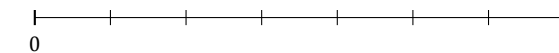
14.  $\frac{3}{10} \approx$



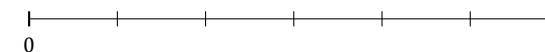
15.  $\frac{8}{11} \approx$



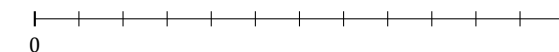
16.  $\frac{4}{7} \approx$



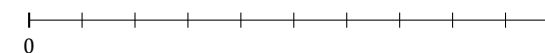
17.  $\frac{4}{6} \approx$



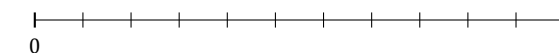
18.  $\frac{1}{12} \approx$



19.  $\frac{8}{10} \approx$



20.  $\frac{7}{11} \approx$



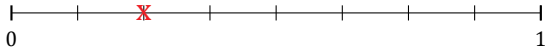
# L'Arrondi de Fractions (E) Réponses

Nom: \_\_\_\_\_

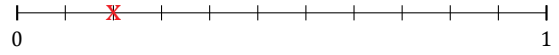
Date: \_\_\_\_\_

Arrondissez chaque fraction au nombre entier le plus proche. Arrondissez à l'entier supérieur en cas d'égalité.

1.  $\frac{2}{8} \approx 0$



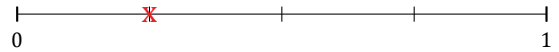
2.  $\frac{2}{11} \approx 0$



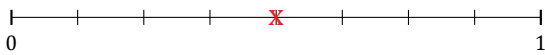
3.  $\frac{1}{5} \approx 0$



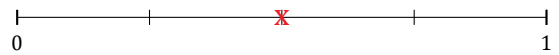
4.  $\frac{1}{4} \approx 0$



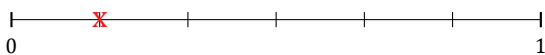
5.  $\frac{4}{8} \approx 1$



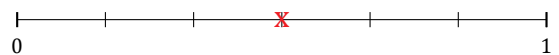
6.  $\frac{2}{4} \approx 1$



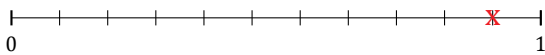
7.  $\frac{1}{6} \approx 0$



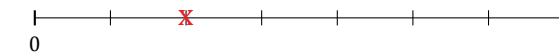
8.  $\frac{3}{6} \approx 1$



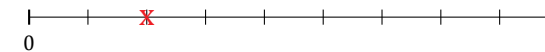
9.  $\frac{10}{11} \approx 1$



10.  $\frac{2}{7} \approx 0$



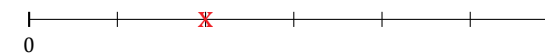
11.  $\frac{2}{9} \approx 0$



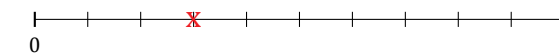
12.  $\frac{1}{3} \approx 0$



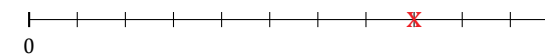
13.  $\frac{2}{6} \approx 0$



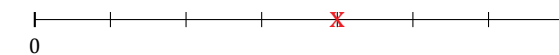
14.  $\frac{3}{10} \approx 0$



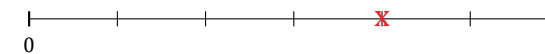
15.  $\frac{8}{11} \approx 1$



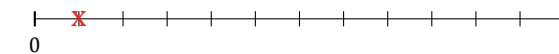
16.  $\frac{4}{7} \approx 1$



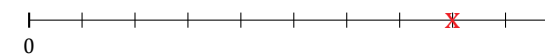
17.  $\frac{4}{6} \approx 1$



18.  $\frac{1}{12} \approx 0$



19.  $\frac{8}{10} \approx 1$



20.  $\frac{7}{11} \approx 1$

