

# L'Arrondi de Fractions (C)

Nom: \_\_\_\_\_

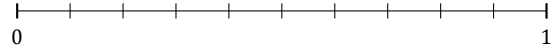
Date: \_\_\_\_\_

Arrondissez chaque fraction au nombre entier le plus proche. Arrondissez à l'entier supérieur en cas d'égalité.

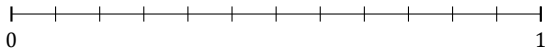
1.  $\frac{1}{5} \approx$



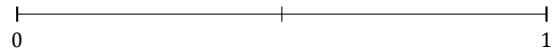
2.  $\frac{1}{10} \approx$



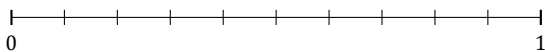
3.  $\frac{7}{12} \approx$



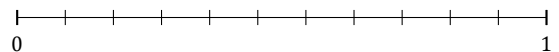
4.  $\frac{1}{2} \approx$




5.  $\frac{9}{10} \approx$



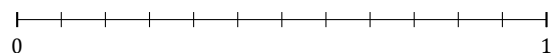
6.  $\frac{5}{11} \approx$



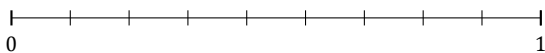
7.  $\frac{2}{7} \approx$



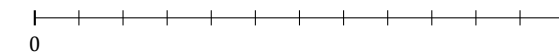
8.  $\frac{9}{12} \approx$



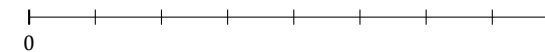
9.  $\frac{2}{9} \approx$



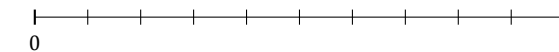
10.  $\frac{3}{12} \approx$



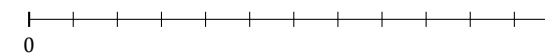
11.  $\frac{3}{8} \approx$



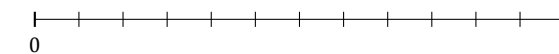
12.  $\frac{6}{10} \approx$



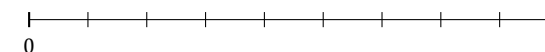
13.  $\frac{6}{12} \approx$



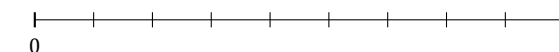
14.  $\frac{10}{12} \approx$



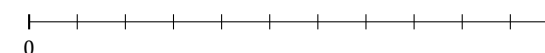
15.  $\frac{6}{9} \approx$



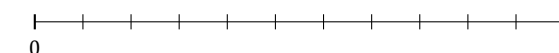
16.  $\frac{5}{9} \approx$



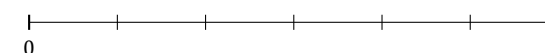
17.  $\frac{3}{11} \approx$



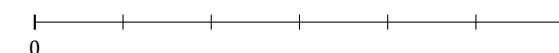
18.  $\frac{10}{11} \approx$



19.  $\frac{5}{6} \approx$



20.  $\frac{2}{6} \approx$



# L'Arrondi de Fractions (C) Réponses

Nom: \_\_\_\_\_

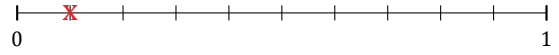
Date: \_\_\_\_\_

Arrondissez chaque fraction au nombre entier le plus proche. Arrondissez à l'entier supérieur en cas d'égalité.

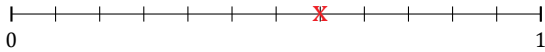
1.  $\frac{1}{5} \approx 0$



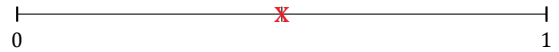
2.  $\frac{1}{10} \approx 0$



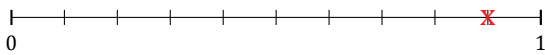
3.  $\frac{7}{12} \approx 1$



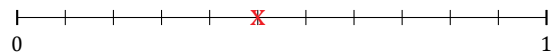
4.  $\frac{1}{2} \approx 1$




5.  $\frac{9}{10} \approx 1$



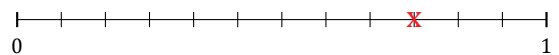
6.  $\frac{5}{11} \approx 0$



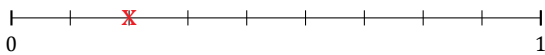
7.  $\frac{2}{7} \approx 0$



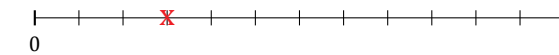
8.  $\frac{9}{12} \approx 1$



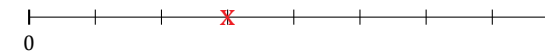
9.  $\frac{2}{9} \approx 0$



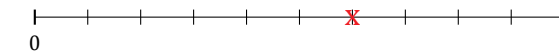
10.  $\frac{3}{12} \approx 0$



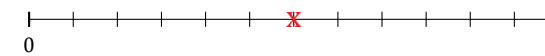
11.  $\frac{3}{8} \approx 0$



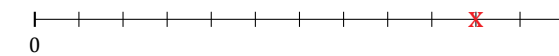
12.  $\frac{6}{10} \approx 1$



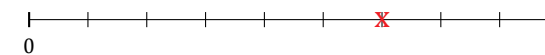
13.  $\frac{6}{12} \approx 1$



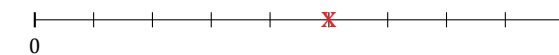
14.  $\frac{10}{12} \approx 1$



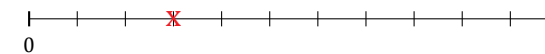
15.  $\frac{6}{9} \approx 1$



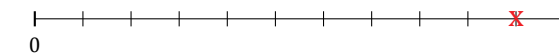
16.  $\frac{5}{9} \approx 1$



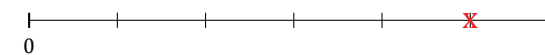
17.  $\frac{3}{11} \approx 0$



18.  $\frac{10}{11} \approx 1$



19.  $\frac{5}{6} \approx 1$



20.  $\frac{2}{6} \approx 0$

