

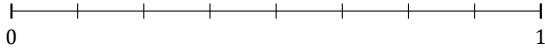
L'Arrondi de Fractions (B)

Nom: _____

Date: _____

Arrondissez chaque fraction au nombre entier le plus proche. Arrondissez à l'entier supérieur en cas d'égalité.

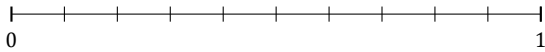
1. $\frac{5}{8} \approx$



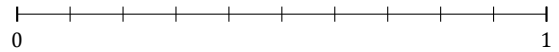
2. $\frac{2}{7} \approx$



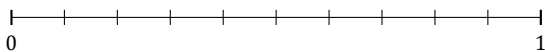
3. $\frac{7}{10} \approx$



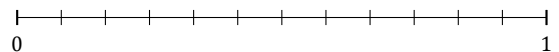
4. $\frac{8}{10} \approx$



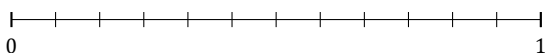
5. $\frac{2}{10} \approx$



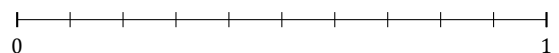
6. $\frac{5}{12} \approx$



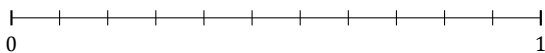
7. $\frac{4}{12} \approx$



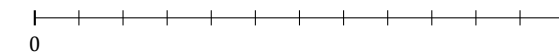
8. $\frac{6}{10} \approx$



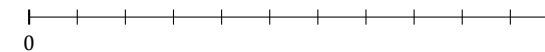
9. $\frac{9}{11} \approx$



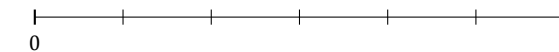
10. $\frac{11}{12} \approx$



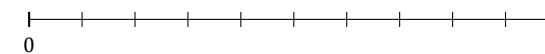
11. $\frac{10}{11} \approx$



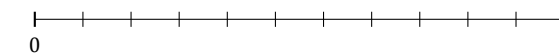
12. $\frac{4}{6} \approx$



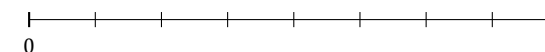
13. $\frac{1}{10} \approx$



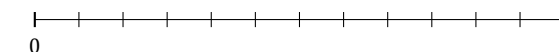
14. $\frac{4}{11} \approx$



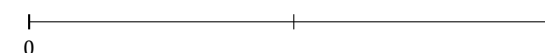
15. $\frac{4}{8} \approx$



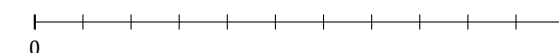
16. $\frac{2}{12} \approx$



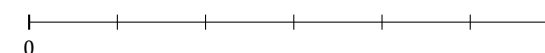
17. $\frac{1}{2} \approx$



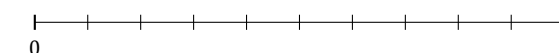
18. $\frac{5}{11} \approx$



19. $\frac{3}{6} \approx$



20. $\frac{5}{10} \approx$



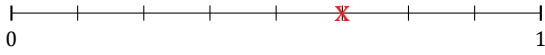
L'Arrondi de Fractions (B) Réponses

Nom: _____

Date: _____

Arrondissez chaque fraction au nombre entier le plus proche. Arrondissez à l'entier supérieur en cas d'égalité.

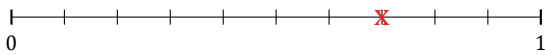
1. $\frac{5}{8} \approx 1$



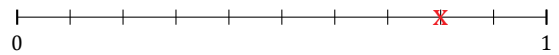
2. $\frac{2}{7} \approx 0$



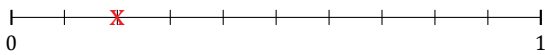
3. $\frac{7}{10} \approx 1$



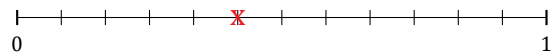
4. $\frac{8}{10} \approx 1$



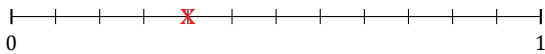
5. $\frac{2}{10} \approx 0$



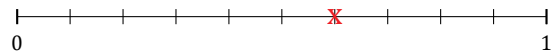
6. $\frac{5}{12} \approx 0$



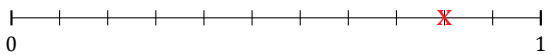
7. $\frac{4}{12} \approx 0$



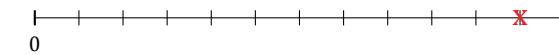
8. $\frac{6}{10} \approx 1$



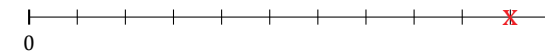
9. $\frac{9}{11} \approx 1$



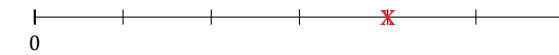
10. $\frac{11}{12} \approx 1$



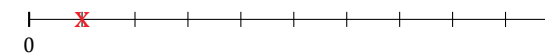
11. $\frac{10}{11} \approx 1$



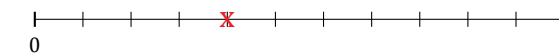
12. $\frac{4}{6} \approx 1$



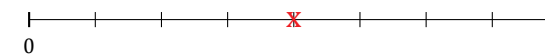
13. $\frac{1}{10} \approx 0$



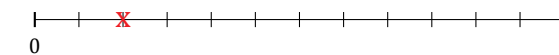
14. $\frac{4}{11} \approx 0$



15. $\frac{4}{8} \approx 1$



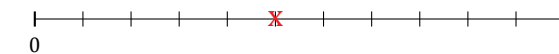
16. $\frac{2}{12} \approx 0$



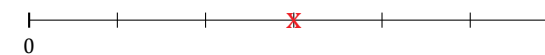
17. $\frac{1}{2} \approx 1$



18. $\frac{5}{11} \approx 0$



19. $\frac{3}{6} \approx 1$



20. $\frac{5}{10} \approx 1$

