

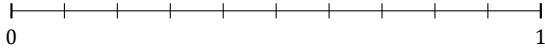
L'Arrondi de Fractions (A)

Nom: _____

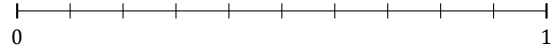
Date: _____

Arrondissez chaque fraction au nombre entier le plus proche. Arrondissez à l'entier supérieur en cas d'égalité.

1. $\frac{7}{10} \approx$



2. $\frac{6}{10} \approx$



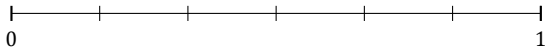
3. $\frac{4}{5} \approx$



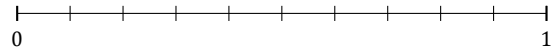
4. $\frac{3}{7} \approx$




5. $\frac{3}{6} \approx$



6. $\frac{1}{10} \approx$



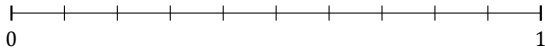
7. $\frac{6}{7} \approx$



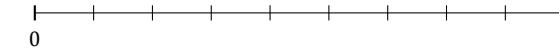
8. $\frac{2}{9} \approx$



9. $\frac{5}{10} \approx$



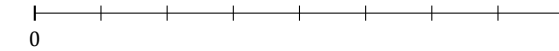
10. $\frac{3}{9} \approx$



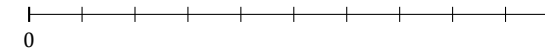
11. $\frac{1}{5} \approx$



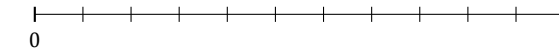
12. $\frac{3}{8} \approx$



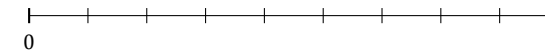
13. $\frac{9}{10} \approx$



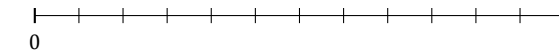
14. $\frac{8}{11} \approx$



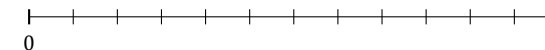
15. $\frac{8}{9} \approx$



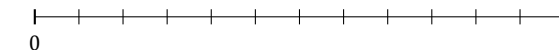
16. $\frac{3}{12} \approx$



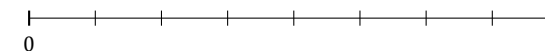
17. $\frac{11}{12} \approx$



18. $\frac{10}{12} \approx$



19. $\frac{1}{8} \approx$



20. $\frac{7}{12} \approx$

