

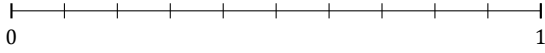
# L'Arrondi de Fractions (A)

Nom: \_\_\_\_\_

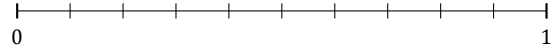
Date: \_\_\_\_\_

Arrondissez chaque fraction au nombre entier le plus proche. Arrondissez à l'entier supérieur en cas d'égalité.

1.  $\frac{7}{10} \approx$



2.  $\frac{6}{10} \approx$



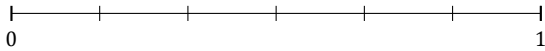
3.  $\frac{4}{5} \approx$



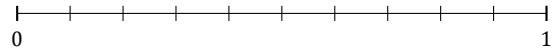
4.  $\frac{3}{7} \approx$




5.  $\frac{3}{6} \approx$




6.  $\frac{1}{10} \approx$



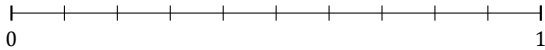
7.  $\frac{6}{7} \approx$



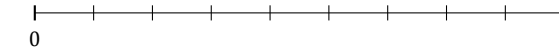
8.  $\frac{2}{9} \approx$



9.  $\frac{5}{10} \approx$



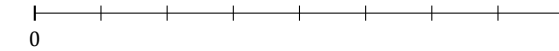
10.  $\frac{3}{9} \approx$



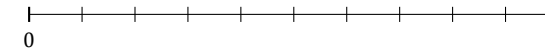
11.  $\frac{1}{5} \approx$



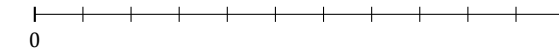
12.  $\frac{3}{8} \approx$



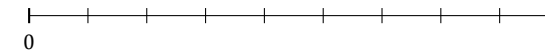
13.  $\frac{9}{10} \approx$



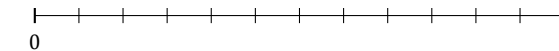
14.  $\frac{8}{11} \approx$



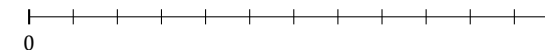
15.  $\frac{8}{9} \approx$



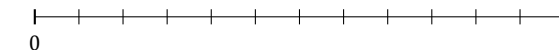
16.  $\frac{3}{12} \approx$



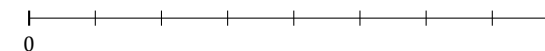
17.  $\frac{11}{12} \approx$



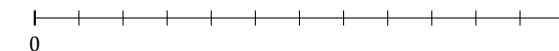
18.  $\frac{10}{12} \approx$



19.  $\frac{1}{8} \approx$



20.  $\frac{7}{12} \approx$



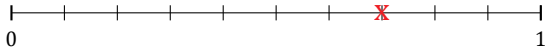
# L'Arrondi de Fractions (A) Réponses

Nom: \_\_\_\_\_

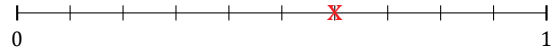
Date: \_\_\_\_\_

Arrondissez chaque fraction au nombre entier le plus proche. Arrondissez à l'entier supérieur en cas d'égalité.

1.  $\frac{7}{10} \approx 1$



2.  $\frac{6}{10} \approx 1$



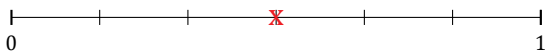
3.  $\frac{4}{5} \approx 1$



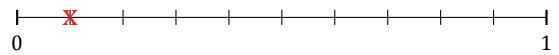
4.  $\frac{3}{7} \approx 0$




5.  $\frac{3}{6} \approx 1$



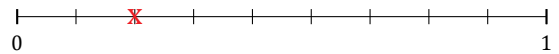
6.  $\frac{1}{10} \approx 0$



7.  $\frac{6}{7} \approx 1$



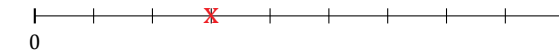
8.  $\frac{2}{9} \approx 0$



9.  $\frac{5}{10} \approx 1$



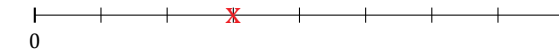
10.  $\frac{3}{9} \approx 0$



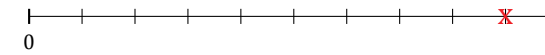
11.  $\frac{1}{5} \approx 0$



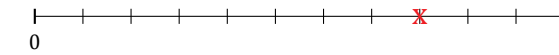
12.  $\frac{3}{8} \approx 0$



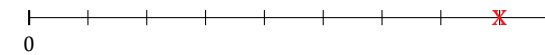
13.  $\frac{9}{10} \approx 1$



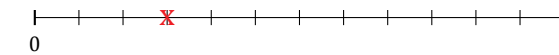
14.  $\frac{8}{11} \approx 1$



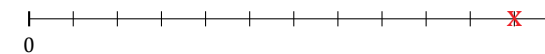
15.  $\frac{8}{9} \approx 1$



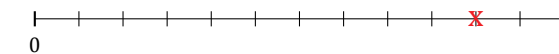
16.  $\frac{3}{12} \approx 0$



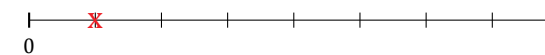
17.  $\frac{11}{12} \approx 1$



18.  $\frac{10}{12} \approx 1$



19.  $\frac{1}{8} \approx 0$



20.  $\frac{7}{12} \approx 1$

