

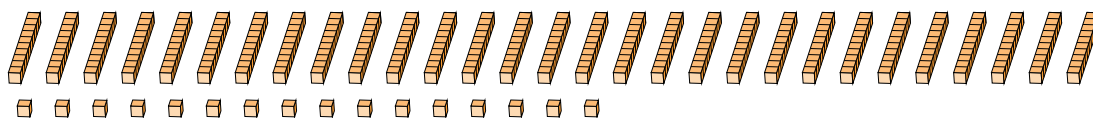

Regroupement en Blocs de Base Dix (E)

Nom: _____

Date: _____

Quel est le nombre indiqué dans chaque bloc de base dix?

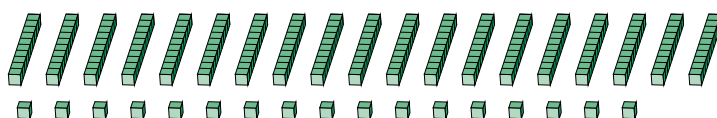
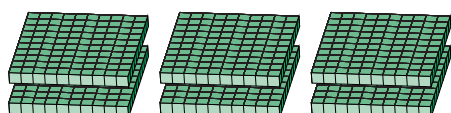
1.



Forme Élargie

Forme Standard

2.



Forme Élargie

Forme Standard

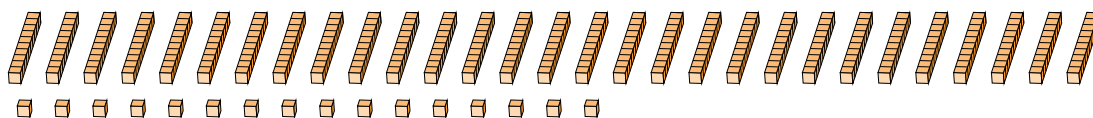

Regroupement en Blocs de Base Dix (E) Réponses

Nom: _____

Date: _____

Quel est le nombre indiqué dans chaque bloc de base dix?

1.



Forme Élargie

$$(2 \times 100) + (29 \times 10) + (16 \times 1)$$

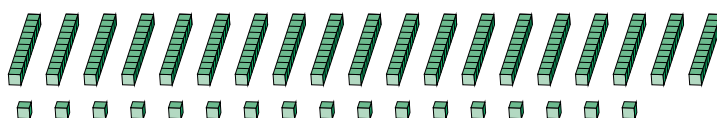
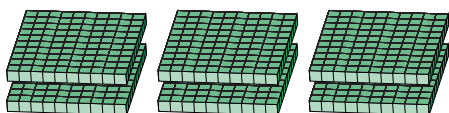
$$(5 \times 100) + (0 \times 10) + (6 \times 1)$$

$$500 + 0 + 6$$

Forme Standard

506

2.



Forme Élargie

$$(6 \times 100) + (19 \times 10) + (17 \times 1)$$

$$(8 \times 100) + (0 \times 10) + (7 \times 1)$$

$$800 + 0 + 7$$

Forme Standard

807