


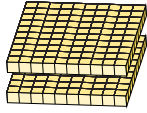
Regroupement en Blocs de Base Dix (A)

Nom: _____

Date: _____

Quel est le nombre indiqué dans chaque bloc de base dix?

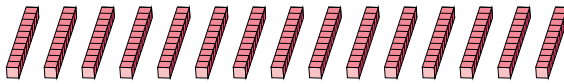

1.



Forme Élargie

Forme Standard

2.



Forme Élargie

Forme Standard