

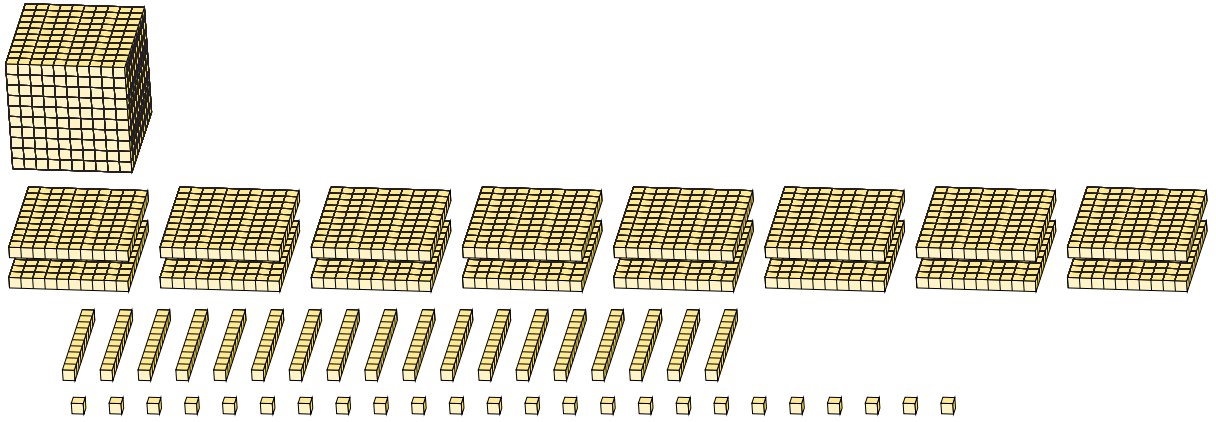
Regroupement en Blocs de Base Dix (J)

Nom: _____

Date: _____

Quel est le nombre indiqué dans chaque bloc de base dix?

1.

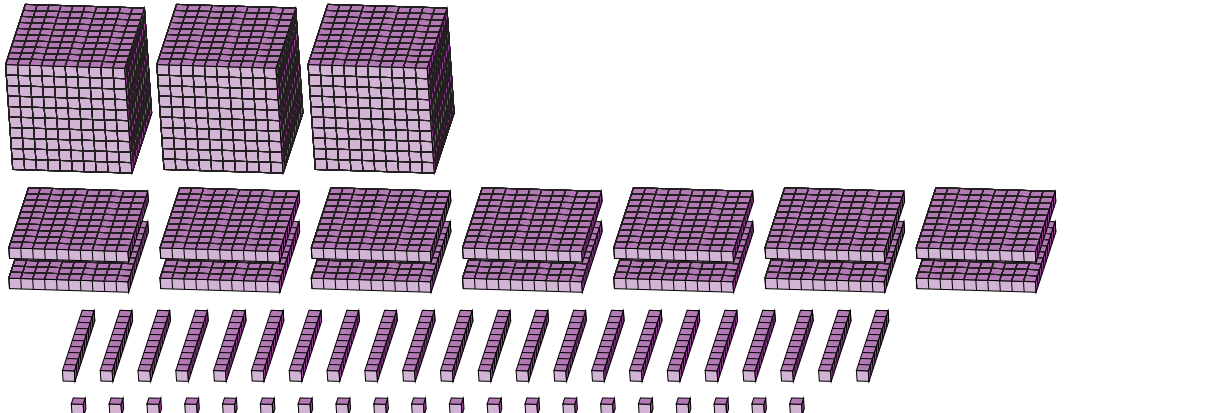


A large cube representing 1000 units is shown at the top left. Below it, the same 1000 units are decomposed into 10 flats (each 100 units), 100 rods (each 10 units), and 1000 individual units.

 \longrightarrow

milliers centaines dizaines unités regrouper

2.



Three large cubes representing 3000 units are shown at the top left. Below them, the 3000 units are decomposed into 30 flats (each 100 units), 300 rods (each 10 units), and 3000 individual units.

 \longrightarrow

milliers centaines dizaines unités regrouper

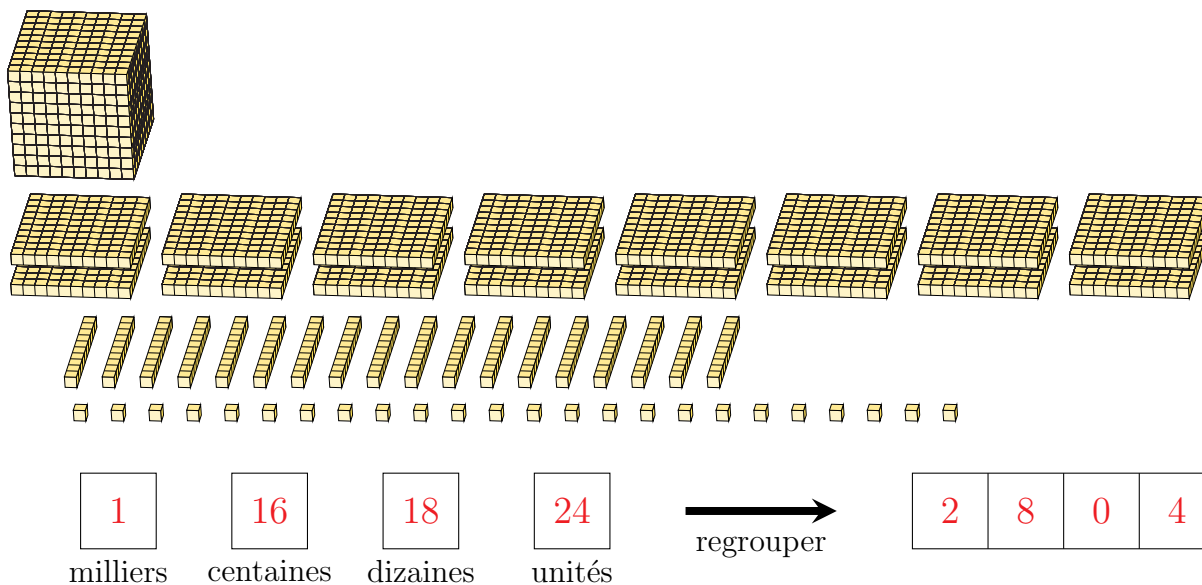
Regroupement en Blocs de Base Dix (J) Réponses

Nom: _____

Date: _____

Quel est le nombre indiqué dans chaque bloc de base dix?

1.



2.

