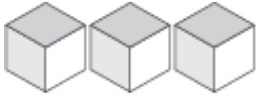
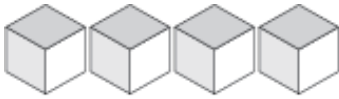


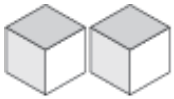
Représentation de Nombres (G)

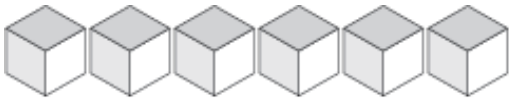
Quel chiffre est représenté par chaque groupe de blocs d'unité?

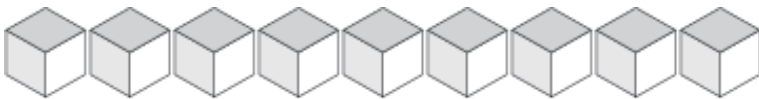












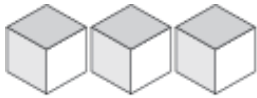




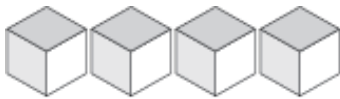


Représentation de Nombres (G) Solutions

Quel chiffre est représenté par chaque groupe de blocs d'unité?



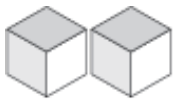
3



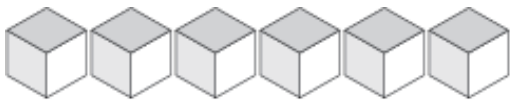
4



1



2



6



9



5



7



8