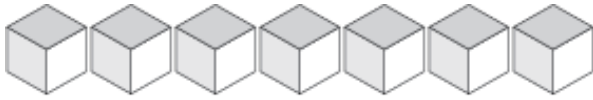
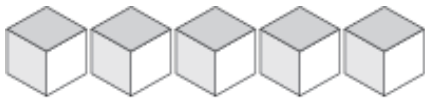


# Représentation de Nombres (D)

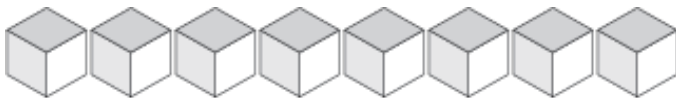
Quel chiffre est représenté par chaque groupe de blocs d'unité?



\_\_\_\_\_



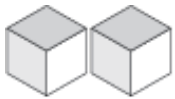
\_\_\_\_\_



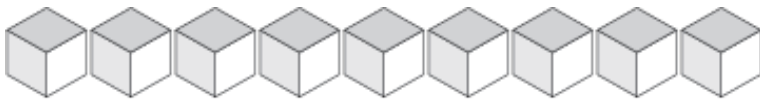
\_\_\_\_\_



\_\_\_\_\_



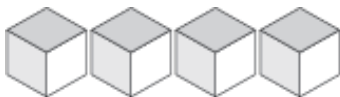
\_\_\_\_\_



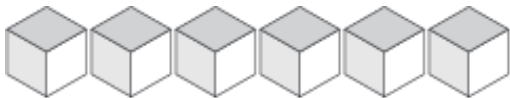
\_\_\_\_\_



\_\_\_\_\_



\_\_\_\_\_



\_\_\_\_\_