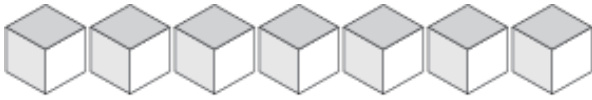
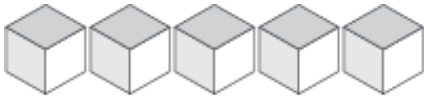


# Représentation de Nombres (D)

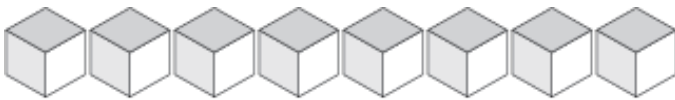
Quel chiffre est représenté par chaque groupe de blocs d'unité?



\_\_\_\_\_



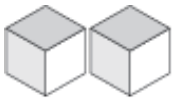
\_\_\_\_\_



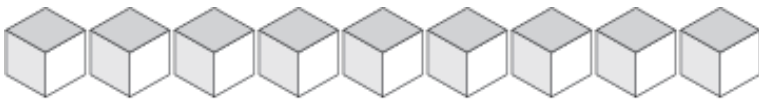
\_\_\_\_\_



\_\_\_\_\_



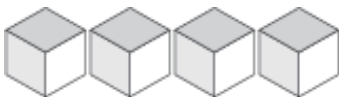
\_\_\_\_\_



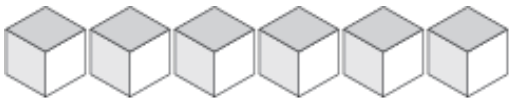
\_\_\_\_\_



\_\_\_\_\_



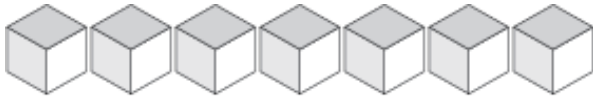
\_\_\_\_\_



\_\_\_\_\_

# Représentation de Nombres (D) Solutions

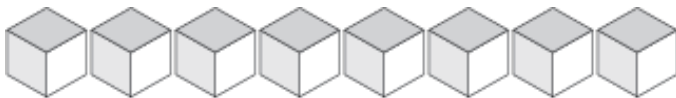
Quel chiffre est représenté par chaque groupe de blocs d'unité?



7



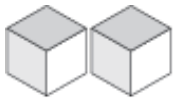
5



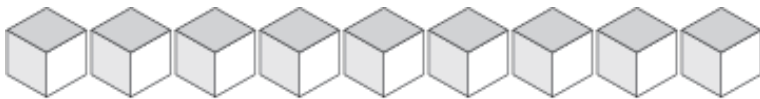
8



1



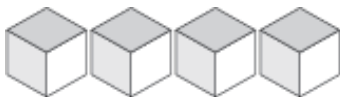
2



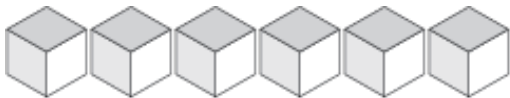
9



3



4



6