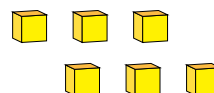
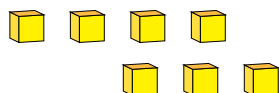
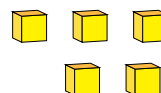
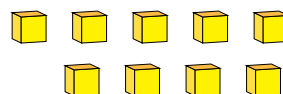
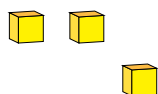


Représentation de Nombres (A)

Quel chiffre est représenté par chaque groupe de blocs d'unité?



1

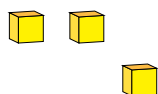


Représentation de Nombres (A) Réponses

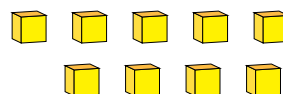
Quel chiffre est représenté par chaque groupe de blocs d'unité?



1



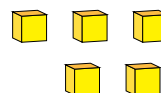
3



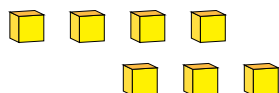
9



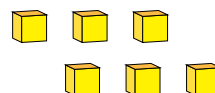
2



5



7



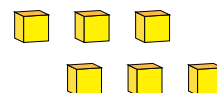
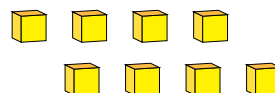
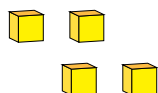
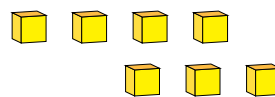
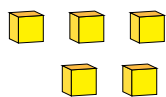
6

Représentation de Nombres (B)

Quel chiffre est représenté par chaque groupe de blocs d'unité?



1

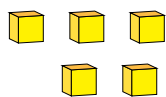


Représentation de Nombres (B) Réponses

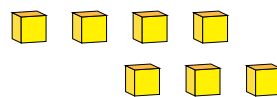
Quel chiffre est représenté par chaque groupe de blocs d'unité?



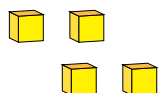
1



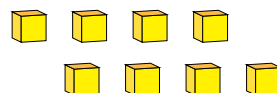
5



7



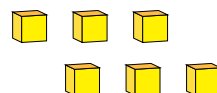
4



8



1



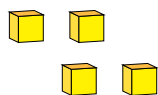
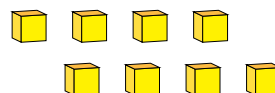
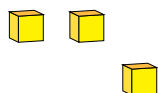
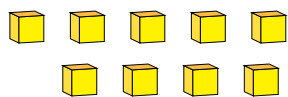
6

Représentation de Nombres (C)

Quel chiffre est représenté par chaque groupe de blocs d'unité?



1

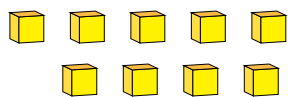


Représentation de Nombres (C) Réponses

Quel chiffre est représenté par chaque groupe de blocs d'unité?



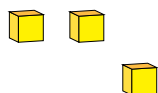
1



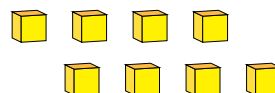
9



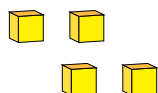
2



3



8



4



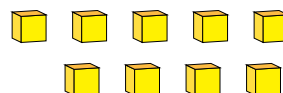
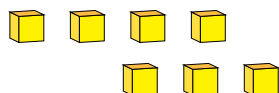
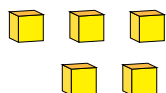
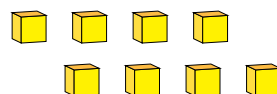
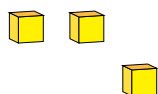
1

Représentation de Nombres (D)

Quel chiffre est représenté par chaque groupe de blocs d'unité?



1

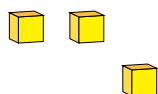


Représentation de Nombres (D) Réponses

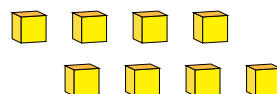
Quel chiffre est représenté par chaque groupe de blocs d'unité?



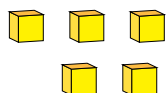
1



3



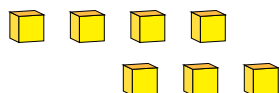
8



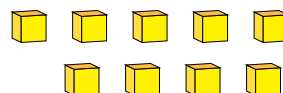
5



1



7



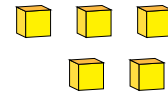
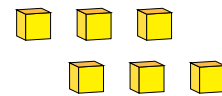
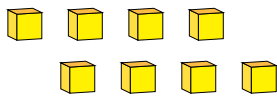
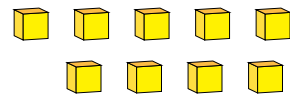
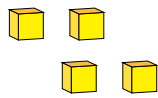
9

Représentation de Nombres (E)

Quel chiffre est représenté par chaque groupe de blocs d'unité?



1

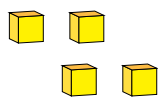


Représentation de Nombres (E) Réponses

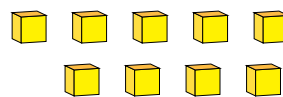
Quel chiffre est représenté par chaque groupe de blocs d'unité?



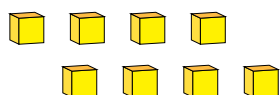
1



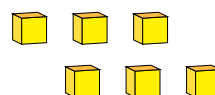
4



9



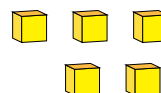
8



6



1



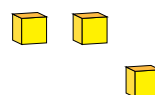
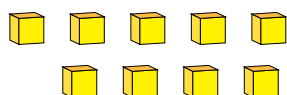
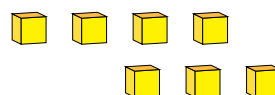
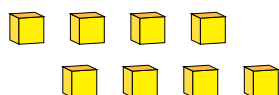
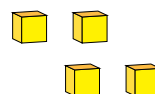
5

Représentation de Nombres (F)

Quel chiffre est représenté par chaque groupe de blocs d'unité?



1



Représentation de Nombres (F) Réponses

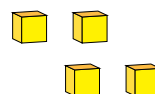
Quel chiffre est représenté par chaque groupe de blocs d'unité?



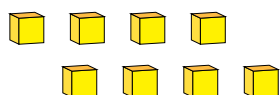
1



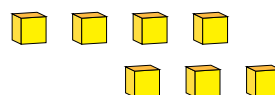
2



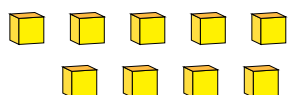
4



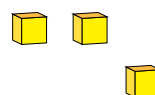
8



7



9



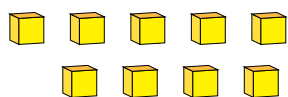
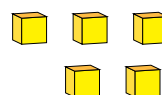
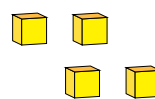
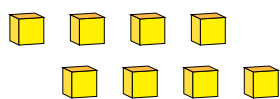
3

Représentation de Nombres (G)

Quel chiffre est représenté par chaque groupe de blocs d'unité?



1

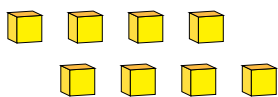


Représentation de Nombres (G) Réponses

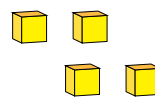
Quel chiffre est représenté par chaque groupe de blocs d'unité?



1



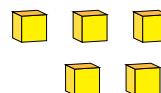
8



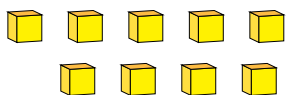
4



1



5



9



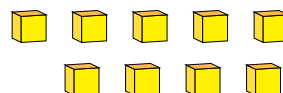
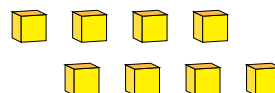
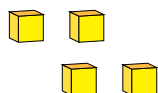
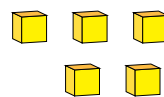
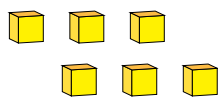
2

Représentation de Nombres (H)

Quel chiffre est représenté par chaque groupe de blocs d'unité?



1

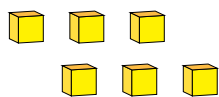


Représentation de Nombres (H) Réponses

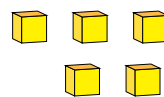
Quel chiffre est représenté par chaque groupe de blocs d'unité?



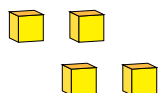
1



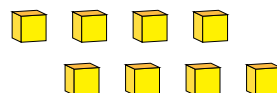
6



5



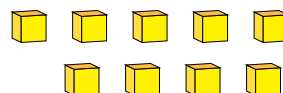
4



8



2



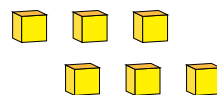
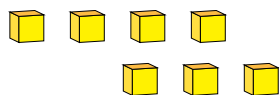
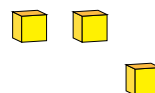
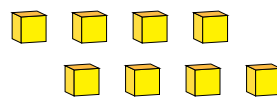
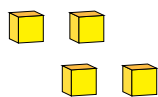
9

Représentation de Nombres (I)

Quel chiffre est représenté par chaque groupe de blocs d'unité?



1

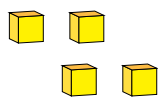


Représentation de Nombres (I) Réponses

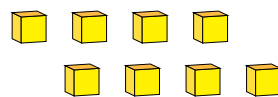
Quel chiffre est représenté par chaque groupe de blocs d'unité?



1



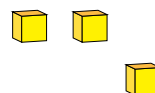
4



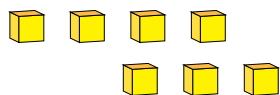
8



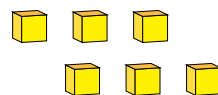
1



3



7



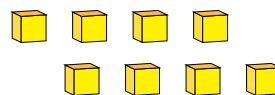
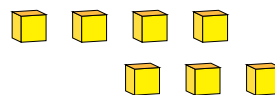
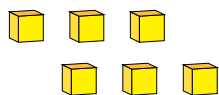
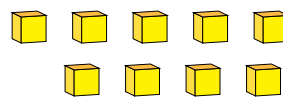
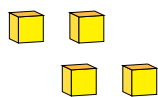
6

Représentation de Nombres (J)

Quel chiffre est représenté par chaque groupe de blocs d'unité?



1

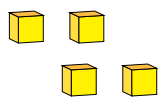


Représentation de Nombres (J) Réponses

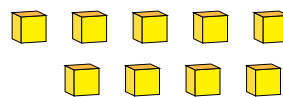
Quel chiffre est représenté par chaque groupe de blocs d'unité?



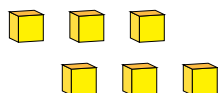
1



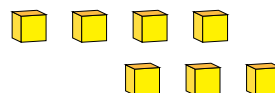
4



9



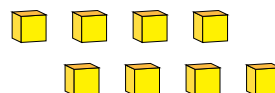
6



7



1



8