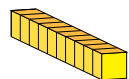


# Représentation de Nombres (A)

Quel nombre est représenté par chaque groupe de blocs ci-dessous?



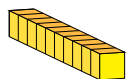
10



1

# Représentation de Nombres (A) Réponses


Quel nombre est représenté par chaque groupe de blocs ci-dessous?



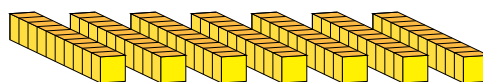
10



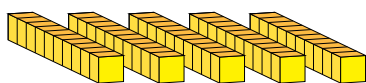
1



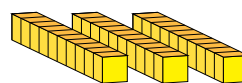
99




75



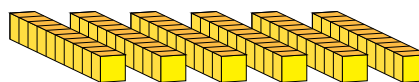
57



34



46



60