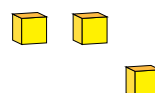
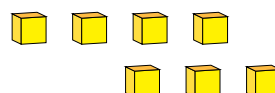
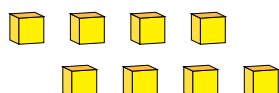
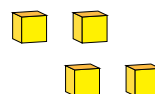


# Représentation de Nombres (F)

Quel chiffre est représenté par chaque groupe de blocs d'unité?



1



# Représentation de Nombres (F) Réponses

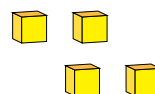
Quel chiffre est représenté par chaque groupe de blocs d'unité?



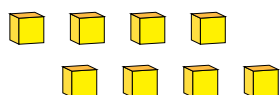
1



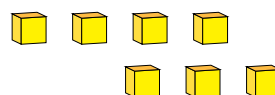
2



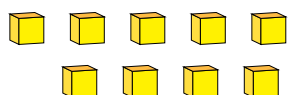
4



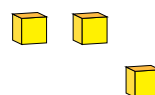
8



7



9



3