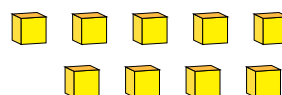
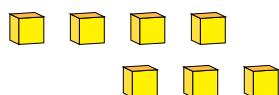
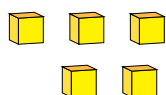
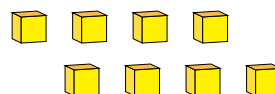
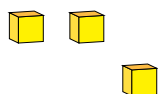


Représentation de Nombres (D)

Quel chiffre est représenté par chaque groupe de blocs d'unité?



1

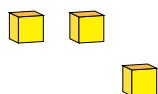


Représentation de Nombres (D) Réponses

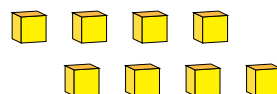
Quel chiffre est représenté par chaque groupe de blocs d'unité?



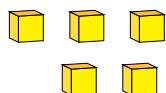
1



3



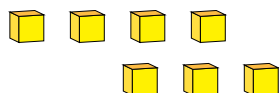
8



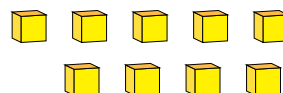
5



1



7



9