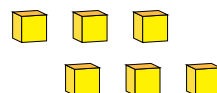
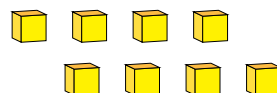
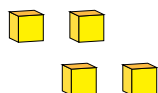
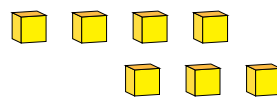
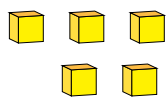


Représentation de Nombres (B)

Quel chiffre est représenté par chaque groupe de blocs d'unité?



1

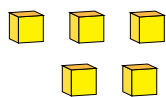


Représentation de Nombres (B) Réponses

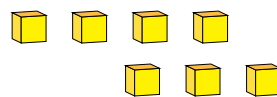
Quel chiffre est représenté par chaque groupe de blocs d'unité?



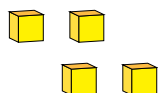
1



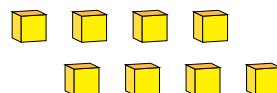
5



7



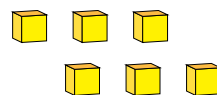
4



8



1



6