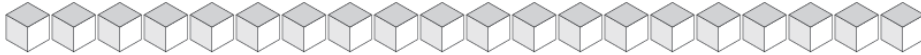


Échange de Blocs de Base Dix (F)

Combien d'unités pouvez-vous échanger pour des dizaines? Combien vous en restera-t-il?



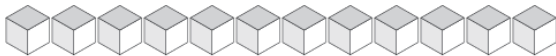
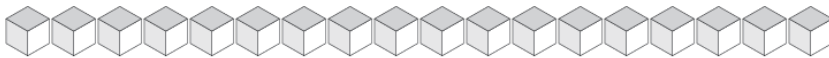
Dizaines	Unités



Dizaines	Unités



Dizaines	Unités



Dizaines	Unités



Dizaines	Unités

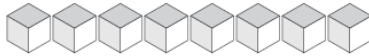
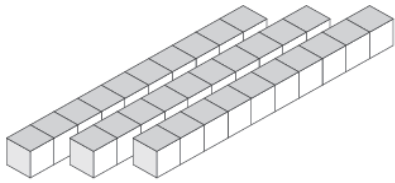


Dizaines	Unités

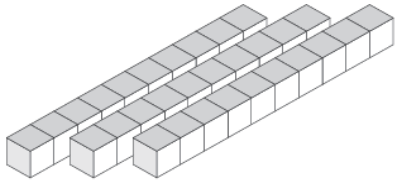


Échange de Blocs de Base Dix (F) Solutions

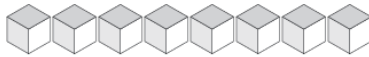
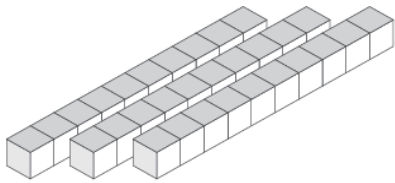
Combien d'unités pouvez-vous échanger pour des dizaines? Combien vous en restera-t-il?



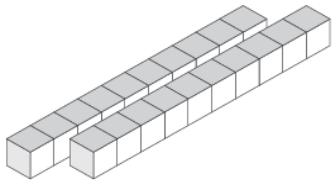
Dizaines	Unités
3	8



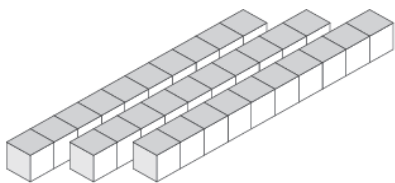
Dizaines	Unités
3	1



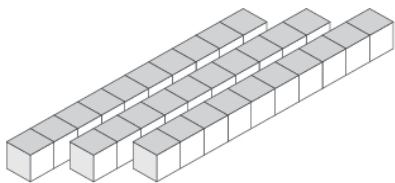
Dizaines	Unités
3	8



Dizaines	Unités
2	7



Dizaines	Unités
3	4



Dizaines	Unités
3	5