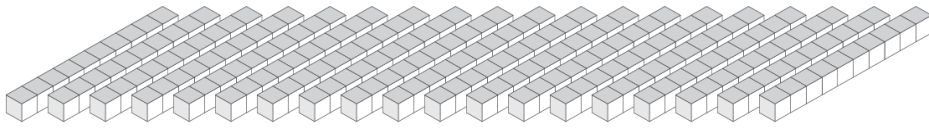
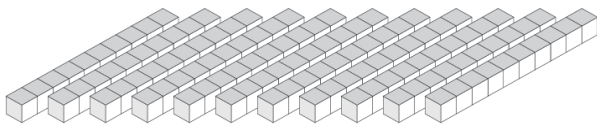
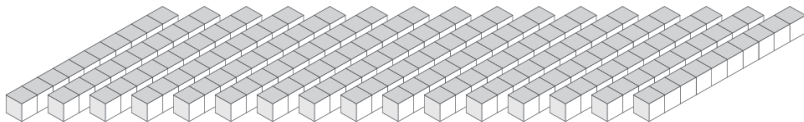


Échange de Blocs de Base Dix (B)

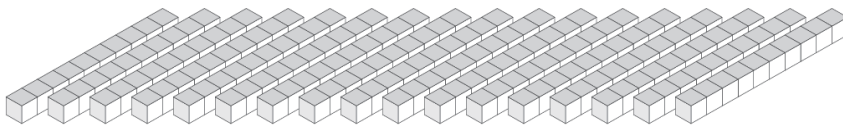
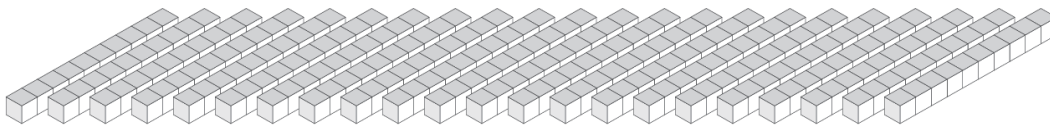
Combien de dizaines pouvez-vous échanger pour des centaines? Combien vous en restera-t-il?



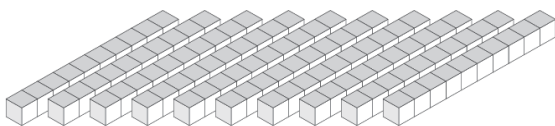
| Centaines | Dizaines |
|-----------|----------|
| | |



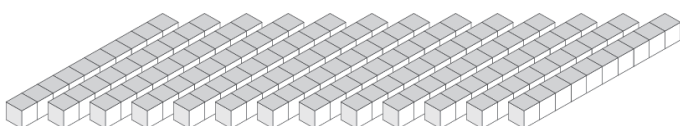
| Centaines | Dizaines |
|-----------|----------|
| | |



| Centaines | Dizaines |
|-----------|----------|
| | |



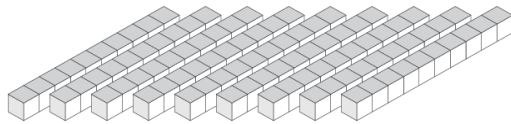
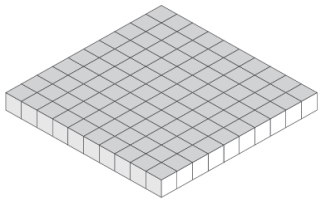
| Centaines | Dizaines |
|-----------|----------|
| | |



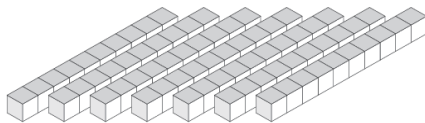
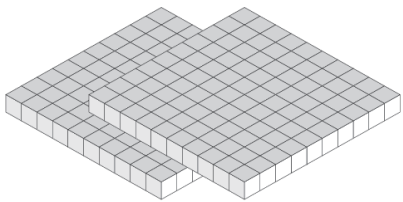
| Centaines | Dizaines |
|-----------|----------|
| | |

Échange de Blocs de Base Dix (B) Solutions

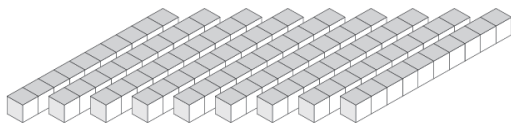
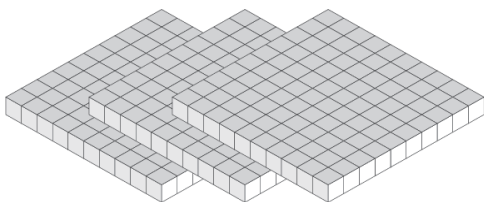
Combien de dizaines pouvez-vous échanger pour des centaines? Combien vous en restera-t-il?



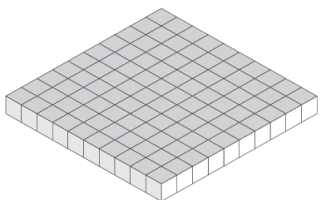
| Centaines | Dizaines |
|-----------|----------|
| 1 | 9 |



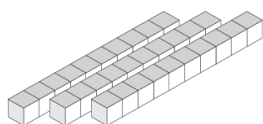
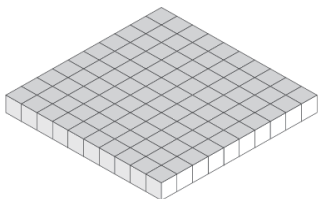
| Centaines | Dizaines |
|-----------|----------|
| 2 | 7 |



| Centaines | Dizaines |
|-----------|----------|
| 3 | 9 |



| Centaines | Dizaines |
|-----------|----------|
| 1 | 0 |



| Centaines | Dizaines |
|-----------|----------|
| 1 | 3 |

0