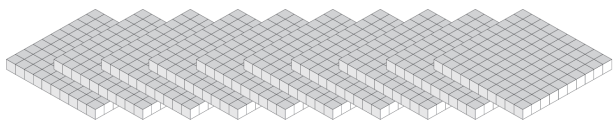
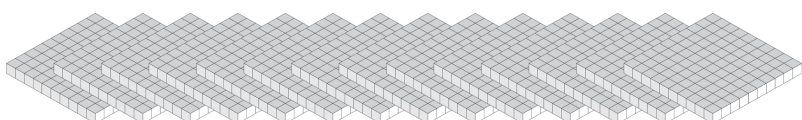
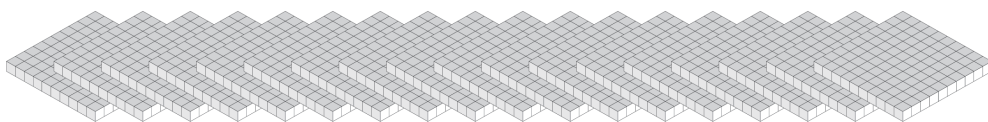


Échange de Blocs de Base Dix (I)

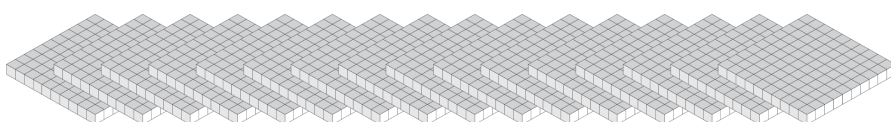
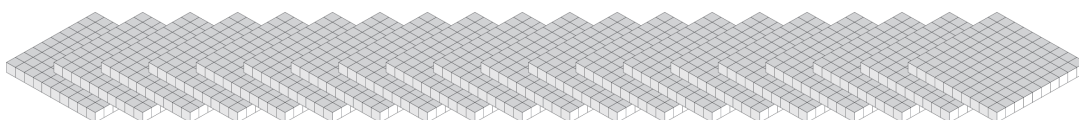
Combien de centaines pouvez-vous échanger pour des milliers? Combien vous en restera-t-il?



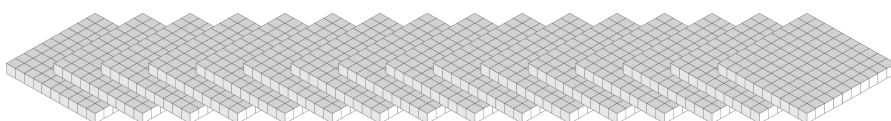
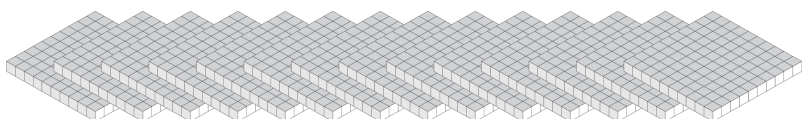
| Milliers | Centaines |
|----------|-----------|
| | |



| Milliers | Centaines |
|----------|-----------|
| | |



| Milliers | Centaines |
|----------|-----------|
| | |



| Milliers | Centaines |
|----------|-----------|
| | |

