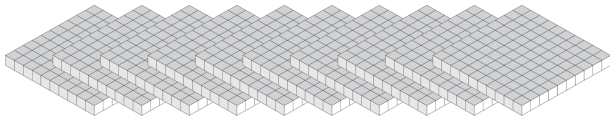
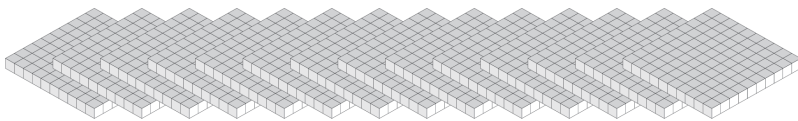
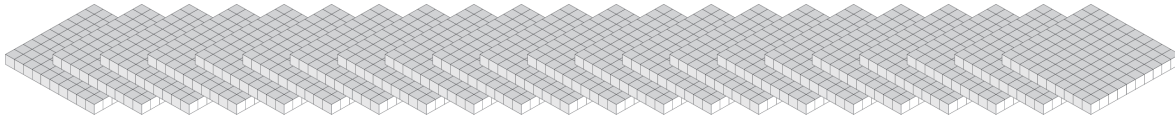


Échange de Blocs de Base Dix (D)

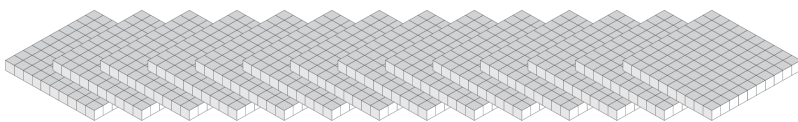
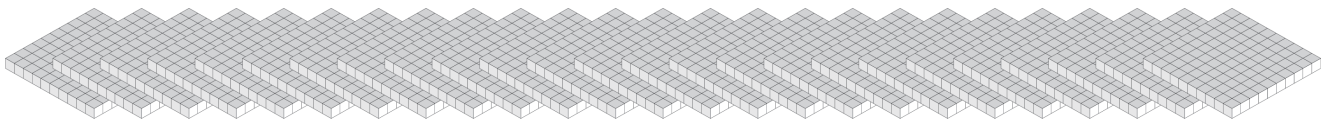
Combien de centaines pouvez-vous échanger pour des milliers? Combien vous en restera-t-il?



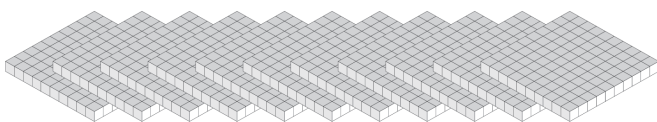
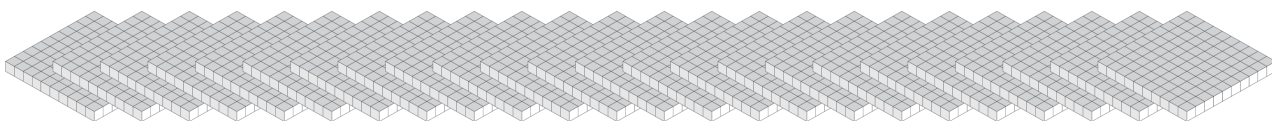
| Milliers | Centaines |
|----------|-----------|
| | |



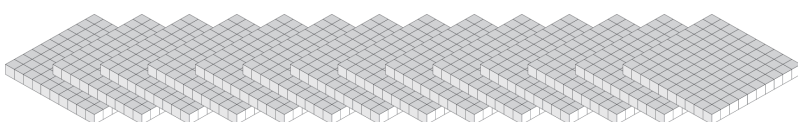
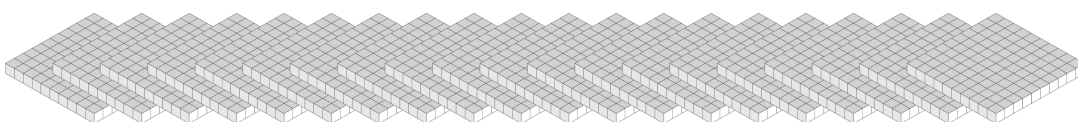
| Milliers | Centaines |
|----------|-----------|
| | |



| Milliers | Centaines |
|----------|-----------|
| | |

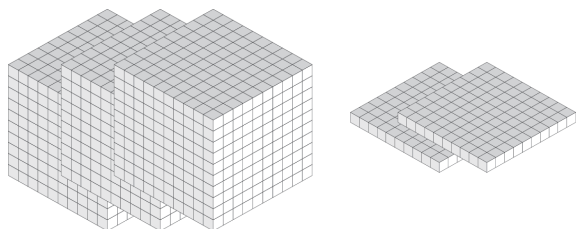


| Milliers | Centaines |
|----------|-----------|
| | |

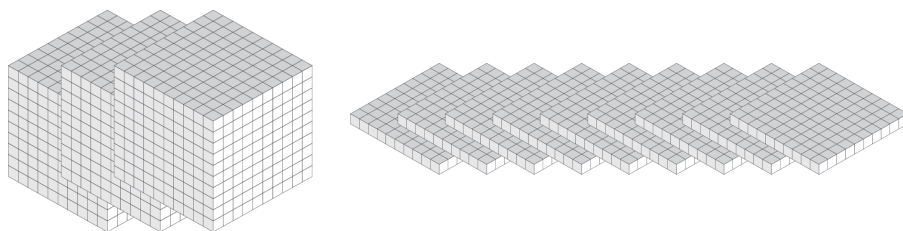


Échange de Blocs de Base Dix (D) Solutions

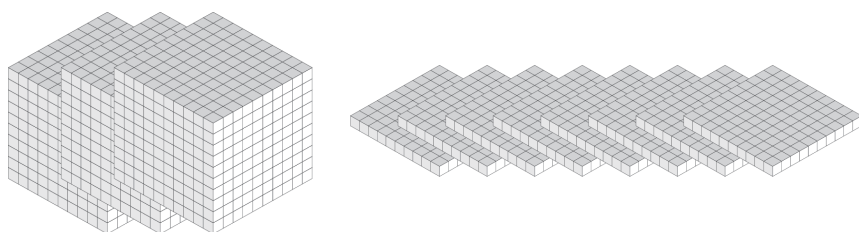
Combien de centaines pouvez-vous échanger pour des milliers? Combien vous en restera-t-il?



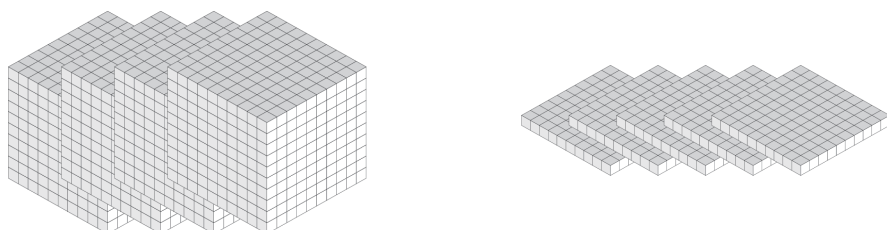
| Milliers | Centaines |
|----------|-----------|
| 3 | 2 |



| Milliers | Centaines |
|----------|-----------|
| 3 | 9 |



| Milliers | Centaines |
|----------|-----------|
| 3 | 8 |



| Milliers | Centaines |
|----------|-----------|
| 4 | 5 |