

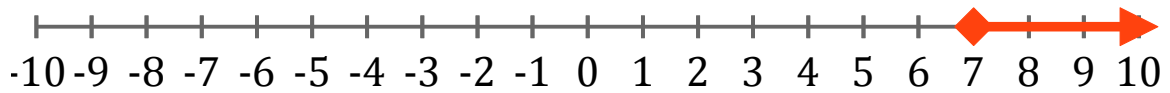
# Systeme d'Inequations (A)

Trouvez les solutions des systemes d'inequations suivantes.

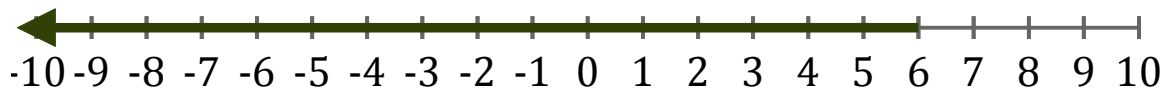
1. \_\_\_\_\_



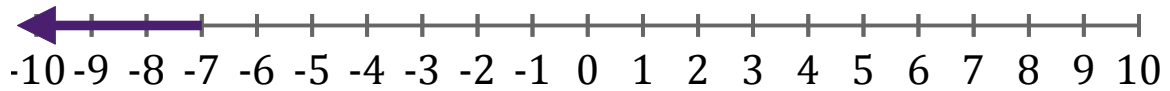
2. \_\_\_\_\_



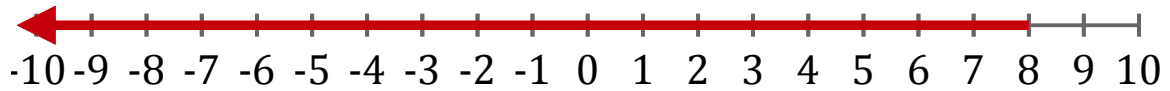
3. \_\_\_\_\_



4. \_\_\_\_\_



5. \_\_\_\_\_



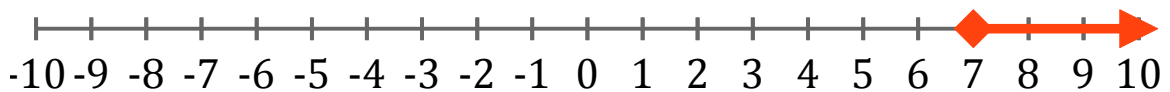
# Systeme d'Inéquations (A) Réponses

Trouvez les solutions des systèmes d'inéquations suivantes.

1.  $x < 2$



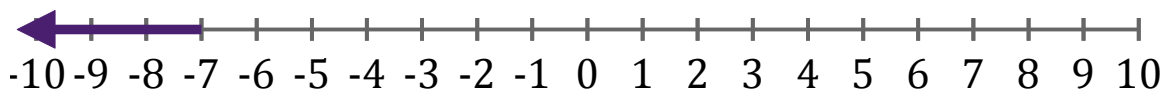
2.  $x \geq 7$



3.  $x < 6$



4.  $x < -7$



5.  $x < 8$



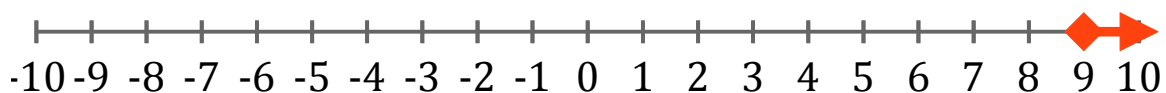
## Systeme d'Inequations (B)

Trouvez les solutions des systemes d'inequations suivantes.

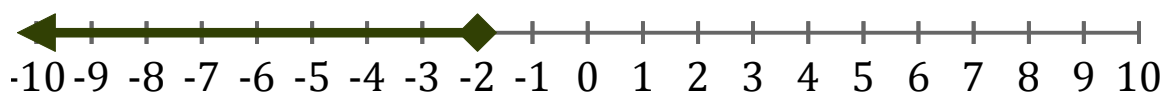
1. \_\_\_\_\_



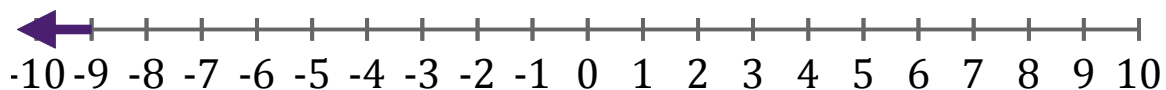
2. \_\_\_\_\_



3. \_\_\_\_\_



4. \_\_\_\_\_



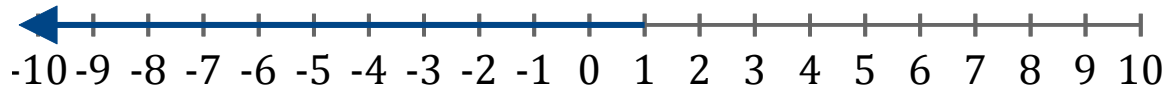
5. \_\_\_\_\_



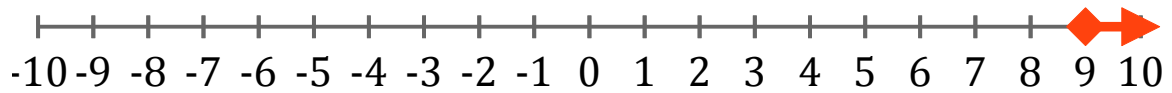
# Systeme d'Inéquations (B) Réponses

Trouvez les solutions des systèmes d'inéquations suivantes.

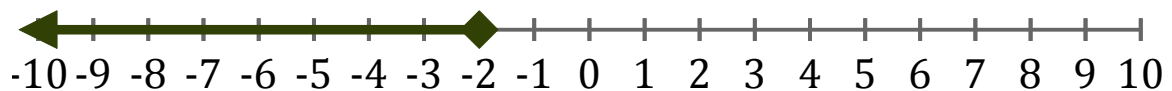
1.  $x < 1$



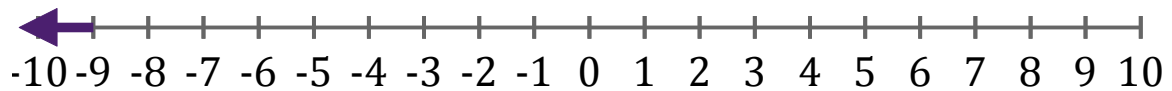
2.  $x \geq 9$



3.  $x \leq -2$



4.  $x < -9$



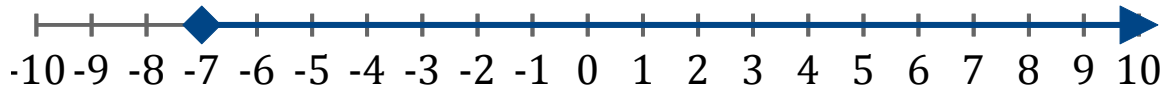
5.  $x > -1$



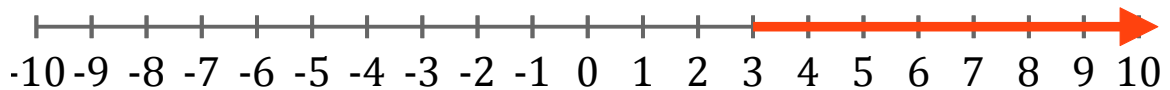
# Systeme d'Inequations (C)

Trouvez les solutions des systemes d'inequations suivantes.

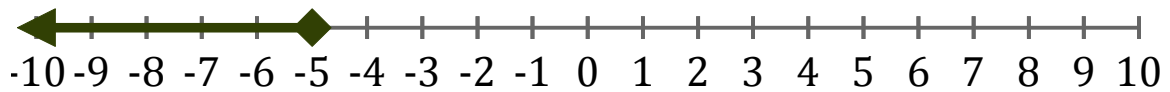
1. \_\_\_\_\_



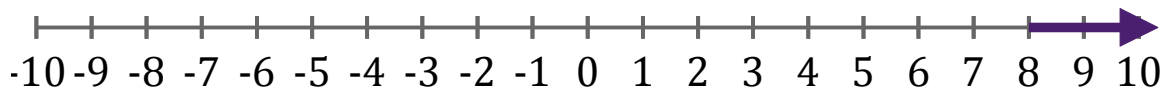
2. \_\_\_\_\_



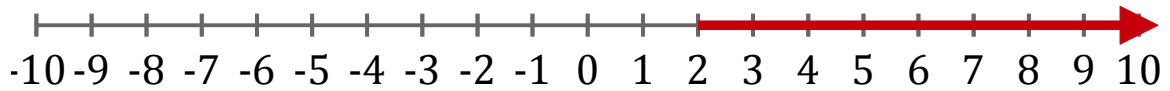
3. \_\_\_\_\_



4. \_\_\_\_\_



5. \_\_\_\_\_



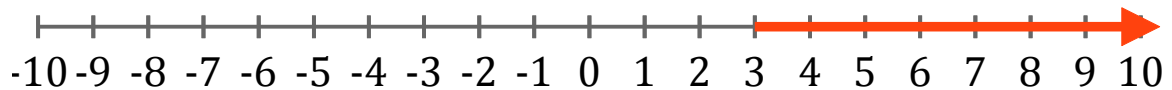
# Systeme d'Inéquations (C) Réponses

Trouvez les solutions des systèmes d'inéquations suivantes.

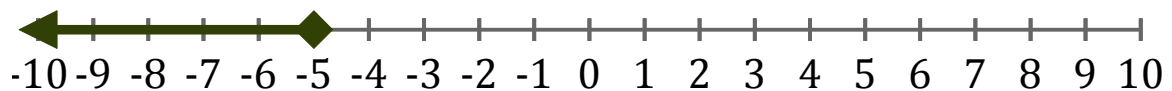
1.  $x \geq -7$



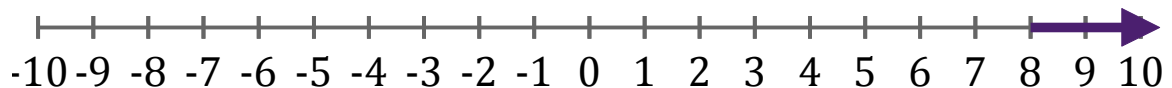
2.  $x > 3$



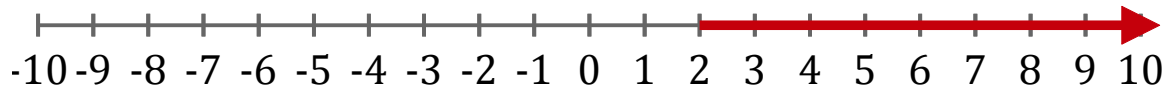
3.  $x \leq -5$



4.  $x > 8$



5.  $x > 2$



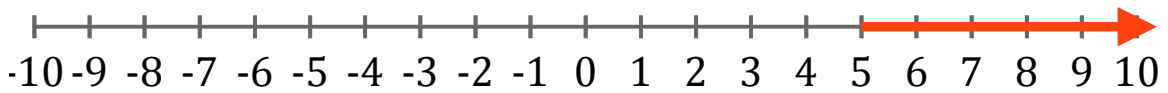
# Systeme d'Inequations (D)

Trouvez les solutions des systemes d'inequations suivantes.

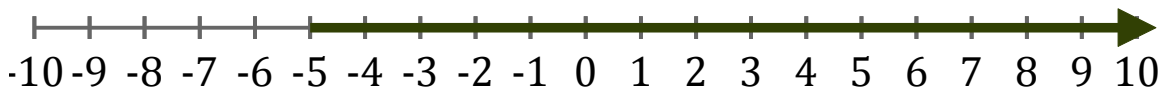
1. \_\_\_\_\_



2. \_\_\_\_\_



3. \_\_\_\_\_



4. \_\_\_\_\_



5. \_\_\_\_\_



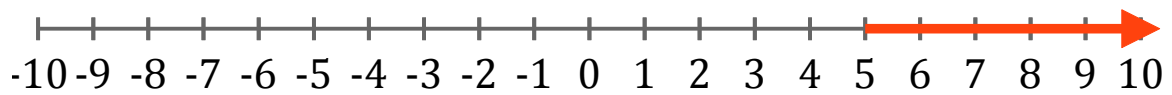
# Systeme d'Inéquations (D) Réponses

Trouvez les solutions des systèmes d'inéquations suivantes.

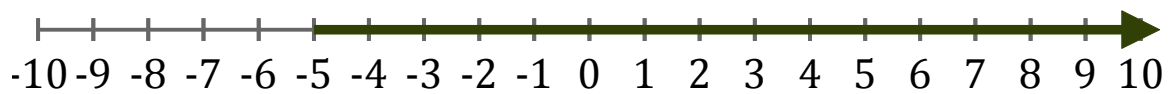
1.  $x < 7$



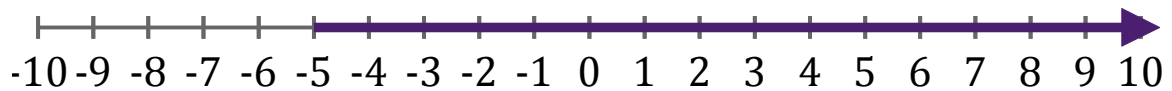
2.  $x > 5$



3.  $x > -5$



4.  $x > -5$



5.  $x \leq 4$

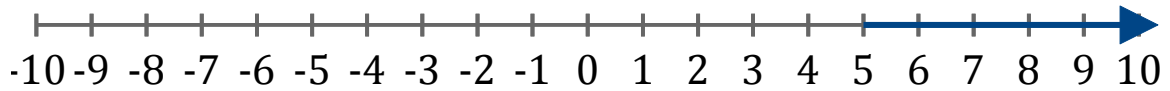




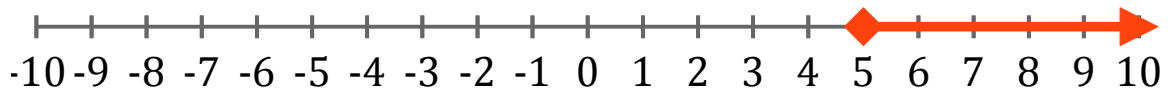
# Systeme d'Inéquations (E)

Trouvez les solutions des systemes d'inéquations suivantes.

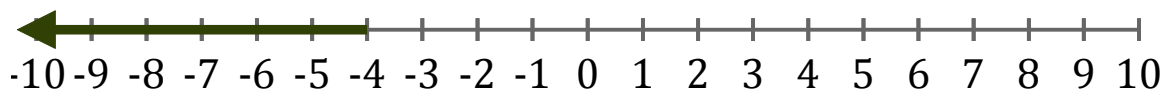
1. \_\_\_\_\_



2. \_\_\_\_\_



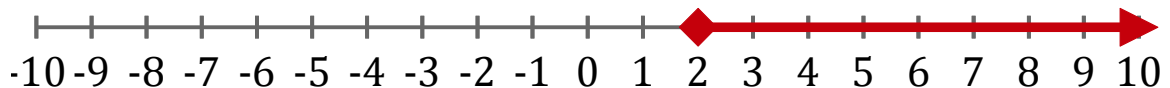
3. \_\_\_\_\_



4. \_\_\_\_\_



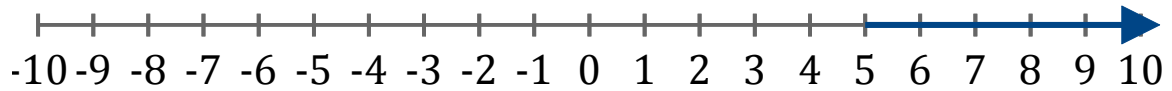
5. \_\_\_\_\_



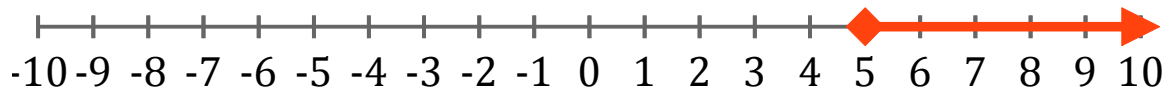
# Systeme d'Inéquations (E) Réponses

Trouvez les solutions des systèmes d'inéquations suivantes.

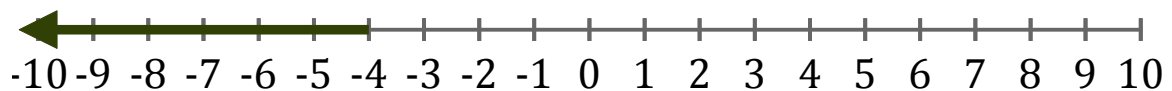
1.  $x > 5$



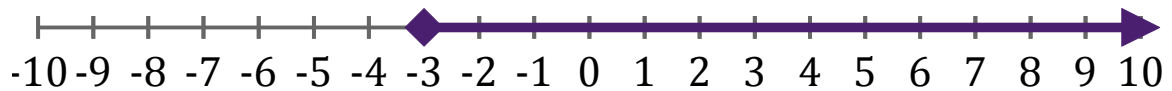
2.  $x \geq 5$



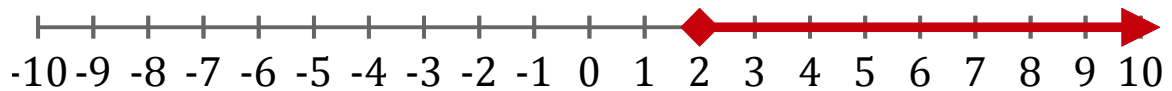
3.  $x < -4$



4.  $x \geq -3$



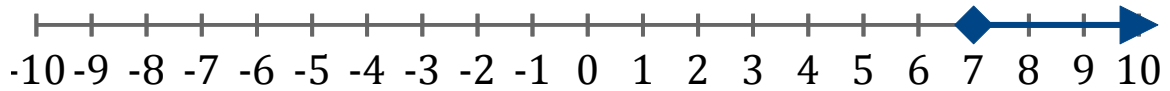
5.  $x \geq 2$



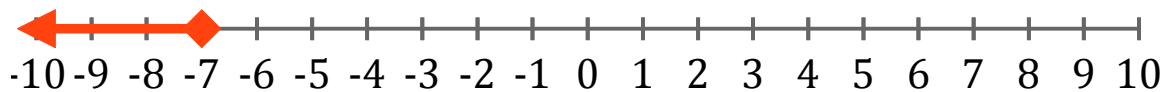
# Systeme d'Inéquations (F)

Trouvez les solutions des systemes d'inéquations suivantes.

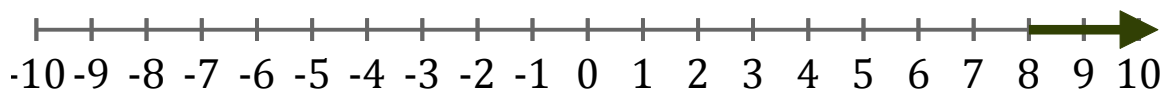
1. \_\_\_\_\_



2. \_\_\_\_\_



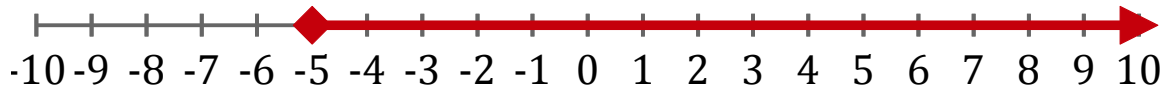
3. \_\_\_\_\_



4. \_\_\_\_\_



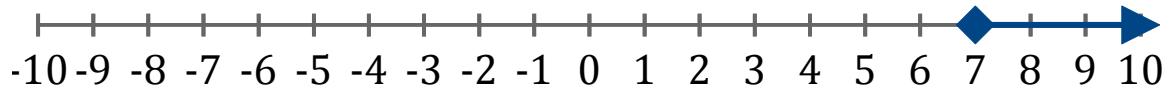
5. \_\_\_\_\_



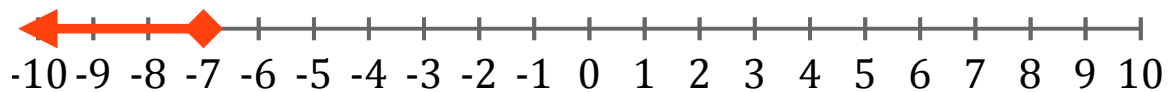
# Systeme d'Inéquations (F) Réponses

Trouvez les solutions des systèmes d'inéquations suivantes.

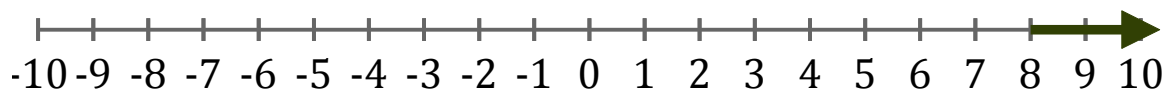
1.  $x \geq 7$



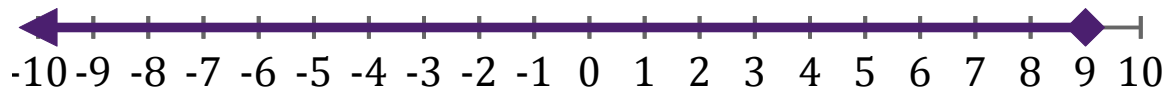
2.  $x \leq -7$



3.  $x > 8$



4.  $x \leq 9$



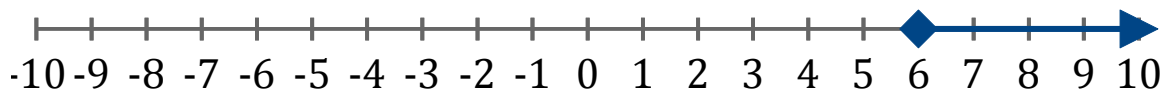
5.  $x \geq -5$



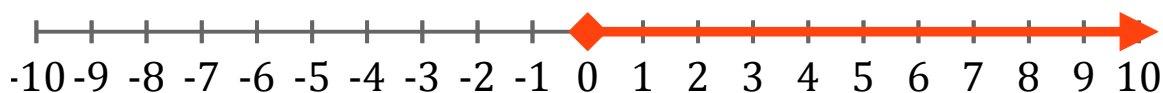
# Systeme d'Inequations (G)

Trouvez les solutions des systemes d'inequations suivantes.

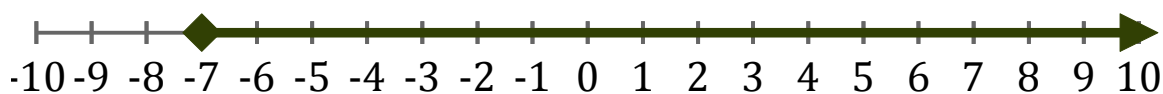
1. \_\_\_\_\_



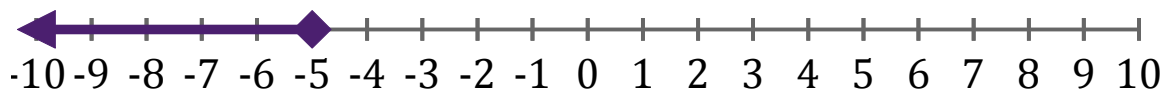
2. \_\_\_\_\_



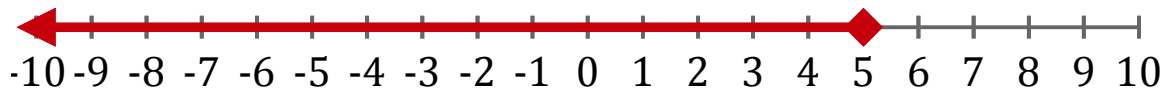
3. \_\_\_\_\_



4. \_\_\_\_\_



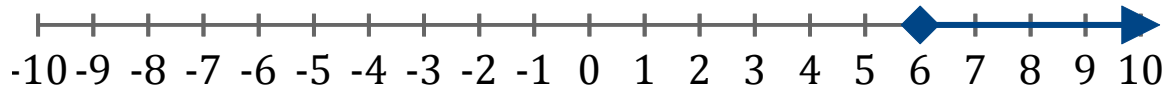
5. \_\_\_\_\_



# Systeme d'Inéquations (G) Réponses

Trouvez les solutions des systèmes d'inéquations suivantes.

1.  $x \geq 6$



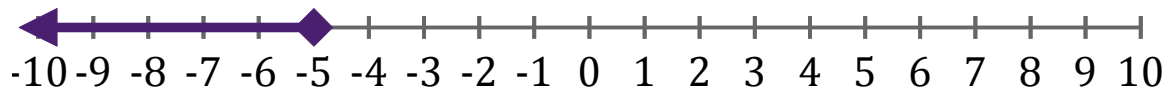
2.  $x \geq 0$



3.  $x \geq -7$



4.  $x \leq -5$



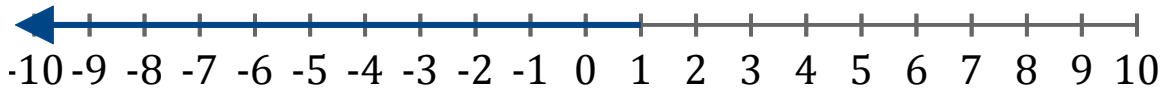
5.  $x \leq 5$



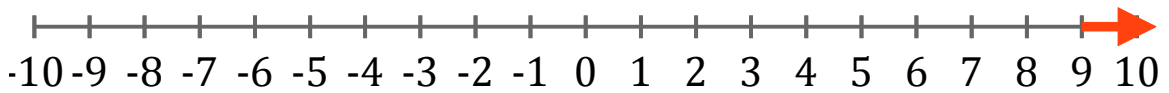
# Systeme d'Inéquations (H)

Trouvez les solutions des systèmes d'inéquations suivantes.

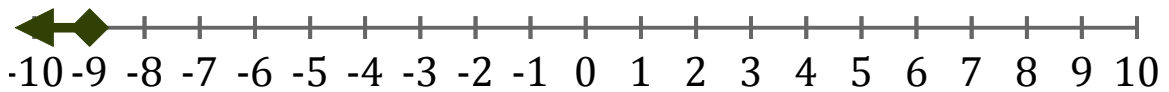
1. \_\_\_\_\_



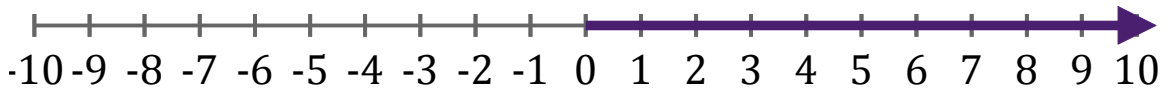
2. \_\_\_\_\_



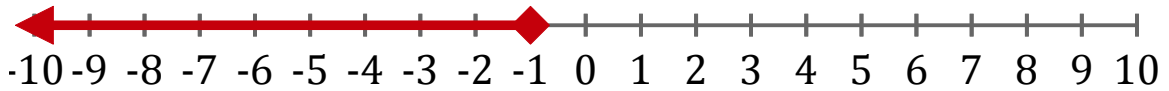
3. \_\_\_\_\_



4. \_\_\_\_\_



5. \_\_\_\_\_



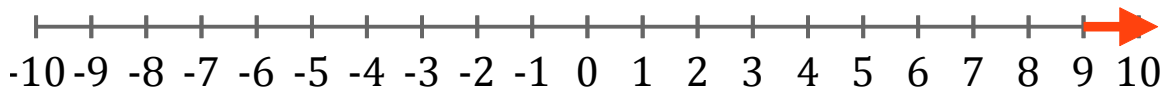
# Systeme d'Inéquations (H) Réponses

Trouvez les solutions des systèmes d'inéquations suivantes.

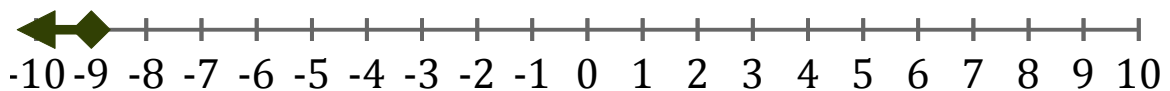
1.  $x < 1$



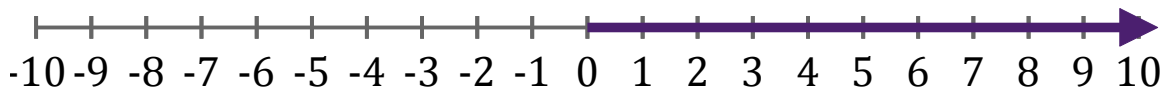
2.  $x > 9$



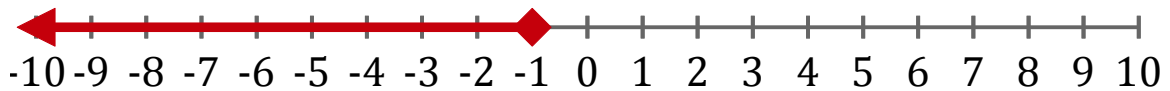
3.  $x \leq -9$



4.  $x > 0$



5.  $x \leq -1$

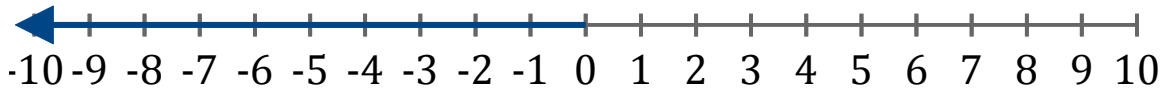




# Systeme d'Inequations (I)

Trouvez les solutions des systemes d'inequations suivantes.

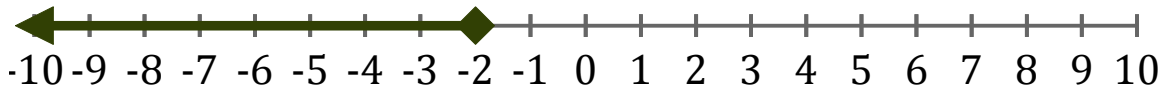
1. \_\_\_\_\_



2. \_\_\_\_\_



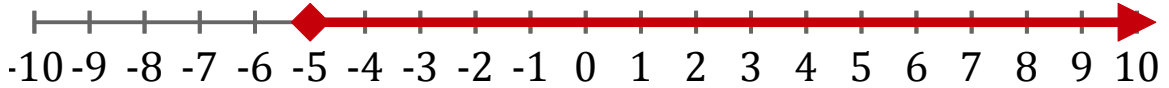
3. \_\_\_\_\_



4. \_\_\_\_\_



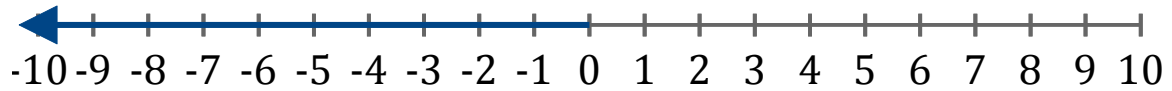
5. \_\_\_\_\_



# Systeme d'Inéquations (I) Réponses

Trouvez les solutions des systèmes d'inéquations suivantes.

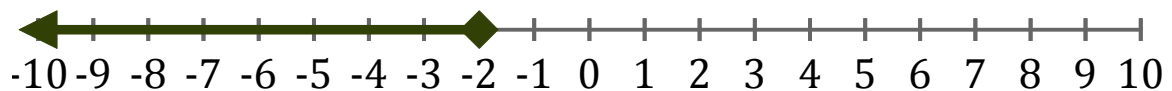
1.  $x < 0$



2.  $x > -3$



3.  $x \leq -2$



4.  $x \leq 5$



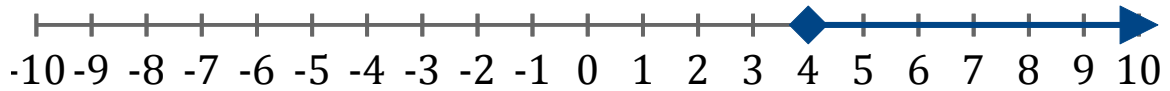
5.  $x \geq -5$



# Systeme d'Inequations (J)

Trouvez les solutions des systemes d'inequations suivantes.

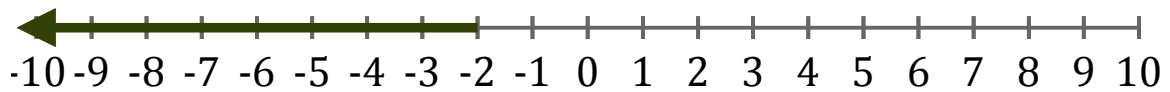
1. \_\_\_\_\_



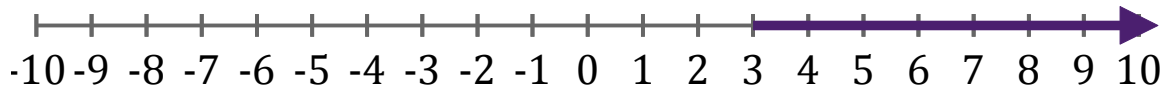
2. \_\_\_\_\_



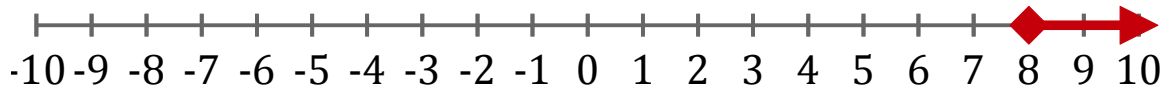
3. \_\_\_\_\_



4. \_\_\_\_\_



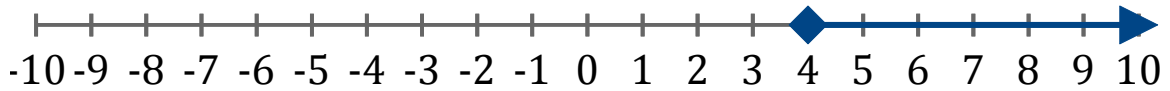
5. \_\_\_\_\_



# Systeme d'Inéquations (J) Réponses

Trouvez les solutions des systèmes d'inéquations suivantes.

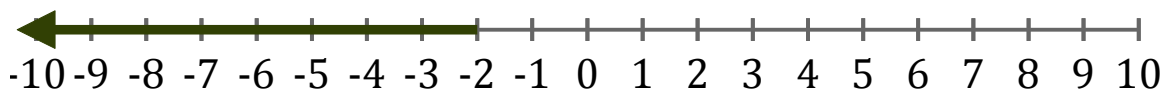
1.  $x \geq 4$



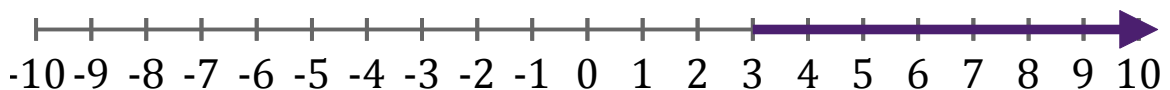
2.  $x < 4$



3.  $x < -2$



4.  $x > 3$



5.  $x \geq 8$

