

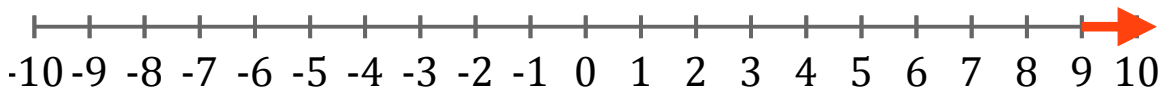
# Systeme d'Inéquations (H)

Trouvez les solutions des systèmes d'inéquations suivantes.

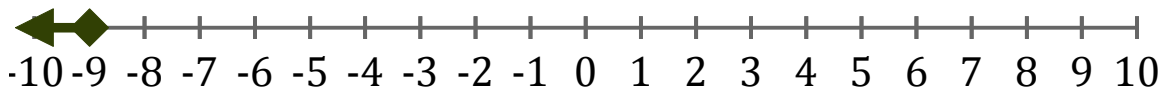
1. \_\_\_\_\_



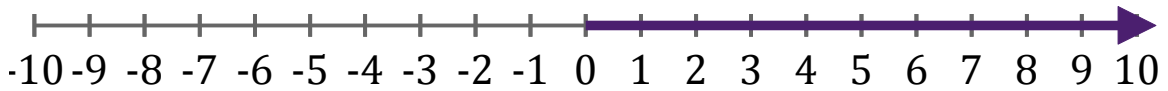
2. \_\_\_\_\_



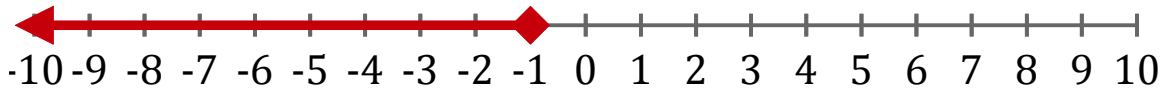
3. \_\_\_\_\_



4. \_\_\_\_\_



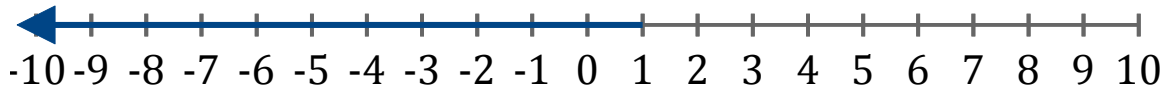
5. \_\_\_\_\_



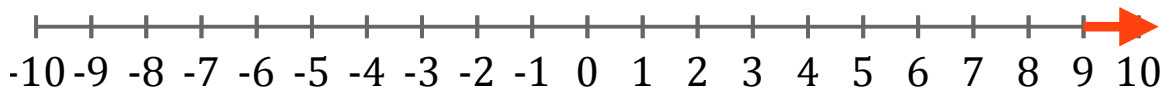
# Systeme d'Inéquations (H) Réponses

Trouvez les solutions des systèmes d'inéquations suivantes.

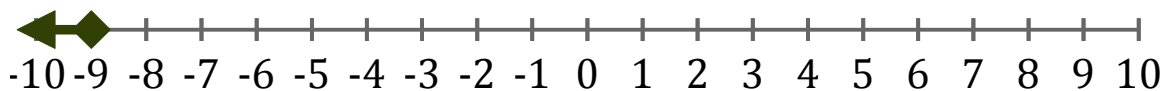
1.  $x < 1$



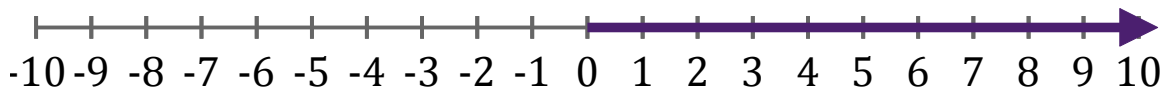
2.  $x > 9$



3.  $x \leq -9$



4.  $x > 0$



5.  $x \leq -1$

