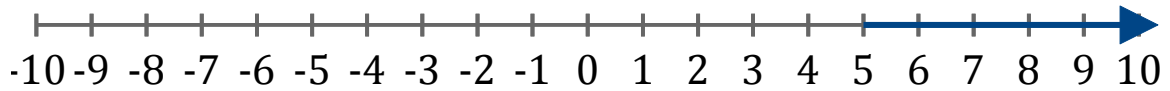


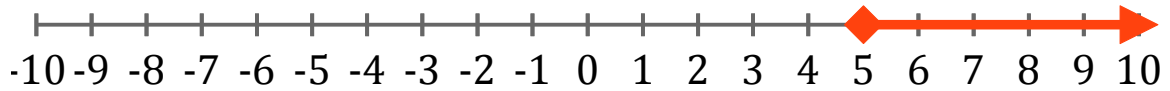
Systeme d'Inequations (E)

Trouvez les solutions des systemes d'inequations suivantes.

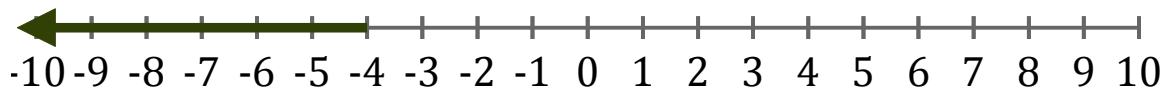
1. _____



2. _____



3. _____



4. _____



5. _____

