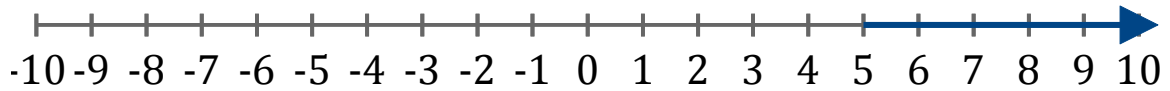


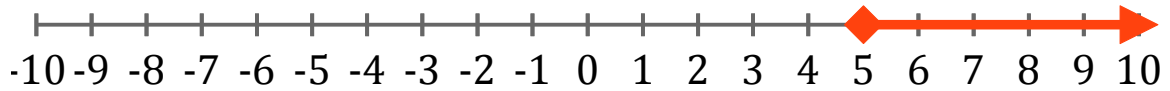
Systeme d'Inéquations (E)

Trouvez les solutions des systemes d'inéquations suivantes.

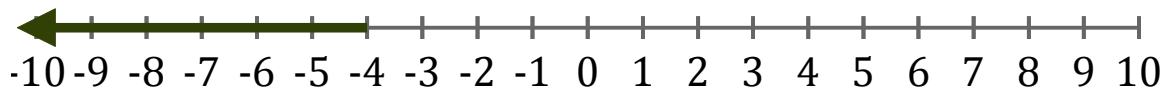
1. _____



2. _____



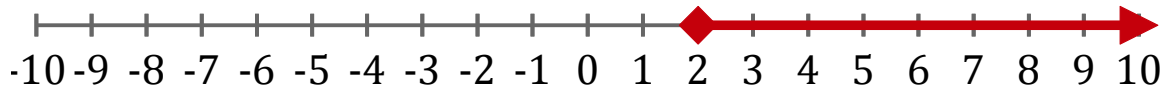
3. _____



4. _____



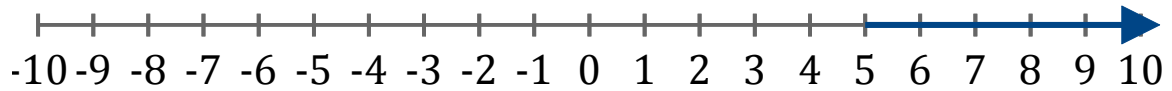
5. _____



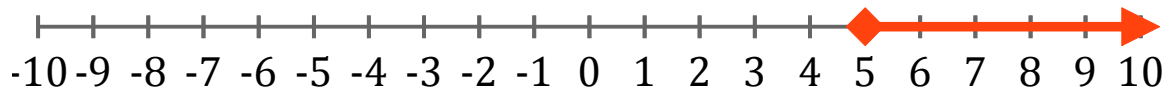
Systeme d'Inéquations (E) Réponses

Trouvez les solutions des systèmes d'inéquations suivantes.

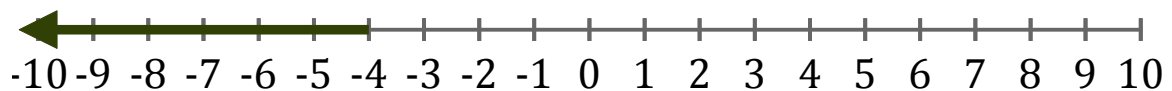
1. $x > 5$



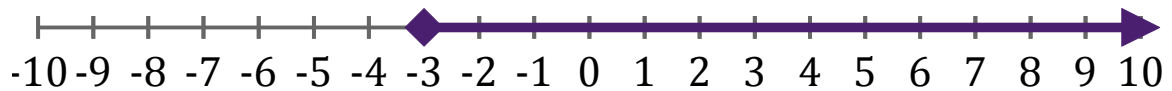
2. $x \geq 5$



3. $x < -4$



4. $x \geq -3$



5. $x \geq 2$

