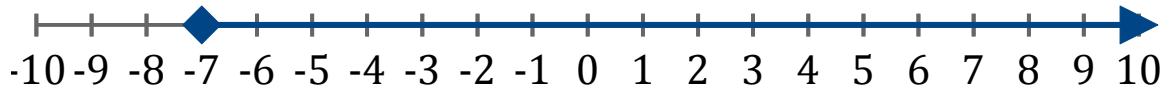


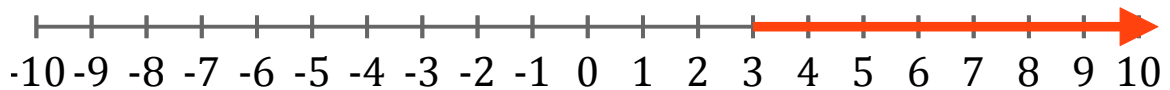
# Systeme d'Inéquations (C)

Trouvez les solutions des systemes d'inéquations suivantes.

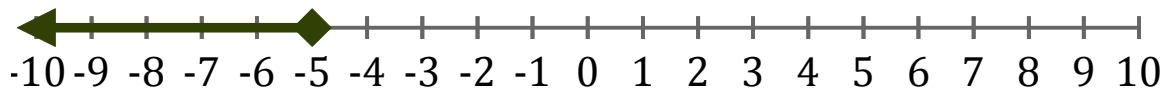
1. \_\_\_\_\_



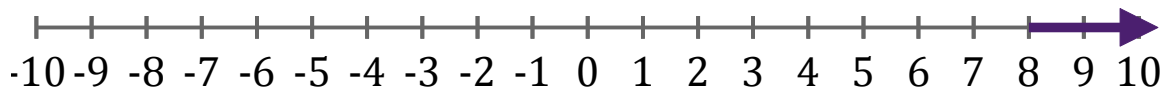
2. \_\_\_\_\_



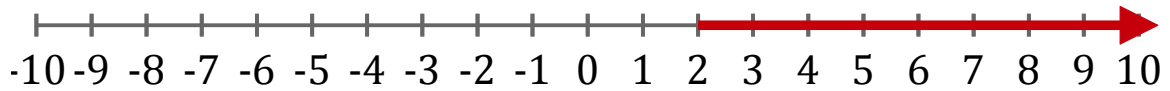
3. \_\_\_\_\_



4. \_\_\_\_\_



5. \_\_\_\_\_



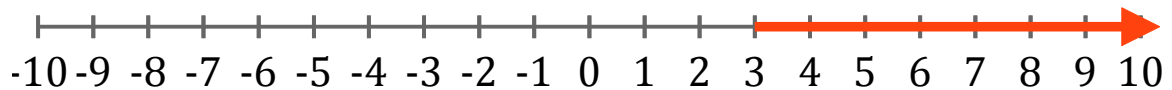
# Systeme d'Inéquations (C) Réponses

Trouvez les solutions des systèmes d'inéquations suivantes.

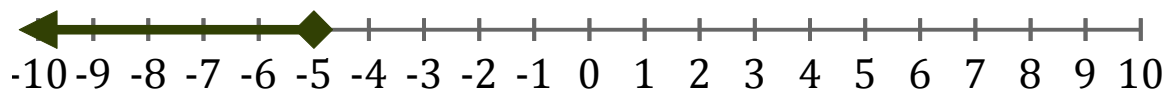
1.  $x \geq -7$



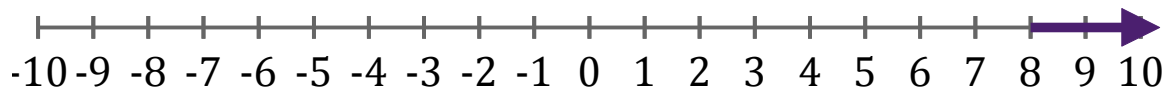
2.  $x > 3$



3.  $x \leq -5$



4.  $x > 8$



5.  $x > 2$

