

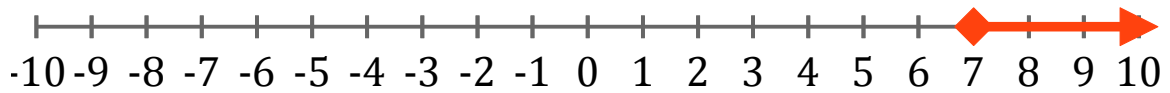
# Systeme d'Inequations (A)

Trouvez les solutions des systemes d'inequations suivantes.

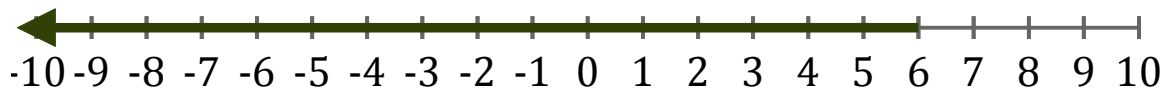
1. \_\_\_\_\_



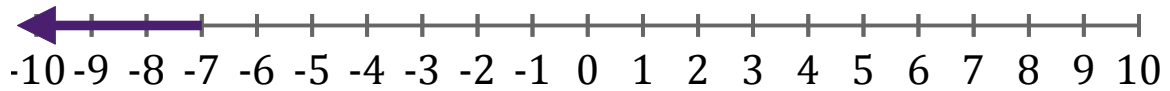
2. \_\_\_\_\_



3. \_\_\_\_\_



4. \_\_\_\_\_



5. \_\_\_\_\_

