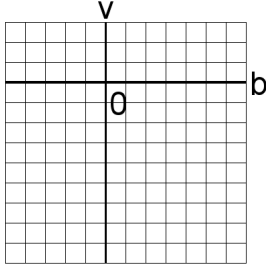


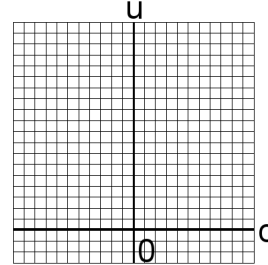
Systèmes Linéaires et Graphiques (J)

Trouvez la solution de chaque système d'équations à l'aide du graphique.

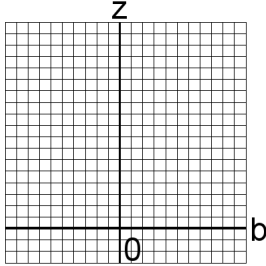
1. $-5b + 5v = -45$
 $b - 4v = 18$



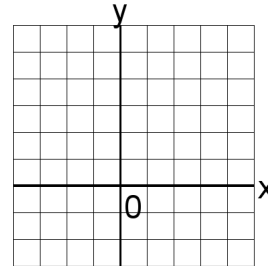
4. $-5c + 2u = 37$
 $-2c - 3u = -8$



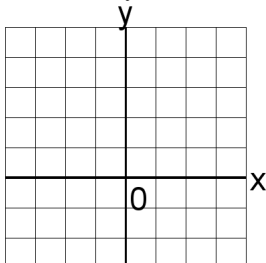
2. $-b + z = 0$
 $5b + z = 18$



5. $2y = 10$
 $2x + 5y = 23$



3. $x = 2$
 $-5x - 3y = -13$



6. $3a + 2c = 8$
 $4a + c = 14$

