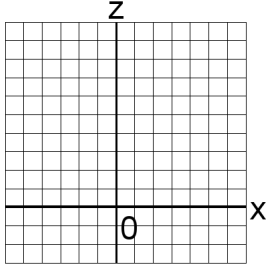


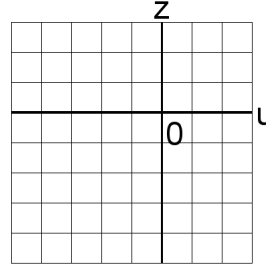
Systèmes Linéaires et Graphiques (H)

Trouvez la solution de chaque système d'équations à l'aide du graphique.

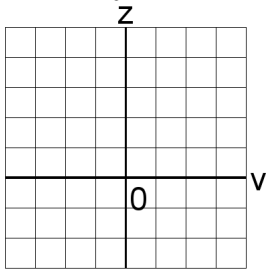
1. $-4x + z = 10$
 $x + 3z = -9$



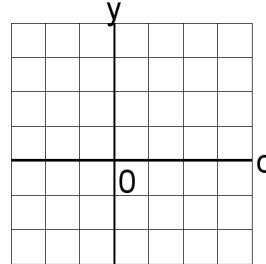
4. $-5u - 4z = 20$
 $4u + 4z = -16$



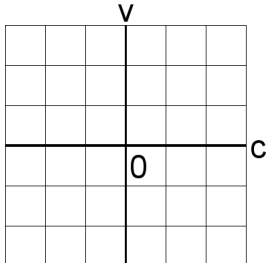
2. $2v + z = 5$
 $-v - 4z = 1$



5. $-4c + 5y = -7$
 $3c = 9$



3. $5c - 4v = 4$
 $5c - 3v = 3$



6. $-y = -5$
 $2u + 6y = 34$

